

KVS,ZONAL INSTITUTE OF EDUCATION & TRAINING, CHANDIGARH



WORKSHEETS

CLASS : V

(All Subjects)

Mentor

SHRI. MUKESH KUMAR

DY. COMMISSIONER AND DIRECTOR

Edited & Compiled by

- 1. SH. VIPIN KUMAR, TA (PRIMARY)**
- 2. SH. RANAJIT KONDHARE, TA (PRIMARY)**

ICE- CREAM MAN

Read the following poem and answer the questions below it:

1)A thirsty fox one day espied, High up upon a vine, A bunch of grapes. He looked and said, “I wish those grapes were mine.” ‘No bite have I yet had nor sup, My thirst is getting stronger, If I can eat those berries up, I’ll thirsty be no longer.”	2)The ground was bare, the grapes hung free, The fox’s leads were many. “Just one inch I’m short”.Said he. Of grapes he got not any. For long he tried, and tried in vain; His legs had lost their power . Said he with wisdom: “I’ll refrain; I’m sure those grapes are sour.”
--	--

Questions:

1) What did the fox see?

2) Why did he wish to have the grapes?

3) What did he do to reach the grapes?

4) Were the grapes really sour?

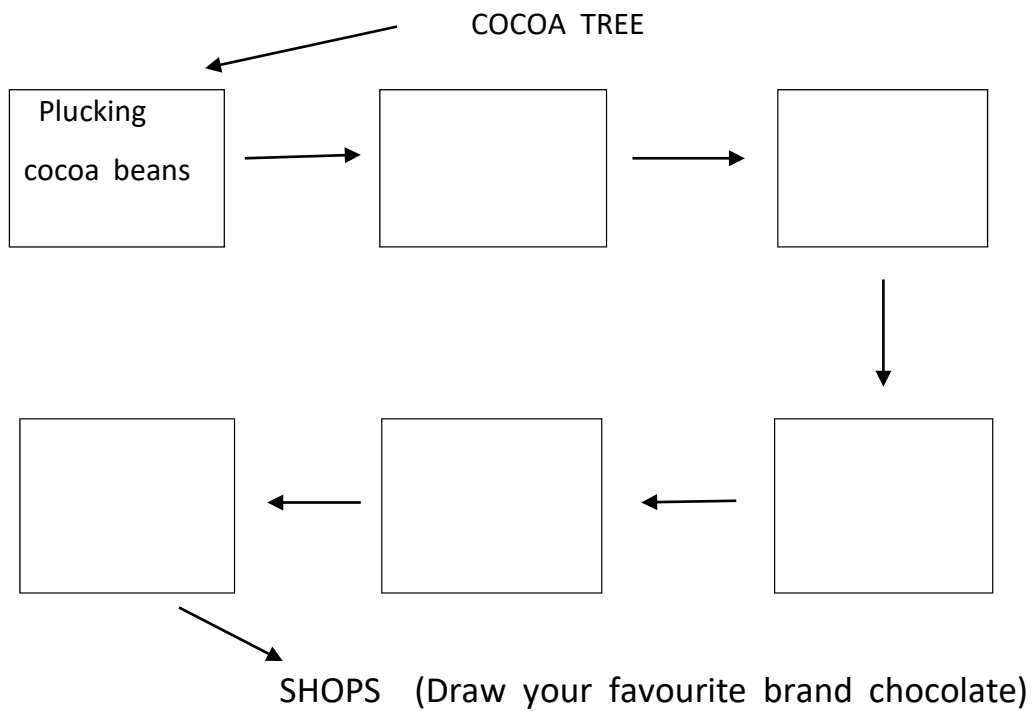
5) Why did he then leave off trying ?

6) What does “I’ll refrain” mean ?



Complete the flow chart using the clues from the box:

Beans taken out of pod – fermented - dried /shipped of factory - roasted in ovens / chocolate liquor /milk ,sugar ,cocoa butter – heated – nuts or fruits added /moulded into shape



ZONAL INSTITUTE OF EDUCATION & TRAINING, CHANDIGARH

Class: V

Sub: ENGLISH

WONDERFUL WASTE

Fill in the blanks with a suitable describing word


1. Uma is an _____ girl.



2. We had a _____ time in the park.



3. That _____ shirt is mine.



4. Raj wants some _____ time for preparation.

5. Yesterday my mother prepared a _____ dinner.

6. The blue whale is a _____ animal.



7. Big vehicles need _____ road to move about.

8. Bangalore is a _____ city.

9. Lata was given a _____ bouquet on her birthday.



10. Yellow is my _____ colour.

11. My father gave me a _____ book.

12. There are _____ players in the cricket team.

13. I ate _____ bananas for breakfast.

14. Deepika painted a _____ scenery.



15. Cut the apple with a _____ knife.

TEAMWORK

Look at the pictures. Write questions using the helping words given. Then, write answers to your questions.







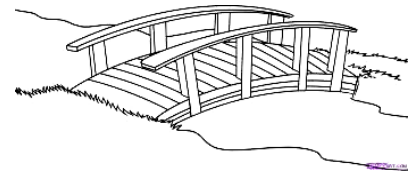

HELP WORDS

1. Where rain
2. What subjects school
3. Why plant green

FLYING TOGETHER

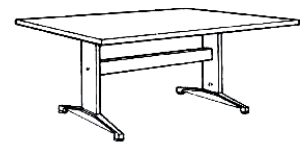
Fill in the blanks with prepositions :

1. My uncle lives _____ Mumbai.
2. The classes start _____ 9 O' clock.
3. Don't put the cup _____ the table.
4. I go to school _____ foot.
5. He is good _____ English.
6. The boy ran _____ the dog.
7. The sun rises _____ the east.
8. She goes to school _____ bus.
9. We drove _____ the bridge.
10. Mr. Kamal is _____ Mumbai.
11. She has been absent _____ Monday.
12. Delhi is the capital _____ India.



Write the past tense of :

- | | | |
|----------|---|-------|
| 1. learn | - | reply |
| 2. ask | - | write |
| 3. try | - | take |
| 4. buy | - | know |
| 5. say | - | hide |
| 6. make | - | eat |



WORD MAZE

Find the Nouns hidden in the given grid .



t	g	s	o	r	r	o	w
h	r	g	r	i	e	f	h
i	e	l	p	a	i	n	a
r	e	o	f	e	a	r	t
s	d	v	j	o	y	x	e
t	x	e	a	n	g	e	r
e	p	q	m	a	c	p	t

- | | |
|----------|-----------|
| 1) _____ | 2) _____ |
| 3) _____ | 4) _____ |
| 5) _____ | 6) _____ |
| 7) _____ | 8) _____ |
| 9) _____ | 10) _____ |




Build as many words as possible from the following . you can use one letter any number of times ,if necessary :

- | | | |
|-----------------------------|-------|-------|
| 1) A E H L N T I --- | _____ | _____ |
| 2) E K M N O Y --- | _____ | _____ |
| 3) R A T N M E --- | _____ | _____ |

MY SHADOW

Find out from the poem :


1. A word which means a yellow flower
2. A word which is the antonym of awake
3. A heavenly body
4. The plural of child
5. The name of a country
6. Two parts of the body
7. Two adjectives
8. One pair of rhyming words



II. Rearrange the letters to make meaningful words [given in the poem]


There are clues to help you. The first one is done for you.

1. OMEH : It rhymes with DOME. We all live in it. HOME
2. LALB : It rhymes with CALL. We play with it. _____
3. YALZ : It rhymes with HAZY. It is opposite of active. _____
4. YREAL : It rhymes with CURLY. It is the opposite of late. _____
5. PMJU : It rhymes with HUMP. You often do it. _____



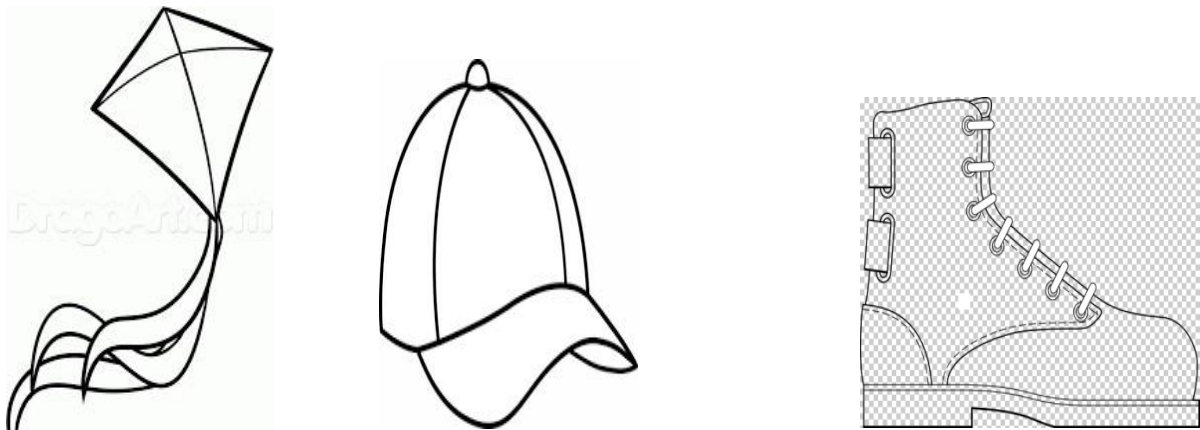
Unscramble the jumbled words given below to know the correct words.

- | | |
|-------------------|--------------------|
| 1) TMA -- _____ | 6) LETTUR -- _____ |
| 2) VOGEL -- _____ | 7) PAC -- _____ |
| 3) ESHO -- _____ | 8) TCROU -- _____ |
| 4) TOBO -- _____ | 9) EBDIRG -- _____ |
| 5) ALINS -- _____ | 10) TKIE -- _____ |



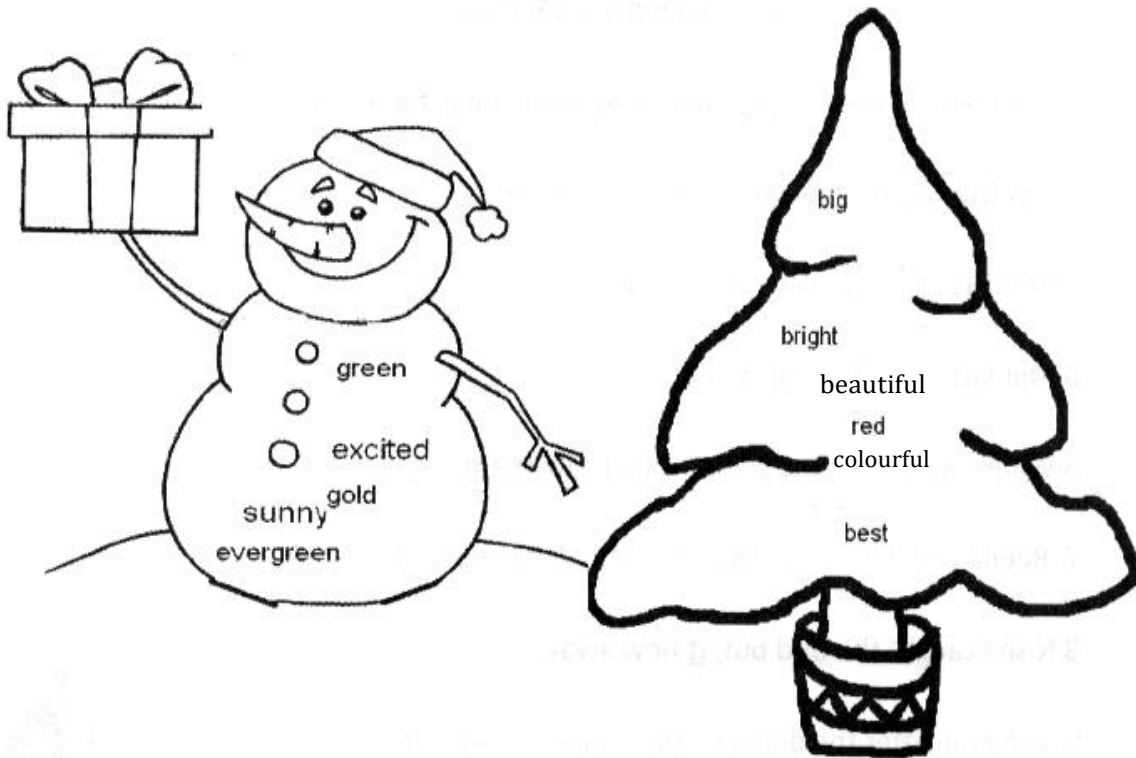
RIDDLES:

- | | |
|-------------------------------------|-------|
| 1) What has an eye but cannot see ? | _____ |
| 2) What has a head but no face ? | _____ |
| 3) What has hands but no fingers ? | _____ |
| 4) What has a foot but no knee ? | _____ |
| 5) What has teeth but cannot bite ? | _____ |
| 6) What has legs but cannot walk ? | _____ |



ROBINSON CRUSOE

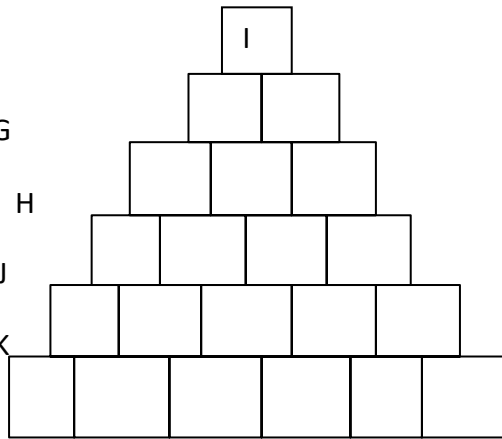
Use the **adjectives** in the picture to complete the story below. As you read the story, **add parts to your picture.**



It was a _____ day in December. The _____ children ran outside to make a _____ snowman. They decided to put the snowman next to the _____ tree. After they finished making the _____ snowman, they decorated the tree for Christmas. They put a _____ star at the top of the tree for Christmas. They added _____ , _____ and _____ balls. Now _____ tree looks very _____ tree.

WORD PYRAMID

- I) A two letter word beginning with G
- II) A three letter word beginning with H
- III) A four letter word beginning with J
- IV) A five letter word beginning with K
- V) A six letter word beginning with L



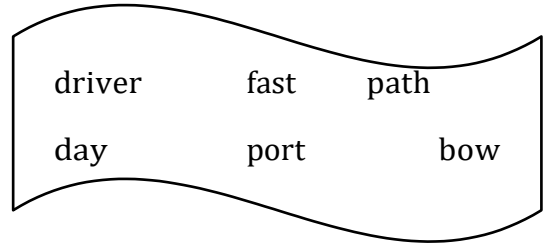
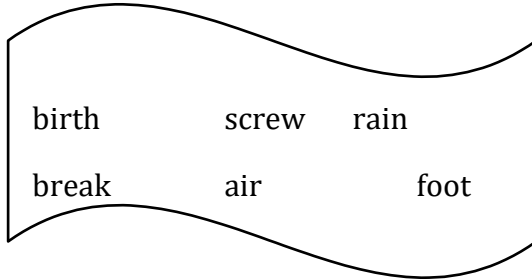
Make words from the letters in the box and match them with their descriptions:

- a) A place where living animals are kept. _____ h p e e o t l n e
- b) You can't speak if you have a sore. _____ d r o w e
- c) Most people in India love to watch an
India – Australia cricket _____ o z o
- d) A big _____ gathered at the beach. c h t m a
- e) My friend likes chilled _____ juice. t t h o a r
- f) You use this to ring up someone : _____ r o a e n g
- g) The biggest land animal _____ l s p e e a
- h) A polite word _____ p n e t a l e h



CRYING

I. Match the two groups of words to make compound words :



- a] _____
- b] _____
- c] _____


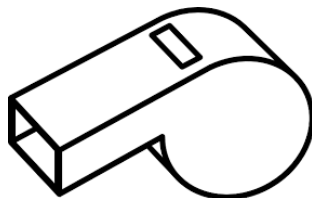
- d] _____
- e] _____
- f] _____

2. Fill in the blanks with the help of clues :

- a] A ship does not swim. It f ____ o a
- b] Snakes do not run. They c ____
- c] We do not ring a whistle. We l ____ it.

3. List three situations in which children usually cry :

- a] _____
- b] _____
- c] _____



CROSSWORD PUZZLE

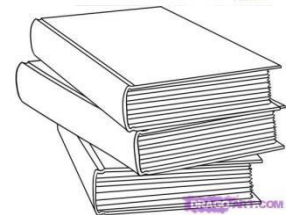
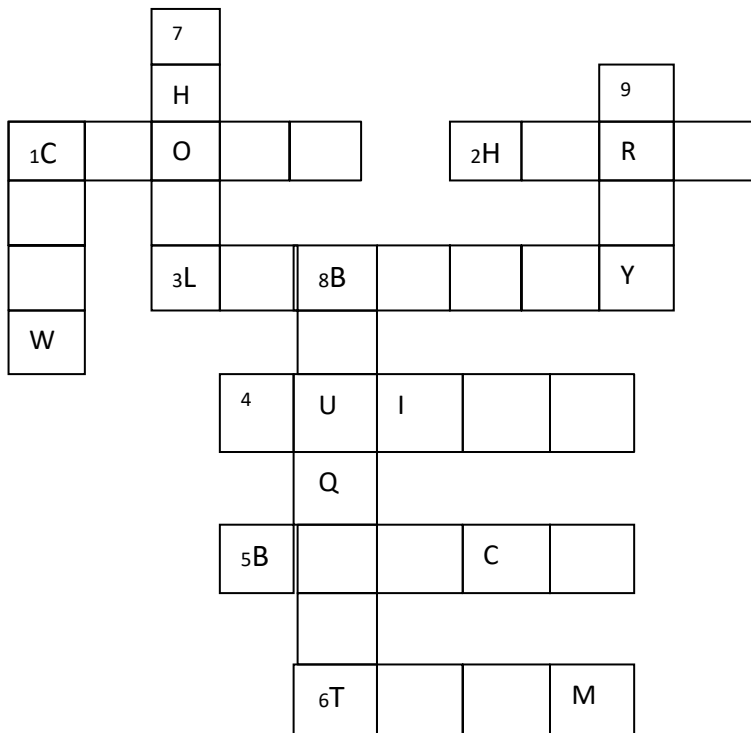
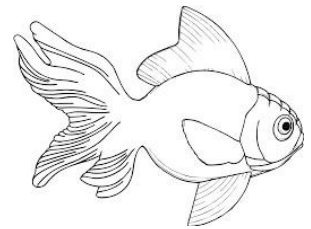
Solve the following puzzle with the help of the clues given :

Across

1. A _____ of people
2. A _____ of cattle
3. A _____ of books
4. A _____ of rooms
5. A _____ of bananas
6. A _____ of players

Down

1. A _____ of sailors
7. A _____ of fish
8. A _____ of flowers
9. An _____ of soldiers



ZONAL INSTITUTE OF EDUCATION & TRAINING, CHANDIGARH

Class: V

Sub: ENGLISH

MY ELDER BROTHER


STORY WRITING

Expand the following outline into a story of about 100 words :

A wood cutter - dropped the axe into a river - prayed to God - God gave golden axe - the wood cutter refused to take - - then a silver axe - refused - god showed iron axe - accepted - God pleased - god rewarded him.

MORAL : _____

DRAW AN AXE:



Match the riddles to the correct item / object on the right.

1. You toss me. • troubles
I land on my side.
I land on one side although I have six.
What am I ?



2. It is easy to get into me. • information
But hard to get out of me.
What am I ?



3. You can see me. • smoke
But you can never catch me.
What am I ?



4. Edible I am not. • dice
Yet I can be digested.
What am I ?



5. I fly. • time
Sometimes really fast.
Sometimes awfully slow.
What am I ?

6. Round like a ball. • feathers
Hot like fire.
What am I ?



7. People admire me as a person. • clock
Yet I am not alive.
What am I ?

8. I cover an animal. • letters with stamps
I hide inside a pillow.
I can even be part of a cleaning instrument.
What am I ?

9. I leave with your message. • statue
And never return.
What am I ?



10. My hands do the walking. • the Sun
What am I ?

THE LAZY FROG

Write true sentences about yourself.

Write about people you like, a game you play, a hobby, a habit you have.

Use the following clues.

I love

I like

I don't mind

I don't like

I hate

Rhyming Fun

Add words to rhyme with the given word.



frog

loll

heap

RIP VAN WINKLE

Write the appropriate word using the clues :

a] Hilly land on the lower slopes of mountains.

f _ _ _ h _ _ _ _ _



b] Away from the right path or direction.

_ _ s _ _ _ a _ _



c] Any plant that crowds out cultivated plants.

w _ _ _ d _ _

d] A person who is frequently in the company of another.


c _ _ _ _ a _ _ _ _ n



e] Dreaming while awake

d _ _ _ d _ _ _ _ m

II. Describe Rip Van Winkle :



CLASS DISCUSSION

Read the Notice and answer the following questions:

NOTICE

The Fancy Dress Competition for Classes I – V will be held on 18.11.20 , in the Badminton Court during the CCA periods. The students who are interested to take part may give their names to Mrs._____.

Original and innovative costumes will be preferred over hired or readymade costumes.

CCA Co-ordinator

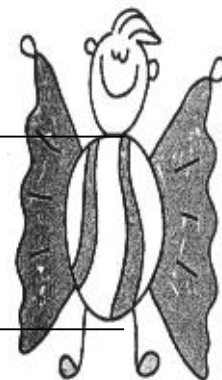
1. Which competition was announced in the Notice?

2. When was the competition to be held?

3. Where would it be held?

4. To whom were the interested students to give the names?

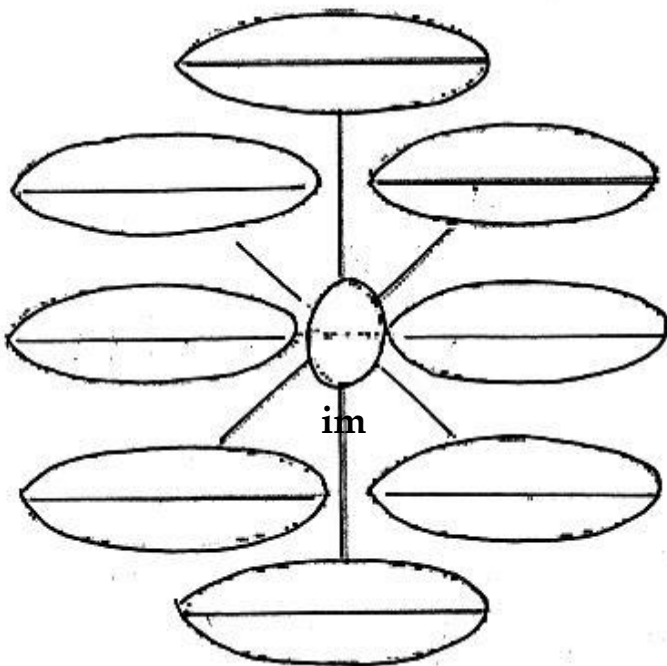
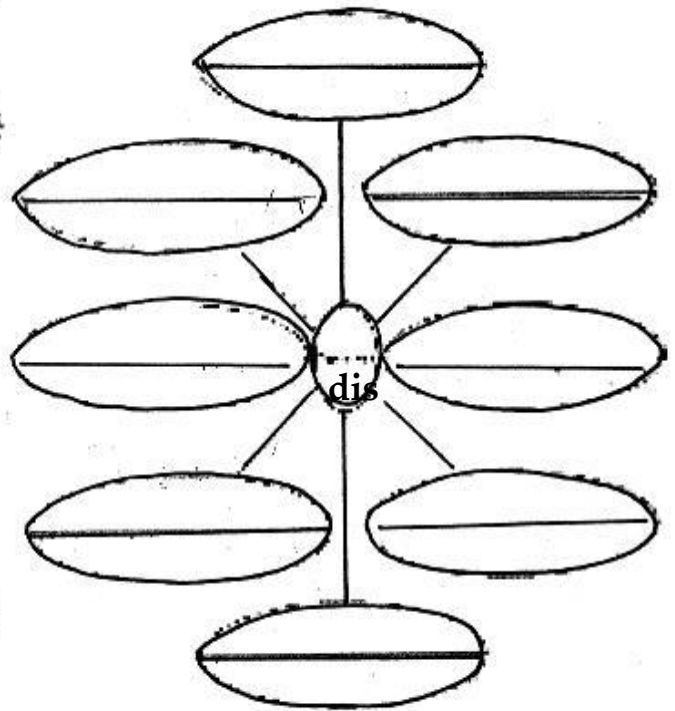
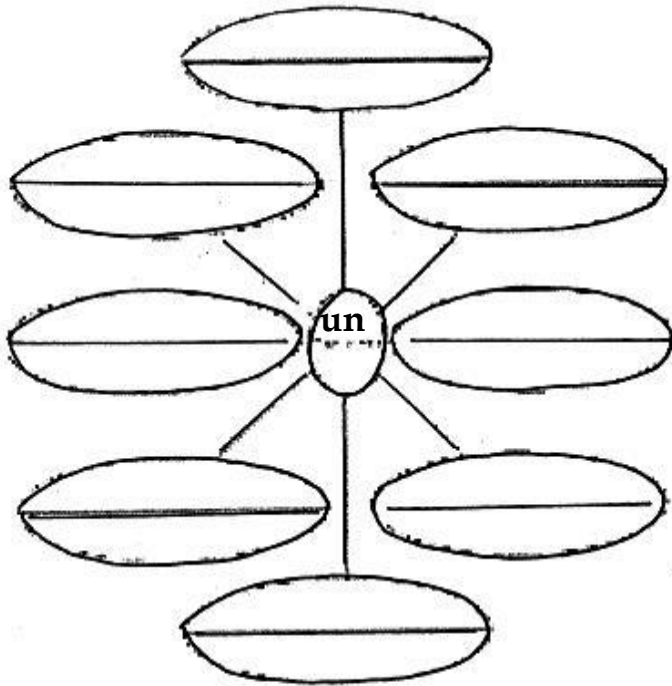
5. What kind of costumes was preferred?



THE TALKATIVE BARBER

Make pairs of words opposite in meaning using prefix :

un , im , dis



MATCHING PAIRS

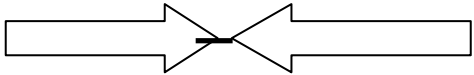
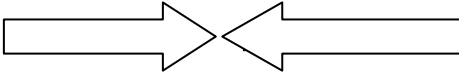
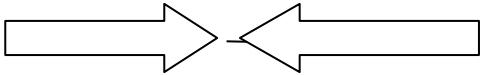
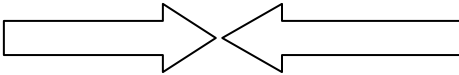
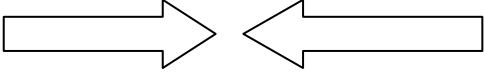
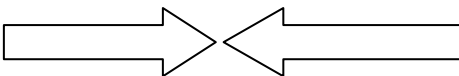
Joining the prefixes and write the words below:

PRE	DIS	INTER	CAUTION	GROUND	LEGAL
IR	IN	EXTRA	STAIRS	HONEST	ORDINARY
RE	IL	UNDER	TURN	NUMERABLE	RESPONSIBLE
	UP		CHANGE		

WRITE THE JOINING WORDS :

- | | |
|----------|-----------|
| 1) _____ | 2) _____ |
| 3) _____ | 4) _____ |
| 5) _____ | 6) _____ |
| 7) _____ | 8) _____ |
| 9) _____ | 10) _____ |

Write some more matching pairs

	—	
		
		

TOPSY – TURVY LAND

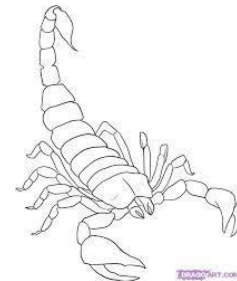

Write some words which rhyme with these words:-

1. sand
2. street
3. treasure
4. head
5. pay
6. boat

I. Choose the correct answer among these:-

(life, lives, live)

1. Three _____ were lost in the fire.
2. Do you like to _____ in the North?
3. Did you watch the _____ cricket match?
4. Where do you _____?
5. Peter still _____ with his parents.
6. Have you ever seen a real _____ scorpion?
7. My father's words have lived with me all my _____.
8. Who _____ in near Seema's house?
9. My great-grandfather lost his _____ in World War II.
10. I _____ with my aunt.



GULLIVER'S TRAVELS

Look at the picture. Write a composition of about 60 words. You may see the words in the box to help you write your story.

An Unfriendly Giant



village children as tall as destroy
giant frightened roared fierce

PLURAL

Irregular plurals

1) Mouse _____

2) Man _____

3) Goose _____



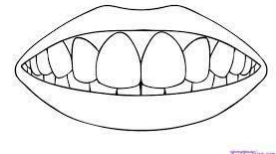

4) Tooth _____

5) Child _____

6) L ouse _____

7) Foot _____

8) Ox _____



Write the singular- plural

Deer _____


Moose _____

News _____

Trousers _____


Mathematics _____

Scissors _____



NOBODY'S FRIEND

SIMILE CROSSWORD



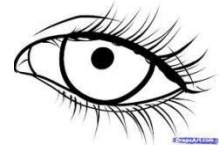
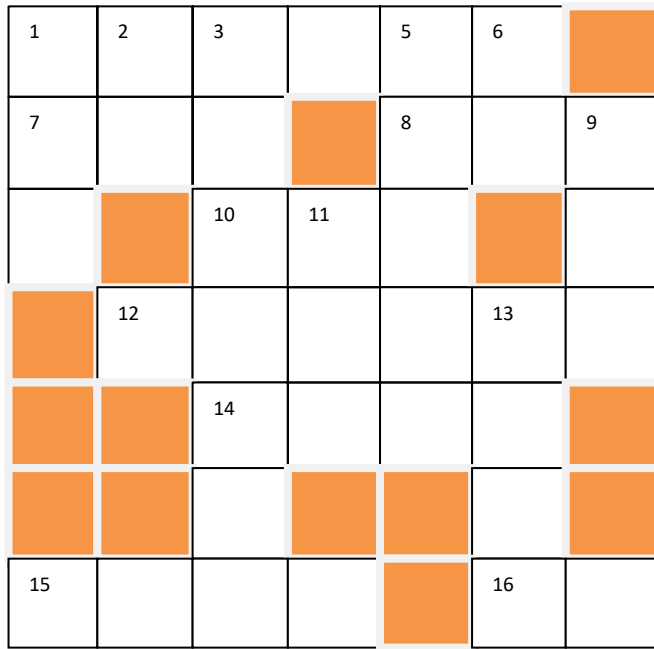
Across

Down

- | | |
|---------------------------|---|
| 1. As _____ as a feather. | 2. As tall as a _____ |
| 3. Fly like a _____ | 3. As _____ a bee. |
| 4. Swim like a _____ | 5. As _____ as a mule. |
| 7. Cry like a _____ | 6. <u>Waddle</u> means to walk like a _____ |
| 9. As _____ as a bunny. | 7. As blind as a _____ |
| 11. As _____ as an ox. | 8. As _____ as a mouse. |
| 12. As _____ as an eel. | 10. As _____ as ice. |
| 14. As slow as a _____ | 11. As _____ as a fox. |
| | 13. Eat like a _____ |
| | 14. As white as _____ |



CROSSWORD PUZZLE



ACROSS

- 1) Looked fixedly with eyes wide open
pigs
- 7) Opposite of bottom
- 8) Steal
- 10) A fairy jab," The Princess on a _____"
- 12) Bullied
- 14) Region
- 15) Hurry
- 16) Rhymes with 'no'



DOWN

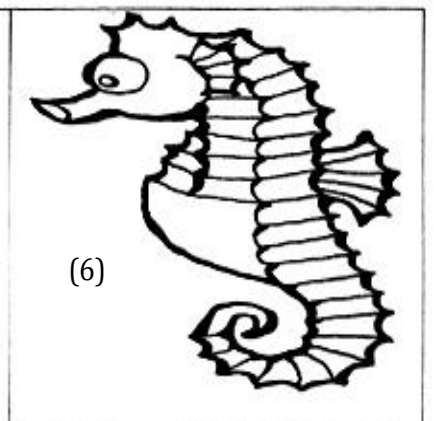
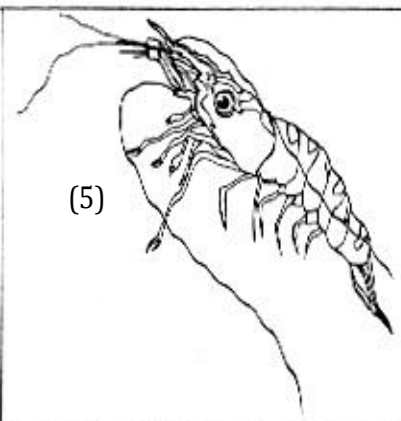
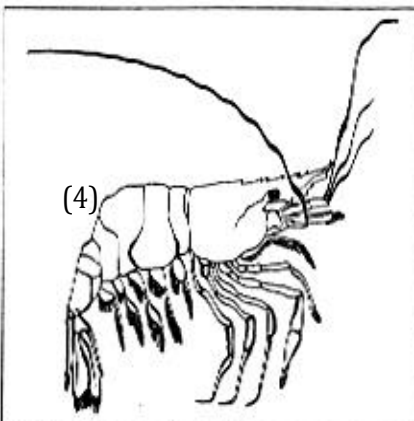
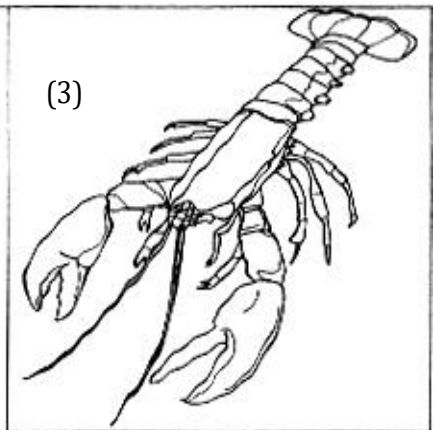
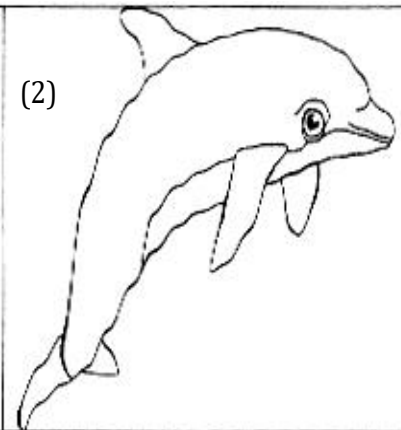
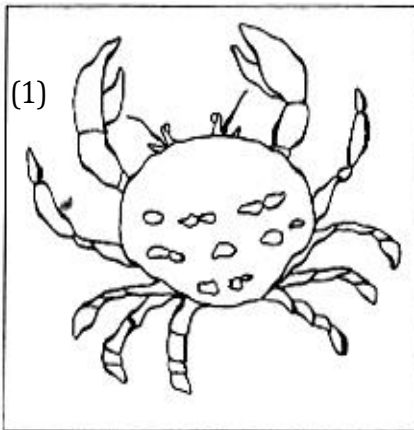
- 1) Home of _____
- 2) A Preposition
- 3) Be visible
- 11) You hear with me _____
- 5) Rub out
- 6) _____ you play cricket? Yes, I
- 13) She _____ an apple
- 9) I _____ Good-bye

THE LITTLE BULLY

I. Fill in the blanks with articles : *a, an, the*

_____ bee was drinking water on _____ bank of _____ river. It fell into _____ water. It was almost drowned. _____ dove that was watching all this, plucked _____ leaf and threw it near _____ tree. _____ bee climbed on _____ leaf and flew out. It thanked _____ dove for saving its life.

II. Name these water animals :



1) _____

2) _____

3) _____

4) _____

5) _____

6) _____

SING A SONG OF PEOPLE

Match the following :

- | | |
|------------------|------------|
| 1. A crowd of | a] islands |
| 2. A litter of | b] stars |
| 3. A fleet of | c] stairs |
| 4. A bunch of | d] ships |
| 5. A chain of | e] puppies |
| 6. A galaxies of | f] dancers |
| 7. A troupe of | g] keys |
| 8. A Flights of | h] people |



II. Write the collective noun on the line that best fits in the sentence.

family crew students swarms herds team army

1. The volleyball _____ is trying hard to win the final game.
2. The _____ of airline pilots are boarding the plane.
3. On the last day of school, the _____ have to take all their school books home.
4. Her _____ plans to go to Disneyland during the winter holiday.
5. The _____ was sent to the foreign country for peacekeeping.
6. A _____ of buffalo searched for fresh grass.
- 7) Gathering nectar ,A _____ bees buzzed .

Read the following passage and answer the questions given below:

There was a duke, named Prospero in the city of Milan in Italy. He was so fond of retirement and deep study that he left the management of the affairs of his kingdom to Antonio, his younger brother. Prospero trusted his brother. But Antonio was of a wicked nature, and when he had enjoyed the power of ruling the people for some time, he grew ambitious of becoming the ruler himself. He soon plotted with the King of Naples, the enemy of Prospero and with his help he took away the dukedom from his brother.

Answer the following:

1) Who was Prospero?

2) Who was Prospero's enemy?

3) Who was Antonio?

4) What sort of man was Antonio?

5) How did Antonio become the duke himself?

6) Write the past tense:

a) leave -

b) trust -

c) grow -

d) take -

7) Write the opposites:

a) shallow ×

b) older ×

c) village ×

d) sister ×


AROUND THE WORLD

Pick up the correct words denoting different kinds of sounds from the help box:

Rush clank tick yell jingle crash prattle bark clather howl

1) The _____ of the wind..

2) The _____ of the waves.



3) The _____ of the pail.



4) The _____ of bells.

5) The _____ of rain.



6) The _____ of a child.

7) The _____ of a clock.



8) The _____ of a dog.

9) The _____ of a fox.

10) The _____ of the spectators.

Look at the underlined **pronouns** and write the **noun** the pronoun refers to :

E.g., : John said that he is not going to listen to his mother. **John**

1. Mark took John's pencil and put it in his desk. _____

2. The children were happy that they were going for a picnic. _____

3. My friend gave me a piece of cake I ate it. _____


4. My sister likes to play with her doll. _____

5. Did Jack complete his work ? _____

6. Where were the girls going when I saw them. _____

From the given clues, find the answers: (WHO AM I ?)

- 1) Every Morning I rise,
To spread brightness.
I am round like a ball,
By evening I set to rest.




Ans: _____

- 2) We are made from grass and straw,
Our parents are birds.

We keep hanging on the tree,

That is why we are called home. Ans: _____



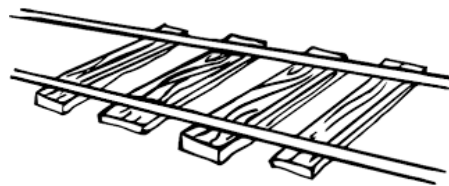
- 3) Towns without houses and roads,
Ocean without water and fish.
Mountain without snow and trees,
You are smart if you find all.

Ans: _____



- 4) I am the royal ride,
Running is my job.
Long is my tail,

But neither have I beard nor moustaches.



Ans : _____

MALU BHALU

Read the passage carefully and answer the questions given below:-:

The kangaroo is found only in Australia. There are some 50 living species distributed throughout the continent. Some are no bigger than rabbits and some can even climb trees. It is the red kangaroo that is famous as Australia's national symbol.

A full grown male kangaroo stands taller than a man. His tail is often called his 'third leg'. His huge hind legs can send him sailing over a nine-foot fence with ease. A twitch of his tail can break a man's leg like a matchstick. Female kangaroos have a pouch, which is basically a fold of skin with a single opening. A new born kangaroo is less than an inch long and is not ready for the world. So, the baby kangaroo, or joey, has to spend some time in its mother's pouch.

Answer the questions :

1. In which continent do we find kangaroos ?

Ans. _____

2. What is a joey ?

Ans. _____

3. Which kangaroo is Australia's national symbol ?

Ans. _____


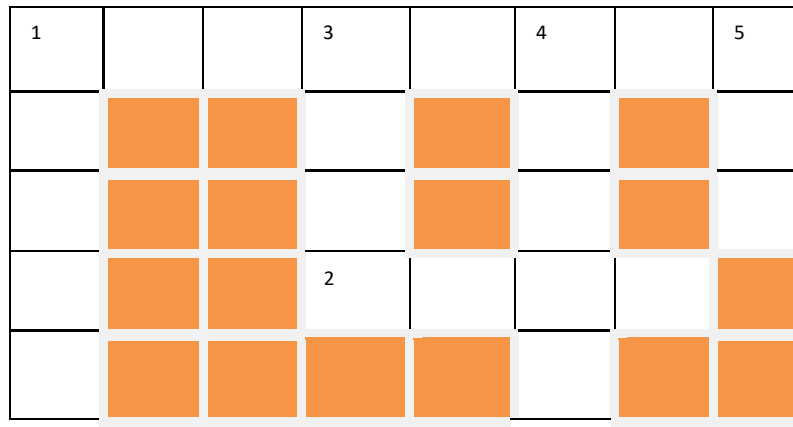
Find the meaning of these words from the dictionary :

1. twitch : _____

2. pouch : _____



3. hind : _____

CROSSWORD PUZZLE



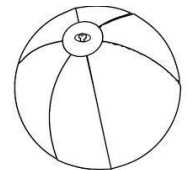
ACROSS

- 1) National animal of Australia
- 2) No one can see this



DOWN

- 1) These are big grey birds
- 3) We _____ apples and peaches in our orchard
- 4) A ball is not square. It is _____
- 5) This is a night bird. It can see clearly during night.



RIDDLE

- I live in a hole.
 I have a long tail.
 I like cheese.
 I do not like cats.



Who am I? _____

WHO WILL BE NINGTHOU?

SELECT SUITABLE WORDS FROM THOSE GIVEN IN BRACKETS AND COMPLETE THE STORY:

MIDAS - THE GREEDY KING

King Midas was greedy. That _____(mean/ means/ meant) he _____ money. One day an old man _____(tell/ tells /told) the king, "Wish for anything you _____(like/liked/liked) and I will give it to you? The king _____(replied/replys/reply) at once, 'I _____ (want/wants/wanted) everything I touch to turn into gold'. Very well, _____(says /said/say) the old man and he _____ (disappear/disappeared/disappeared).

The king _____(touch /touches/touched) a beautiful red rose and the petals _____ (turn/turned/turns) into shining gold. He was excited. He _____(touch/touched/touches) many things and they all _____(turn/turned/turns) into gold. Suddenly her daughter _____(appear/appeared/appears) from nowhere and _____(hug/hugged/hugs) him. She also _____ (turn/turned/turns) into a golden statue. The king was shocked.

FILL IN THE BLANKS:

Action word in present form

Action form in past form

Admit

Stop

shocked

proved

Enter

Carry

laid

Flap

Meet

rode

Make a ladder of Action Words beginning with 'T'. The ladder begins with three letters and goes up to ten letters. You may use any form of the Action Word.

Connect each action word from the Present Tense [today] to each word from the Past Tense [before today]. Shade them with the same colour.

think

prove

admitted

Reply

replied

proved

admit


TOPIC: 1. SUPER SENSES

Match the following

Given below is the sleeping time of some animals. Shade the portion in the 24 hour clock given.

(a) Dog 6 hours

(b) Buffalo 4 hours



(c) Child 8 hours

(d) Snake 18 hours

TOPIC: 2. A SNAKE CHARMER'S STORY

Given below are pictures of some animals. In the space provided, mark a tick (✓) if that animal is used for entertainment and a cross (X) if it is not.


(a)



(b)



(c)



(d)



(e)



(f)



TOPIC: 3. FROM TESTING TO DIGESTING

I. Name any 2 food items with the following tastes

1. sweet

2. salty

3. sour

4. bitter

5. spicy

II. Describe the tastes of these food items

1. Mango chutney



2 Amla



3. Maggi



4. icecream




5. Roasted chana



TOPIC : 3. FROM TESTING TO DIGESTING



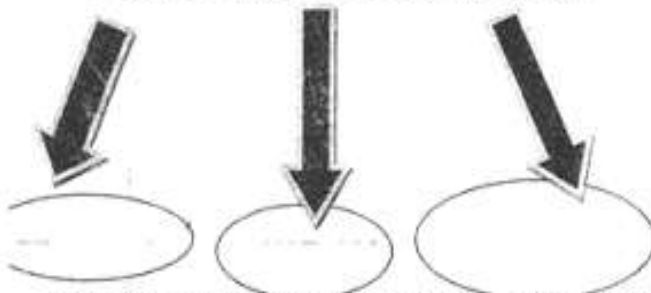
1) How do these following food items taste?



Cake _____ tamarind _____ pappad _____

2) Unscramble the letters to get the names of three things needed to taste the food.

FOR TASTING THE FOOD WE NEED

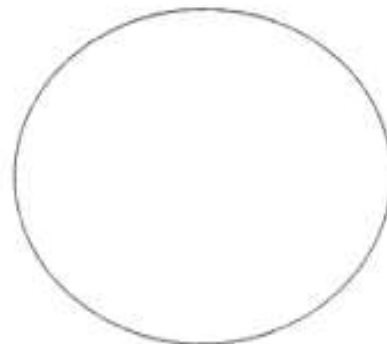


Tnogeu
Neos
slivaa



3) Given below are the names of food items. Select and fill in the plate with food items which would make a balanced diet.

Dal, rice, noodles
roti, sabzi, chips, burger, pizza.
salad, milk, fruits



4) What would happen if you take junk food?

TOPIC : 4. MANGOES ROUND THE YEAR

1) How are the following preserved in your house?

Fruits

vegetables

milk

.....



2) The following are the steps involved in the making of mamidi tandra. Arrange them properly.

Arrange them properly.

- 1) Spread the pulp into a thin layer over the mat.
- 2) Take the most ripe mangoes.
- 3) Take out the pulp into average pot.
- 4) Add sugar or jaggery in equal amounts to the pulp and mix well.
- 5) Thin layer is allowed to dry in the sun.
- 6) Add layer after layer till it becomes 4cm thick.

3) Select the suitable ways of preserving the following food items.

Milk

Lemon

Pickling, Salting, drying,

Tomatoes

Boiling, Cleanning

Potatoes

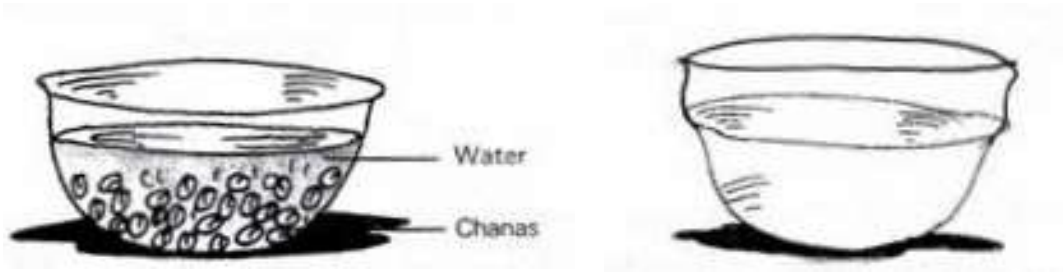
Pine apple

TOPIC : 5. SEEDS AND SEEDS

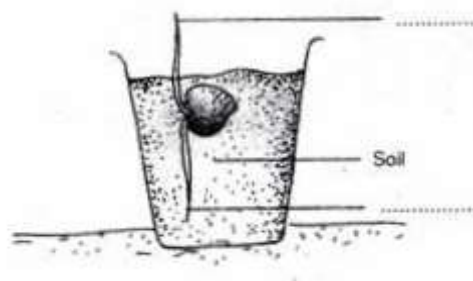
Given on the left is the picture of some chanas soaked in water in a bowl. On the right is an empty bowl. Draw how the bowl would look like after the chanas have been left to soak for 7-8 hours.

BEFORE

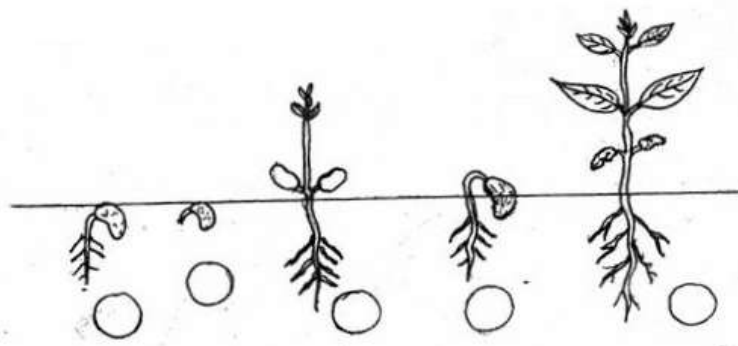
AFTER



Given below is a picture of a sprouted chana. One of the thread like structure coming out of the chana develops into root while the other develops into shoot (stem). Write in the spaces provided the name of the parts.



Seeds grow into a new plant. Arrange them into proper sequence by numbering.



TOPIC :5. SEEDS AND SEEDS

Fill in the blanks:

1. and..... are agents of dispersal of seeds.
2. seeds germinate quickly.
3. Coconut can be dispersed by
4. Drumstick seeds can be dispersed by
5. The outer layer of seed is called

Match the following:

Column A

1. Vegetable with seeds
2. Cotton seeds
3. Peas and beans
4. Fruit with big seed
5. Insects get trapped

Column B

- Dispersed by explosion
- Pitcher plant
- Mango
- Lady's finger
- Weightless seeds

Answer the following:

1. Write some fruits which has one seed.

.....
.....

2. Write some fruits which has many seeds

.....
.....

3. Write notes on sprouting.

.....
.....
.....

TOPIC: 6. EVERY DROP COUNTS

Name the source of water looking at the Pictures



TOPIC : 6. EVERY DROP COUNTS

Separate the following into substances which can be dissolved in water and which cannot be. blood, ink, curd, ghee wax, wheat flour, sugar, salt, chalk powder, milk

Soluble in water	Insoluble in water
.....

Discovery of facts:

Lemon float in salty water because

.....
.....
.....
.....
.....



ZONAL INSTITUTE OF EDUCATION & TRAINING, CHANDIGARH

Class: V

Sub: EVS

TOPIC: 6. EVERY DROP COUNTS

Fill in the blanks:

1. In our Country state gets very less rainfall.
2. We collect rainwater through method.
3. is the festival celebrated in Tamilnadu related to water.
4. is the main source of water.
5. plays an important role in agriculture.

Match the following:

Column A

1. Rainwater harvesting
2. Johadas
3. Industries and factories
4. Tube well
5. Blue Planet

Column B

- Earth
- Depletion of water table
- Replenishing water table
- Place made for collection of water in Rajasthan
- Pollute the water

Answer the following:

1. What is water cycle?

.....
.....

2. Name few methods to reuse the waste water.

.....
.....

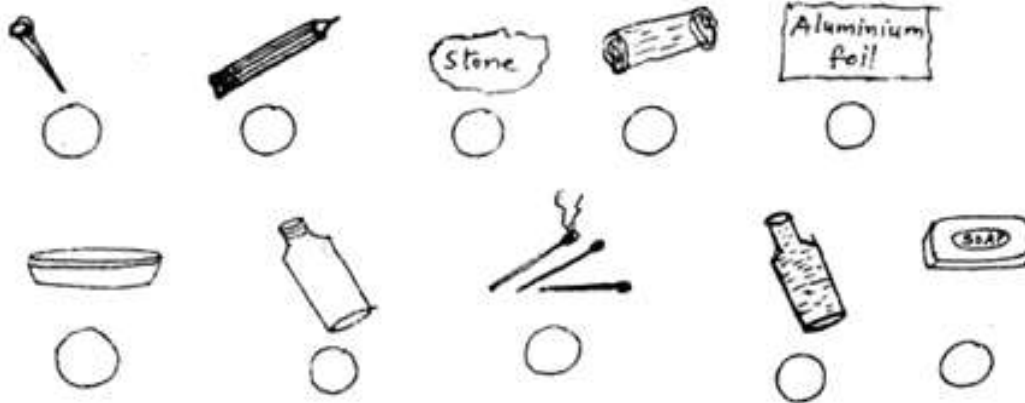
3. How will you conserve water?

.....
.....
.....

TOPIC :7. EXPERIMENTS WITH WATER:

Identification

Write (S) if it sinks in water or (F) if it floats



Mark (✓) for the things that float and (X) for the things that sink.

1.	(a) Empty mug (b) Mug half filled with water (c) Mug full of water		
2.	Wooden pencil		
3.	Metallic Pen		
4.	Eraser		
5.	Iron pin put on a leaf		

ZONAL INSTITUTE OF EDUCATION & TRAINING, CHANDIGARH

Class: V

Sub: EVS

TOPIC :7. EXPERIMENTS WITH WATER:

1. Choose the Correct Answer:

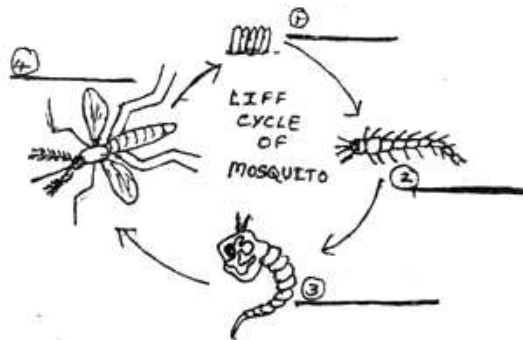
- A. A puffed puri (floats / sinks) in water.
- B. An Aluminum foilwhen it is spread out. When pressed tightly into a ball it
- C. Things dissolved..... (faster / slower) on heating.
- D. The saltiest sea on earth is the sea.
- E. Life jackets are used by people in order to (Swim/float) in water.

2. Classify the following as things which float in water and things which sink in water.

Item	Things which float	Things which sink
Iron nail		
Match Stick		
Empty, Closed Plastic Bottle		
A bottle filled with water		
Soap Cake		
A Piece of wood		
A piece of ice		
Stone		
Pencil		
Steel Plate		
Needle		

TOPIC :8. A TREAT FOR MOSQUITOES

Complete the stages of the life cycle of a mosquito.




Where will you look for mosquitoes' eggs in water? Tick (✓) the correct answer.


- (a) At the bottom of the water.
- (b) In the middle layer of water
- (c) At the top floating on it
- (d) Everywhere in water

Given below are some food items which contain iron. Tick (✓) the ones you would like to have.


(a)



Spinach




Jaggery




Pear

(b)



Amla

(c)



Apple

TOPIC :9. UP YOU GO!

Name 10 items to be carried by the mountaineer in his bag:



- 1.
- 2.
- 3.
- 4.
- 5.
- 6.
- 7.
- 8.
- 9.
- 10.

Given below are some adventures sports. Name them:

1.



2.



3.



TOPIC :9. UP YOU GO!

I. Locate the following in the map given below :

- | | | |
|--------------|---------------|------------------|
| a) Assam | b) Manipur | c) Mizoram |
| e) Nagaland | f) Uttarkhand | g) Mount Everest |
| i) New Delhi | j) Uttarkashi | |



TOPIC :10. WALLS TELL STORIES

Name the Pictures:



.....



.....



.....



.....



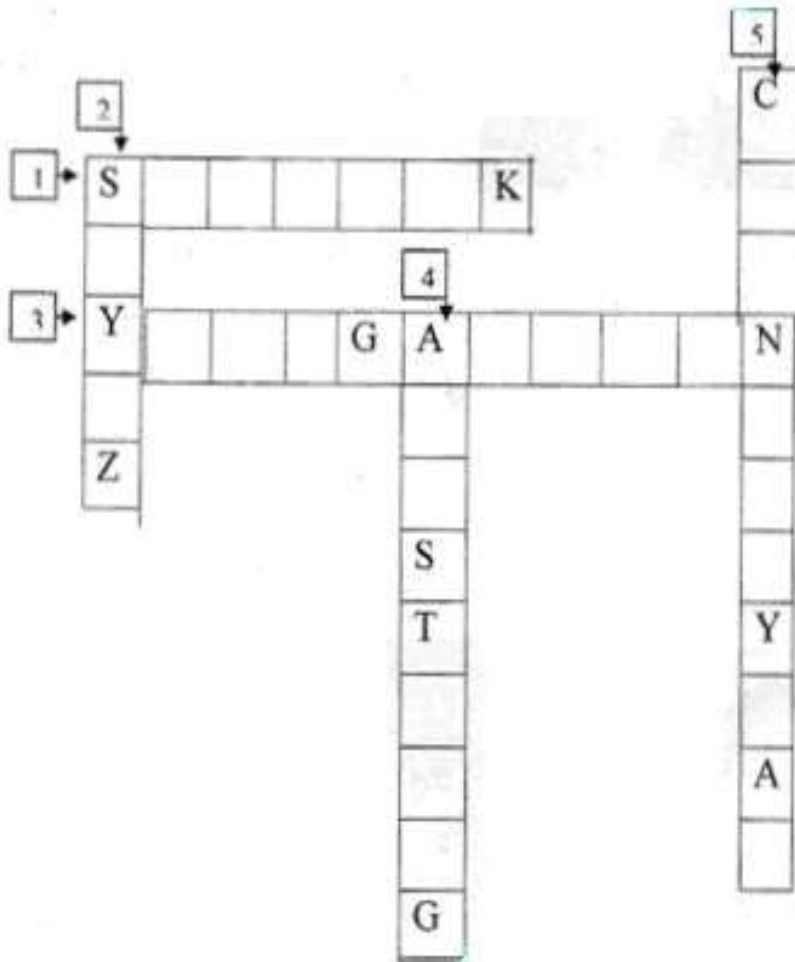
.....

Riddle Time!

- | | |
|--|-------------------|
| 1. A Subject in which we study about past. | H R ... |
| 2. A part of wall coming out in round shape
It is built to ensure security. | B T |
| 3. A group of soldiers | A |
| 4. A single of this can cause a lot of destruction | B |
| 5. A place where old items are displayed | M M |

TOPIC: 11. SUNITA IN SPACE

Fill letters in the empty boxes and solve the following crossword puzzle:



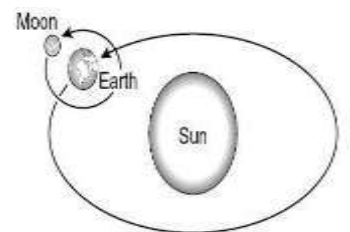
- CLUES:**
1. World's first unmanned spacecraft.
 2. The Russian space craft in which Rakesh Sharma travelled
 3. First Astronaut to travel in space
 4. First American to walk on moon
 5. First Indian satellite to map moon

Earth looks the same from the moon as the moon looks from the earth. Why?

.....

.....

.....



TOPIC: 11. SUNITA IN SPACE

I. Write the suitable answers.

- a. Blue part in the Globe shows
- b. Green part in the Globe shows
- c. Brown part in the Globe shows
- d. Yellow part in the Globe shows

II. Locate the following countries in the World map.

- 1. America 2. Africa 3. Brazil 4. Argentina 5. USSR 6. Australia




TOPIC: 12. WHAT IF IT FINISHES.?

1) TICK THE VEHICLES THAT GIVES OFF SMOKE



2) TICK THE VEHICLES THAT DOES NOT GIVE OFF SMOKE.



3) TICK THE NON-RENEWABLE SOURCES OF ENERGY.

A) COAL B) BIO MASS C) TIDAL POWER D) MINERALS

4) TICK THE RENEWABLE SOURCES OF ENERGY

A) HYDEL POWLR

B) NATURAL GAS

C) NUCLEAR POWER

D) PETROLEUM

5) MATCH THE FOLLOWING

a) Coal

heat of the earth

b) Bio mass

coal mines

c) Geothermal energy

wood

ZONAL INSTITUTE OF EDUCATION & TRAINING, CHANDIGARH

Class: V

Sub: EVS

TOPIC: 13. A SHELTER SO HIGH!

Identification

I) Identify ten items needed for a trip.

A	S	T	E	N	T	H	I	L	P	O
F	O	O	D	G	J	K	L	U	Y	R
A	D	R	R	B	L	A	N	K	E	T
S	E	C	Y	U	S	O	A	P	K	J
Q	W	H	D	F	T	Y	H	E	M	E
W	R	T	Y	U	I	O	W	D	Q	W
N	A	P	K	I	N	L	A	F	G	Y
A	S	D	F	C	L	O	T	H	E	S
V	B	N	M	J	Y	D	E	F	G	J
A	T	O	O	T	H	B	R	U	S	H
M	E	D	I	C	I	N	E	S	J	S

II. Which states would you pass through while traveling from Mumbai to Kashmir. Show on the Map.



Name the States:

TOPIC: 13. A SHELTER SO HIGH!

1. Fill in the blanks:

- a. Gaurav Jani went to Delhi from Mumbai by
- b. In Jammu houses were made of
- c. The tents of Changpa tribes are called
- d. The Changpa tribes always move with their and
- e. is the name of the place where Changpas keep their sheep and goats in their tent.
- f. Kashmir people live in a special type of house which float in water and is known as

2. Write short notes on Pashmina shawls and people living in high mountains.

.....

.....

.....

.....

.....

.....

.....

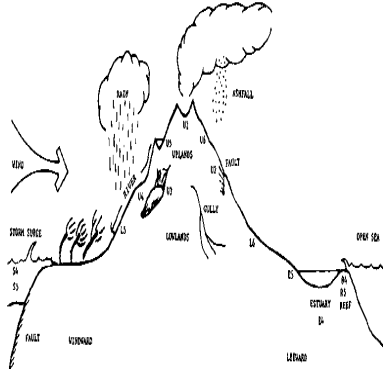
.....

.....

.....

TOPIC: 14. WHEN THE EARTH SHOOK!

Observation – Name these natural Calamities



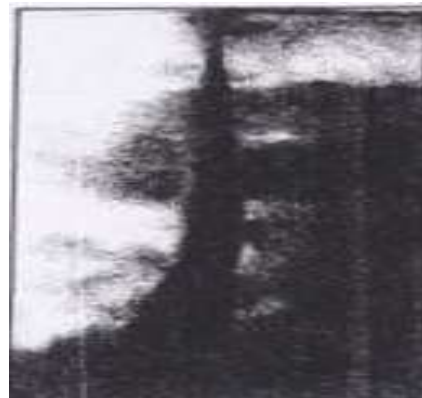
1.

2.



3.

4.




5.

6.

TOPIC: 15. Blow Hot. Blow Cold.

II. Make whistles of the things given below and number from loudest to the softest.



IV. Name this instrument. Who uses this and why?



.....

.....

.....

.....

Identification

V. Find ten musical instruments from the grid.

W	R	Y	O	S	H	E	H	N	A	I	L
B	D	F	S	A	X	A	P	H	O	N	E
U	J	V	I	O	P	L	T	Z	G	H	D
G	U	I	T	A	R	I	A	J	H	F	C
L	Y	O	U	H	K	M	B	E	E	N	A
E	F	L	U	T	E	K	L	T	W	H	S
H	J	I	B	Q	N	S	A	T	H	K	I
N	I	N	O	L	S	I	T	A	R	G	O
R	Y	I	D	H	O	L	M	K	O	P	S

TOPIC: 16. WHO WILL DO THIS WORK

Identification the things used to keep your house clean.



Given below are pictures of some jobs performed by various people in our society. Tick (✓) those you would like take up and cross (X) those you do not.



ZONAL INSTITUTE OF EDUCATION & TRAINING, CHANDIGARH

Class: V

Sub: EVS

TOPIC: 17. ACROSS THE WALL

Look at the grid and identify the team games

T	E	N	N	I	S	P	O	R	C
B	A	S	K	E	T	B	A	L	L
K	C	K	A	B	B	A	D	I	P
H	R	R	H	O	C	K	E	Y	O
O	I	U	C	H	E	S	S	U	L
K	C	G	R	E	L	A	Y	G	O
H	K	B	S	H	O	O	T	I	N
O	E	Y	H	K	Y	U	J	L	P
V	T	L	L	E	Y	B	A	L	L
T	H	R	O	W	B	A	L	L	M
V	O	L	L	E	Y	B	A	L	L

II. Find the national games of the following countries

India _____ Australia _____

America _____ England _____

III. Give examples for the following:

a. 2 out door games _____

b. 2 individual sports _____

c. 2 cricketers _____

d. 2 indoor games _____

IV. Fill in the blank:

1. Last Olympic games was held In the year at

2. The next Olympic games will be held in the year at

3. In 2004, Olympic games was held in

4. Vijendra singh won medal in Beijing Olympics.

TOPIC: 17. ACROSS THE WALL

1. Name some individual sports.

.....

2. Name some indoor games.

.....

3. Name some outdoor games.

.....

4. Name any three sports played as a team.

.....

5. Find out the national games of :

a) India

b) America

c) Australia

d) England

6. Name some Indian women players and also mention the sport in which they are famous.

.....

7. Write a few lines about basketball.

.....

.....

.....

.....

TOPIC :18. NO PLACE FOR US?

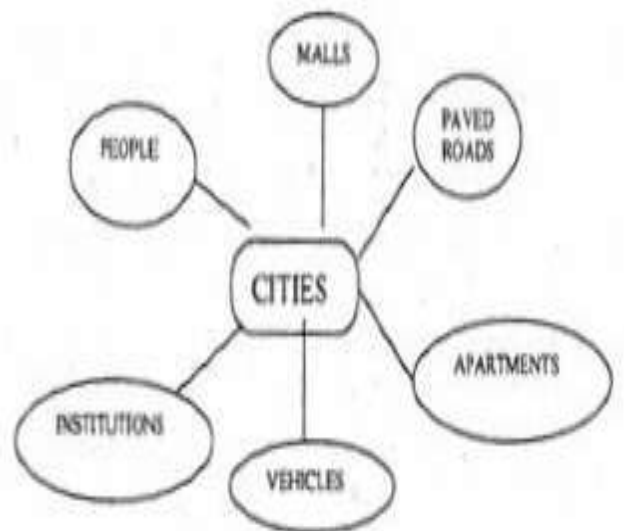


Compare the two and write the Positive aspects in the blanks:

1.
2.
3.
4.
5.
6.

Compare the two and write the negative aspects in them:

1.
2.
3.
4.
5.
6.



Tick any one and write a reason I like cities / villages because

.....

.....

TOPIC :18. NO PLACE FOR US?

1. Fill in the blanks:

- a. Jatrya's family came to Mumbai from village.
- b. Jatrya was born in village.
- c. Many people in Jatrya's village didn't agree to move away from their and village.
- d. In Khedi people knew to treat the patients with made from
- e. The smoke and the smell of burning tyre were
- f. Empty bottles and news papers were sold to the

2. Answer the following:

- a) Write the name of any five dams in our country.

.....
.....

- b) Write the advantages and disadvantages in building a new dam.

.....
.....
.....
.....
.....

TOPIC: 19. A SEED TELLS A FARMER'S STORY'

1. Draw the journey of wheat from the field to the plate and explain it with your own words:

.....

.....

.....

.....

.....

.....

.....

.....

.....

.....

2. THINK AND WRITE:

What would happen if all the farmers were to use only one kind of seed and grow only one kind of crop?

.....

.....

.....

.....

.....

.....

.....

.....


.....

.....

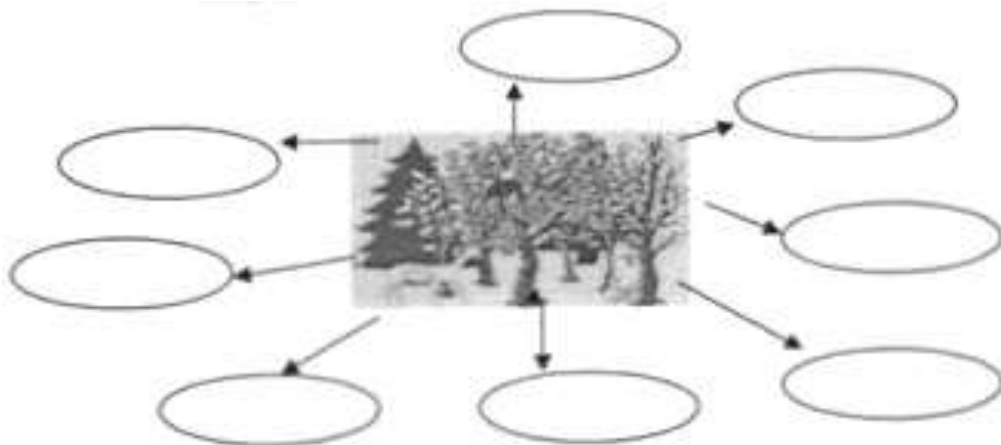
TOPIC :20. WHOSE FORESTS?

Observation

1. Observe the pictures and write how they are linked to the forests



2) Write the forest products



ZONAL INSTITUTE OF EDUCATION & TRAINING, CHANDIGARH

Class: V

Sub: EVS

TOPIC :21. LIKE FATHER, LIKE DAUGHTER

I) MATCH THE FOLLOWING.

- A) DIPHTHERIA CHICKEN POX
- B) AT BIRTH INFLUENZA VACCINE
- C) 9 MONTHS BCG, POLIO, HEPATITIS B

II) MATCH THE FOLLOWING

- A) NEPHEW SON OF ONE’S BROTHER OR SISTER
- B) NANI MOTHER’S MOTHER
- C) CJ-IACHI FATHER’S BROTHER’S WIFE
- D) MAUSI DAUGHTER OF A PERSON’S BROTHER OR SISTER
- E) NIECE MOTHER’S SISTER

Fill in the table:

Your special habit or trait	Whom is it similar to?

ZONAL INSTITUTE OF EDUCATION & TRAINING, CHANDIGARH

Class: V

Sub: EVS

TOPIC :22. ON THE MOVE AGAIN.

I) OBSERVATION: -

A) FILL IN THE BLANK:

(Sugarcane, huts, rain, school, study, Mukadam)

1. The _____ gives money as loan to the villagers.
2. When there is no _____ there is no work on the field.
3. Mukadam is the agent for _____ factories.
4. The carvan of these families stay in _____ made of dry sugarcane.
5. When the carvan of families move1 the children do not go to _____ for 6 months.
6. If children _____ they can become somebody in life and have better future.

II) Answer the following:


1. Give some reasons for which people need to borrow money.

A) _____

TOPIC :22. ON THE MOVE AGAIN.


III. Suppose your family has to leave its home town and migrate to some other town. What difficulties do you think your parents will have to face?

What changes will come in your life?



TOPIC :22. ON THE MOVE AGAIN.

I. Identify the following:



.....



.....



.....



.....



.....



.....

कक्षा 5 हिन्दी

कक्षा - 5 पाठ -राख की रस्सी (श्रवण) तारीख : _____

राख की रस्सी पाठ की कहानी सुनाए जाने के बाद छात्र निम्नलिखित प्रश्नों के उत्तर देते हैं ।

१.राजा का नाम क्या था?

२.मंत्री का नाम क्या था?


३.मंत्री किस बात से परेशान था ?

४.मंत्री ने बेटे को कहाँ भेजा ?

५. मंत्री ने बेटे से क्या करने को कहा?

भेड़ का चित्र बनाओ:

उनके सींग से क्या- क्या बनता है ?



कक्षा 5 हिन्दी

कक्षा - ५

पाठ - पठित गद्यांश

तारीख : _____

निम्न गद्यांश को ध्यानपूर्वक पढ़िए और दिए गए प्रश्नों के उत्तर लिखिए

तिब्बत को दुनिया की छत कहा जाता है क्योंकि यह बहुत ऊँचे पठार पर स्थित है। पठार ज़मीन के ऐसे भागको कहते हैं जो मैदान से ऊँचा हो और पहाड़ से नीचा होता है। ... तिब्बत की हवा में नमी बहुत कम है। यहाँ लगभग १५०० झीलें हैं। ये झीलें बनती हैं --- पहाड़ों की बर्फ पिघलने से। इनमें मानसरोवर झील का बहुत प्रसिद्ध है। यहीं से सांगपो यानी ब्रह्मपुत्र नदी निकलती है

प्रश्न-१ तिब्बत किस नाम से मशहूर है ? उत्तर- _____

प्रश्न-२ पठार किसे कहते हैं ?

उत्तर _____

प्रश्न-३ ब्रह्मपुत्र नदी का दूसरा नाम क्या है ? उत्तर _____

प्रश्न-४ गद्यांशमें किस प्रसिद्ध झील का नाम आया है ?

उत्तर _____

प्रश्न-५ समानार्थक शब्द लिखिए ?

उत्तर- दुनिया-_____

प्रश्न-६. निम्नलिखित शब्दों उनके सही वर्गों में रखो ?

लेह, चंडीगढ़, शहर, धातु, दीपक, पक्षी |

उत्तर

जातिवाचक

व्यक्तिवाचक

कक्षा 5 हिन्दी

कक्षा - पांचवी पाठ : फसलों का त्योहार " तारीख : _____

मानचित्र में राज्योंके नाम लिखो और त्योहार का नाम लिखो:



कक्षा 5 हिन्दी

कक्षा - पांचवी

पाठ : संज्ञा

तारीख : _____

नीचे दी गई जातिवाचक संज्ञाओं के लिए व्यक्तिवाचक संज्ञा लिखो:

जानवर					
अनाज					
पोशाक					
भोजन					
फूल					
रंग					
दिन					
नदी					
शहर					
धातु					

निम्नलिखित तालिका मे से 10 त्योहारों के नाम ढूंढकर लिखो:

स	र	हु	ल	पी	बो	ग	दु
रे	फ	लो	गो	व	ज	ने	र्गा
द्व	ए	ह	हो	ली	र	श	पू
खि	च	ड़ी	से	वा	क्षा	च	जा
क्ष	बै	र	द	दि	बं	तु	ल
आ	सा	म	ह	क	ध	र्थी	प
ज	खी	ज़ा	उ	ओ	न	म	क
ज़	ई	न	य	प्र	ग्र	मृ	की

कक्षा 5 हिन्दी

कक्षा - ५

अपठित गद्यांश

तारीख : _____

निम्न गद्यांश को ध्यानपूर्वक पढ़िए और दिए गए प्रश्नों के उत्तर लिखिए

पुरुवंश में एक बड़ा प्रतापी राजा हुआ - दुष्यंत। बुद्धि , वीरता , पराक्रम , रूप शील में कोई उसके समान न था। देवता भी उसका आदर करते थे। इंद्र तो उसे अपना मित्र मानता था। असुरों के साथ युद्ध में उसने इंद्र की सहायता की थी।

प्रश्न:१ पुरुवंश के प्रतापी राजा का क्या नाम था ?

उत्तर -----

प्रश्न:२ दुष्यंत में क्या-क्या गुण थे ?

उत्तर -----

प्रश्न:३ दुष्यंत किसका मित्र था ?

उत्तर -----

प्रश्न:४ राजा दुष्यंत ने इंद्र की सहायता कब की थी ?

उत्तर -----



प्रश्न:५ गद्यांश में से एक विशेषता बताने वाला शब्द चुनकर लिखिए ?

उत्तर -----

प्रश्न:६ संयुक्ताक्षरवाले चार शब्द लिखो

उत्तर -----

प्रश्न:७ राजा और असुर का चित्र बनाओ:



कक्षा 5 हिन्दी

कक्षा - ५

पाठ - खिलौनेवाला

तारीख : _____

निम्न लिखित शब्द जाल में से 10 मददगारों के नाम छाँटो और उनके बारे में एक वाक्य लिखो:

रे	अ	ध्या	प	क	ओ	प	ए	क़	र
कु	स	का	ते	थी	ये	ब	ढ	ई	ख़क
म्हा	ग	री	चि	कि	त्स	क	द	फ	ग
र	ह	ग	ज़	प	न	वा	डी	स	ह
फ	ज	र	गो	डी	आ	अ	क़	व	ल
डे	ग	को	ली	फी	दे	उ	मि	मे	वा
रा	ज	ह	ला	वा	ध	दू	स्त्री	ज	ई

- 1
- 2
- 3
- 4
- 5
- 6
- 7
- 8
- 9
- 10

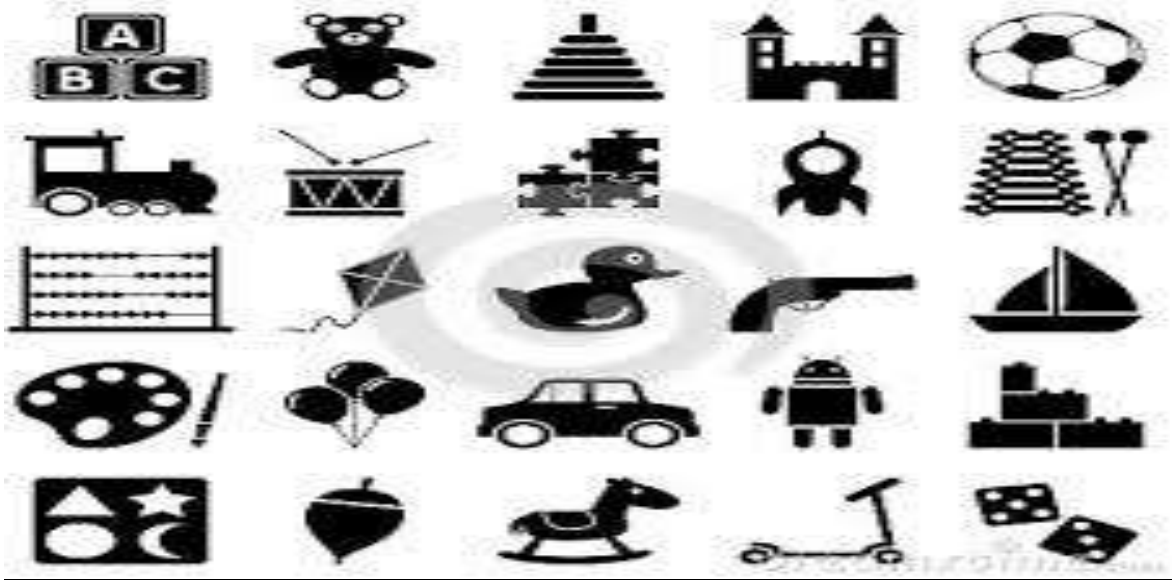
कक्षा 5 हिन्दी

कक्षा - ५

पाठ - खिलौनेवाला

तारीख : _____

इन खिलौनोंके नाम लिखो :



-----	-----	-----
-----	-----	-----
-----	-----	-----
-----	-----	-----
-----	-----	-----
-----	-----	-----

प्रश्न: निम्न संज्ञा शब्दों के लिए उचित विशेषण लिखिए ?

उत्तर ----- तोता ----- रेल ----- तलवार ----- मोटरगाड़ी

प्रश्न: वचन बदलो

उत्तर: गुड़िया----- राजा -----

खिलौना ----- साड़ी -----

कक्षा 5 हिन्दी

कक्षा - ५

पाठ - नन्हा फनकार


तारीख : _____

प्र १..कई बार हम जानवरों कि विशेषताओं के साथ मनुष्य के गुणों या विशेषताओं कि तुलना करते हैं जैसे हिरन जैसी चाल , अब नीचे दिए जानवरों के आगे उनकी विशेषताएं लिखो |

१) बिल्ली जैसी _____ कोयल जैसी _____

२) लोमड़ी जैसी _____ बंदर जैसा _____

सृजनात्मक लेखन _ "आगरा" के बारे में अप्प क्या जानते हो? तीन वाक्यों में लिखो |-



कक्षा 5 हिन्दी

कक्षा - पांचवी

पाठ : नन्हा फनकार

तारीख : _____


१. औजारों के नाम लिखो:















ClipartOf.com/1054553

कुछ अन्य औजारों के चित्र बनाओ:

Blank rounded rectangular box for drawing a tool.

Blank rounded rectangular box for drawing a tool.

Blank rounded rectangular box for drawing a tool.

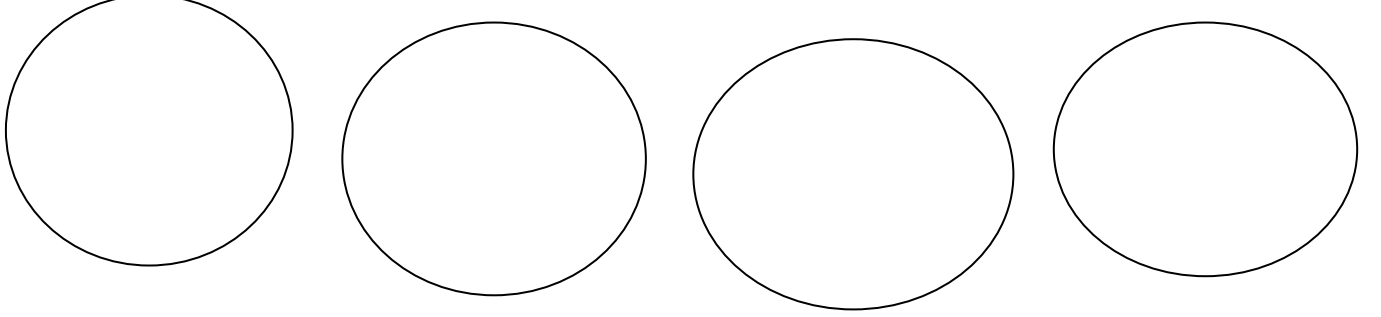
कक्षा 5 हिन्दी

कक्षा - पांचवी


पाठ : इला की कशीदाकारी

तारीख : _____

कढ़ाई के भिन्न प्रकार के टांकों के चित्र बनाओ:



मनपसंद डिज़ाइन बनाओ और रंग भरो:



कक्षा 5 हिन्दी

कक्षा - ५

पाठ - चिट्ठी का सफ़र

तारीख : _____



ऊपर दिये हुए संचार साधनों के नाम लिखो :

ज	कु	लो	क	ही	टे
पि	दे	बो	बू	व	ओ
द्रे	प्रे	द्य	त	न्म	प
स	मा	चा	र	प	त्र
र	मो	बा	ई	ल	ल्ल
कं	प्यू	ट	र	प्प	यी
टे	लि	फ़ो	न	क्र	से

प्र.२ नीचे लिखे समान उच्चारण वाले शब्दों के भिन्न अर्थ लिखिए और इनका वाक्यों में प्रयोग करते हुए अंतर स्पष्ट करिए -

पर -----


पर -----

कक्षा 5 हिन्दी

कक्षा - ५

पाठ - डाकिए की कहानी


तारीख : _____



प्रश्न: १ डाकिया क्या - क्या कम करता है ? चार या पांच वाक्यों में लिखो

उत्तर -----

डाक पेटी का चित्र बनाओ और लिखो :



कक्षा 5 हिन्दी

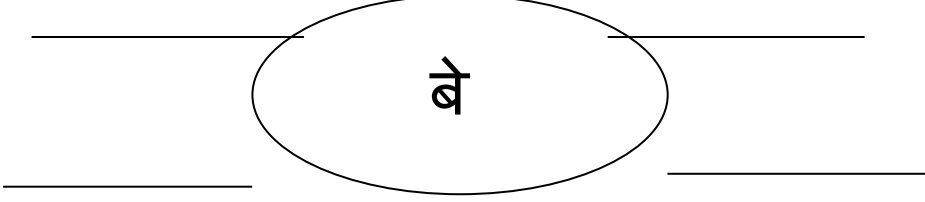
कक्षा - ५

पाठ -एक माँ की बेबसी

तारीख : _____

प्रश्न :१ मुहावरे का अर्थ लिखो ? उत्तर: आँख का तारा-----

प्रश्न:२ बे, उपसर्ग का प्रयोग करते हुए शब्द बनाओ ?



प्रश्न: कविता पढ़कर आपने रतन के बारे में क्या जाना चार या पाँच वाक्यों में लिखो ।

उत्तर:-----

मेरी माँ -चित्र चिपकाओ और पाँच वाक्य लिखो:

कक्षा 5 हिन्दी

कक्षा - पांचवी पाठ : वे दिन भी क्या दिन थे तारीख : _____

१. छुट्टियों में तुम नानी के घर जाकर क्या-क्या करोगे लिखो.



२. इन चीजों के दाम लिखो:

वस्तु का नाम	दस साल पहले	आज का दाम	दस साल बाद
एक किलो चीनी			
आधा लिटर दूध			
एक अंडा			
२०० पेज की कापी			
एक किलो आलू			
एक कप चाय			

कक्षा 5 हिन्दी

कक्षा -५ पाठ -एक दिन की बादशाहत तारीख:_____

सलीम की आंख खुली तो आपा नाश्ते की मेज़ सजाए, उन दोनों की उठने का इंतजार कर रही थी | अम्मी खानसामा को हुक्म दे रही थी कि हर खाने के साथ एक मीठी चीज़ ज़रूर पकाया करो | अन्दर आरिफ के गाने के साथ भाई जान मेज़ का तबला बजा रहे थे और अब्बा सलीम से कह रहे थे “स्कूल जाते वक्त एक चवन्नी जेब में डाल लिया करो |”

गद्यांश पढ़कर प्रश्नों के उत्तर लिखो :

1. अम्मी किसे हुक्म दे रही थी ?

उ.-----

2. भाईजान क्या बजा रहे थे ?

उ.-----

3. नाश्ते की मेज़ सजाये दोनों के उठने का कौन इंतजार कर रहा था ?

उ.-----

4. उलटे अर्थ वाला शब्द लिखो : बाहर - _____

5. वचन बदलो : आंखे - _____

वर्तनी

6. शुद्ध करके लिखो : अबा _____ अरीफ _____

मुसिबत _____ कानसामा _____

कक्षा 5 हिन्दी

कक्षा - पांचवी पाठ: चावल की रोटियाँ तारीख : _____

निम्न गद्यांश पढ़कर दिए प्रश्नों के उत्तर लिखो :-

यह कहानी कोको नाम के लड़के की है | जिसके तीन दोस्त हैं -
नीनी, तिन्सू, मिमि | कोको सुबह के समय सोकर उठता है | तब तक उसके
माता-पिता खेतों में चले गए थे | वह उठकर नाश्ता ढूँढने लगता है | तभी उसे
अलमारी में चावल की चार रोटियाँ मिल जाती हैं |

प्र.१ अलमारी में कैसी रोटियाँ होती हैं ?

उ.-----

प्र.२ कोको के कितने दोस्त होते हैं ? नाम लिखो ?

उ.-----

प्र.३ खेतों में कौन गए थे ?


उ.-----

४. अनुच्छेद में से एक अनाज का नाम लिखो |

उ.-----

५. तुम्हारा मनपसंद भोजन क्या है ? चित्र बनाओ :

वह कैसे बनाया जाता है ?

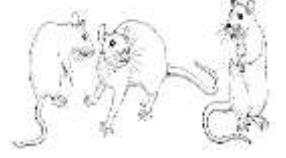


कक्षा 5 हिन्दी

कक्षा - ५ पाठ - चावल की रोटियाँ तारीख : _____

1. वाक्य में प्रयोग करो:

पेट में चूहे दौड़ना - _____



पापड़ बेलना - _____

2. बहुवचन बनाओ -

अलमारी - _____

3. अर्थ लिखो : कोशिश - _____

4. सही शब्द बनाओ - द वा र जा - _____

5. सही वर्ण लगाओ: रो _याँ

6. सही शब्द बनाओ - फू दा न ल-----

7 सही शब्द पर गोला लगाओ: नाशता / नाशता

8. शब्द बनाओ: गुड़ + गुड़ = _____

9. नीचे लिखे शब्दों को पढ़ो और दिए गए वाक्यों में ये शब्द भरो:

(पटापट ,फटाफट, चकाचक, खटाखट, झकाझक ,चटपट , चटाचट)

1. आंधी के कारण पेड़ से _____ फल गिर रहे थे ।

2. आज रहमान ने _____ सफ़ेद कुरता पजामा पहना था ।

3. हंसा अपना सारा काम _____ कर लेती हैं ।

4. उस भुक्खड़ ने _____ सारे लड्डू खा डाले ।

5. सारे बर्तन धुलकर _____ हो गए ।

6. राजू काम निपटाकर _____ चला गया।

कक्षा 5 हिन्दी

कक्षा - पांचवी पाठ - गुरु और चेला तारीख : _____

गुरु एक थे और था एक चेला, चले घूमने पास में न था धेला ।

चले, चलते-चलते मिली एक नगरी,

चमाचम थी सड़के, चमाचम थी डगरी

मिली एक ग्वालिन, धरे शीश गगरी,

गुरु ने कहा तेज ग्वालिन न भगरी ,

बता कौन नगरी बता कौन राजा,

कि जिसके सुयश का यहाँ बजता बाजा ।

उपर्युक्त पंक्तियाँ पढ़कर प्रश्नों के उत्तर लिखो :

1. चलते-चलते उन्हें क्या मिली ?

उ.-----

2. उस नगरी की सड़के और डगरी कैसी थी ?

उ.-----

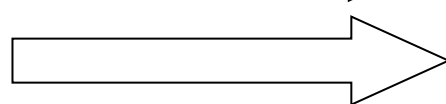





3. ग्वालिन ने शीश पर क्या धरा हुआ था ?

उ.-----

4. इस कविता के कवि का नाम बताओ ?

उ.-----

5. समान तुकबंदी वाले शब्द छाँटकर लिखो:



कक्षा 5 हिन्दी

कक्षा - ५ पाठ -स्वामी की दादी तारीख : _____

(लेखन)

प्र.1 जब तुम प्रधानाध्यापिका के कमरे में जाते हो तो कैसा महसूस करते हो ?

उ.-----

प्र.2 दादी स्वामी की बुआ को महामूर्ख क्यों कहती थी ?

उ.-----

प्र.3 सिक्के कौन-कौन सी धातु के बनते हैं ।

उ.-----



(रचनात्मक लेखन)

स्वामीनाथन का अपनी दादी के साथ कैसा रिश्ता था ? तीन या चार वाक्यों में लिखो ।

कक्षा 5 हिन्दी

कक्षा - ५ पाठ -बाघ आया उस रात तारीख : _____

तेंदुए और बाघ में क्या अंतर है ? चित्र बनाओ और लिखो:



जानवरों को पहचानो:

--	--

काली धारियों वाला

सूंड वाला

--	--

--	--

ऊन देने वाला

छोटी पूंछ वाला

--	--	--

--	--	--	--

शहद बनानेवाला एक सींग वाला

--	--

कक्षा 5 हिन्दी

कक्षा - ५


पाठ -सृजनात्मक लेखन

तारीख : _____

नीचे दिये हुये चित्र को ध्यान से देखो , उसका वर्णन करो :



तुम्हारे मनपसंद पक्षी का चित्र बनाकर उसका वर्णन करो:



कक्षा 5 हिन्दी

कक्षा - पांचवी पाठ: 'बाघ आया उस रात' तारीख : _____

प्र.1 'बाघ आया उस रात' कविता के कवि का क्या नाम है ?

उ. _____


प्र.2 निम्न पंक्तियों को पूरा करो-

हाँ बाबा, _____

आप _____

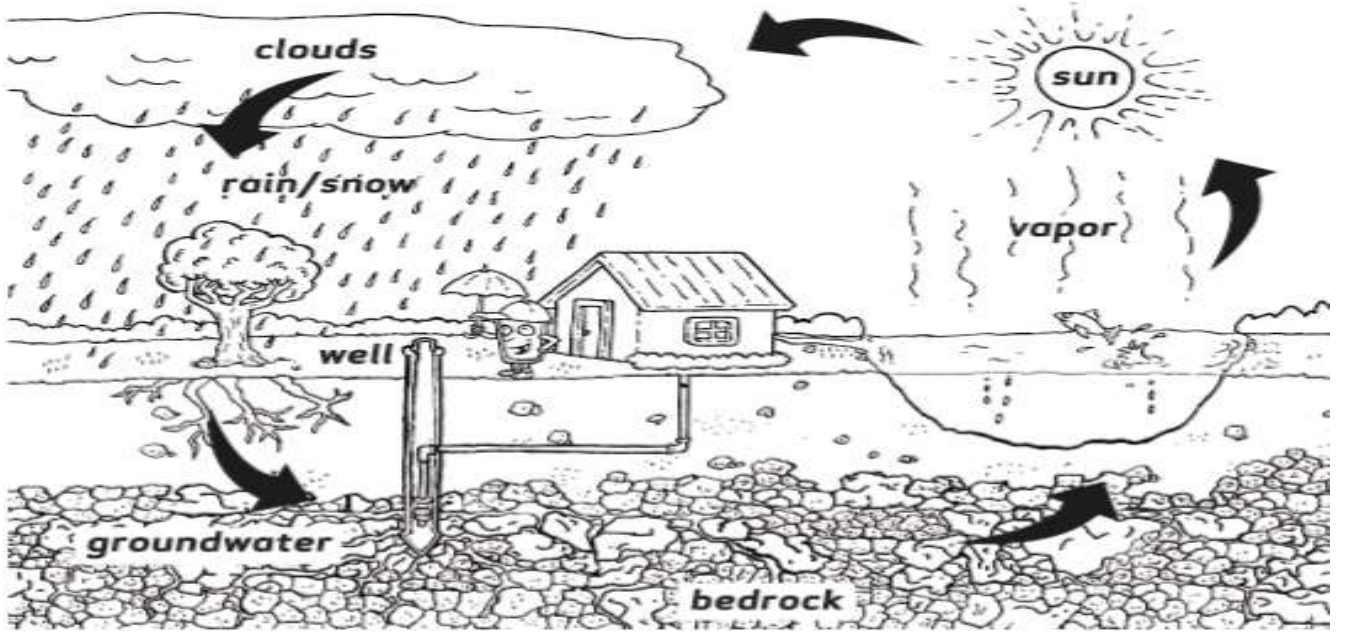
रचनात्मक लेखन

'बाघ' पर कुछ वाक्य लिखो ।



कक्षा 5 हिन्दी

कक्षा - ५ पाठ -सृजनात्मक लेखन तारीख : _____



जल चक्र में रंग भरो और उस के बारे में कुछ वाक्य लिखो :

कुछ नदियों के नाम लिखो ; वे किस राज्य में हैं, लिखो:

कक्षा 5 हिन्दी

कक्षा - पांचवी पाठ : पानी रे पानी तारीख : _____

प्रश्नों के उत्तर लिखिए

प्रश्न १. तुम्हारे घर में पानी कहाँ से आता है ?

उत्तर _____

प्रश्न २. पानी के संकट के प्रमुख कारण क्या हैं ?

उत्तर _____

प्रश्न ३. धरती को गुल्लक क्यों कहा गया है ?

उत्तर _____

प्रश्न ४. भूजल भंडार को सुरक्षित कैसे रखा जा सकता है ?

उत्तर _____

निर्देशानुसार करो (व्याकरण)

पर्यायवाची शब्द लिखिए

बादल _____

सागर _____

नदी _____

विलोम शब्द लिखिए ।

विशाल _____ धरती _____ सुरक्षित _____ सदुपयोग _____

सम्मोचारित शब्दों के भिन्नार्थ शब्द लिखो और वाक्य बनाओ।

हार _____

हार _____

अंक _____

अंक _____

कक्षा 5 हिन्दी

कक्षा - पांचवी

पाठ : नदी का सफर

तारीख : _____

पानी से संबंधित मुहावरें लिखिए और वाक्य बनाइए।

जैसे:- पानी पानी होना

१. _____

२. _____

वर्तनी एवं विशेष ज्ञान :

जल से संबंधित कोई दो नारे लिखिए

१. _____

२. _____

३. चित्र देख कर निम्न जल स्रोतों के नाम लिखिए









कक्षा 5 हिन्दी

कक्षा - पांचवी

पाठ : पानी रे पानी

तारीख : _____

प्र. १ बच्चे नदी के किनारे क्या क्या करते हैं ?

उ. _____

प्र. २ दूर् और निर् ,अ उपसर्ग का प्रयोग करते हुए नए चार चार शब्द बनाइए।

_____	_____
दूर्	
_____	_____

_____	_____
निर्	
_____	_____

_____	_____
अ	
_____	_____

कक्षा 5 हिन्दी

कक्षा - पांचवी पाठ :छोटी सी हमारी नदी तारीख :_____

व्याकरण:

प्र.कविता में आए निम्न तुकांत शब्दों को रेखा द्वारा मिलाओ

चालू	टोला
दन्नाती	ढालू
रोला	वन
नाम	उतराती
सघन	धाम

प्र: समानार्थक शब्द लिखो

ढोर डंगर _____ बालू _____
सघन _____ आषाढ _____
वेग _____ कोलाहल _____

प्र. पकिंतयॉ पूरी करो ? छोटी सी हमारी नदी
टेडी मेडी धार -----

प्र. इसी प्रकार की कोई कविता लिखो:

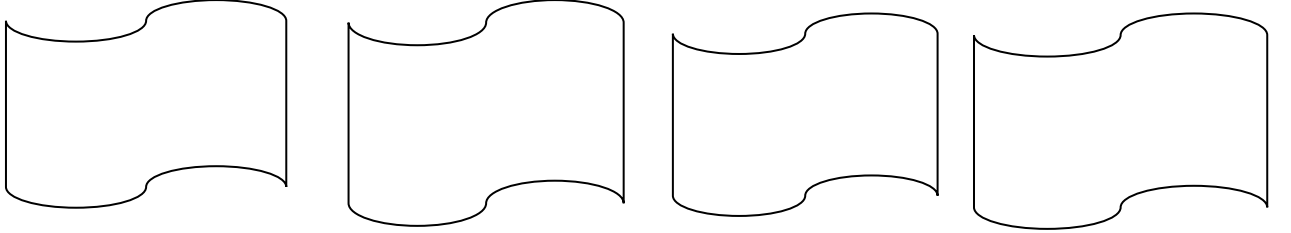
कक्षा 5 हिन्दी

कक्षा - पांचवी

पाठ : चुनौती हिमालय की ”

तारीख : _____

1. हिमालय पर्वत का वर्णन करो और पर्वतारोहण में किन चीजों का उपयोग किया जाता है चित्र बनाओ.



2 . भारत के मान चित्र में राज्य जम्मू कश्मीर ढूँढो और बताओ कौन सी दिशा में है ?



कक्षा 5 हिन्दी

कक्षा - पांचवी

पाठ :संज्ञा

तारीख : _____

निम्नलिखित शब्दों में से भाववाचक संज्ञा पर रंग भरिये :



उपरोक्त शब्दों का प्रयोग करके कोई पाँच वाक्य बनाओ :

- 1-----
- 2-----
- 3-----
- 4-----
- 5-----

कक्षा 5 हिन्दी

कक्षा - पांचवी

पाठ : पहेलियाँ

तारीख : _____

उत्तर बताओ:

रात गली में खड़ा खड़ा
डंडा लेकर बड़ा बड़ा
रहो जागते होशियार
कहता वो बार बार

मन्दिर में इसे सीश नवाये
मगर राह में ठुकराए

एक ऐसा शब्द बताये
जिससे फूल फल और
मिठाई बन जाये

आपके ही घर ये आये
तीन अक्षर का नाम बताए
शुरु के दो अति हो जाये

तुम न बुलाओ मैं आऊँगी,
न भाड़ा न किराया दूँगी
घर के हर कमरे में रहूँगी,

मुझको पीना हरदम चाहते,
मुझसे प्यार बहुत करते हो,
पर भाप बनूँ तो डरते भी हो।

कक्षा 5 हिन्दी

कक्षा - पांचवी

पाठ : मुहावरे

तारीख : _____

निम्नलिखित मुहावरों को पढ़कर वाक्य में प्रयोग करो :

अपने मुँह मियाँ मिटू बनना - स्वयं अपनी प्रशंसा करना

अपने पैरों पर खड़ा होना - स्वावलंबी होना

आँखे खुलना - सचेत होना

आँख का तारा - बहुत प्यारा

आँखे दिखाना - बहुत क्रोध करना

आसमान से बातें करना - बहुत ऊँचा होना

ईद का चाँद होना - बहुत दिनों बाद दिखाई देना

आसमान सिर पर उठाना - बहुत शोर मचाना

कक्षा 5 हिन्दी

कक्षा - पांचवी

पाठ : कहानी लेखन

तारीख : _____

दिये हुये चित्र को देखकर एक कहानी लिखो: (6 मित्र, शाम, फूटबाल, समुद्र किनारे ,सुनामी ,भयभीत, लौट)



1. The fish Tale

Odd one out!

Shade which number is the odd one out in each row?

78 26 28 13 39

18 84 99 62 72

3 5 7 9 13

Find the pattern!

Find the pattern and apply it to each row?

2	8	20	44
10		28	52
20			62
	37		

Write the place and place value of the underlined digits:-

S.No.	Number	Place	Place Value
1.	9 <u>6</u> , 5 2, 9 6 3		
2.	6 3, 6 <u>2</u> , 3 0 2		
3.	1 4, 5 2, <u>6</u> 3 9		

Can you solve the following word problems?

1. How many plants in 3 rows of 7?
2. If you share 30 biscuits among 5 children. How many do they get each?
3. Does a book weigh 100g, 100 kg, 100mm or 100cm?
4. What is ten thousand two hundred and twelve in numerals?
5. What is double of 60?
6. James has travelled half of a journey. He has gone 12 miles. How long is his journey?
7. There are 30 children in a class. 16 are boys. How many are girls?
8. If a tortoise moves 15cm in 15 minutes. How far will it move in two hours?
9. Take away 15 from 1,000
10. What is the next number 11, 23, 35, 47, _____ ?

2. Shapes and Angles

1. What measure (in degrees) should be added to the following to make each as a right angle?

i) $34^\circ + \underline{\quad} = 90^\circ$

ii) $16^\circ + \underline{\quad} = 90^\circ$

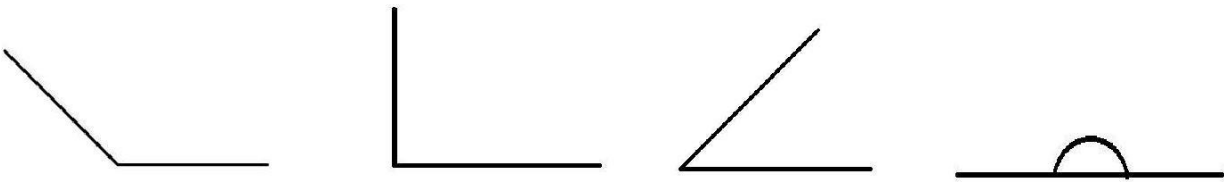
iii) $19^\circ + \underline{\quad} = 90^\circ$

iv) $28^\circ + \underline{\quad} = 90^\circ$

v) $78^\circ + \underline{\quad} = 90^\circ$

vi) $38^\circ + \underline{\quad} = 90^\circ$

2. Measure the following angles:-



3. What kind of angle (acute , obtuse , right) is made by the hands of these clocks. Also write the time?



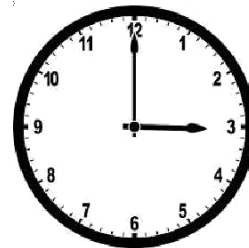
Angle

Time



Angle

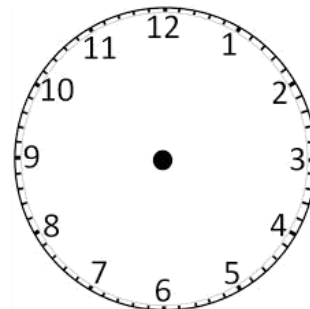
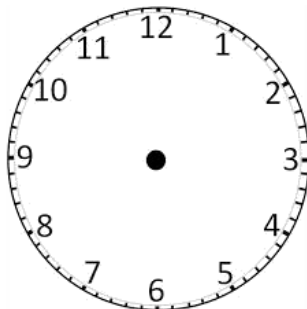
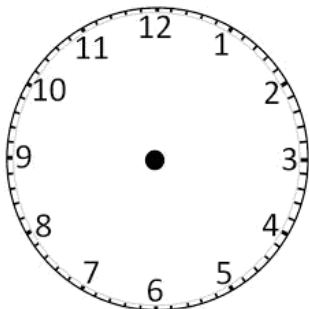
Time



Angle

Time

4. Draw the hands of the clock when they make an angle greater than a right angle.



1. Identify the following angles as acute, obtuse or right angles:-

a) 3 degrees - _____

b) 12 degrees - _____

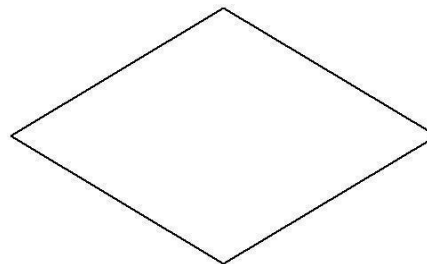
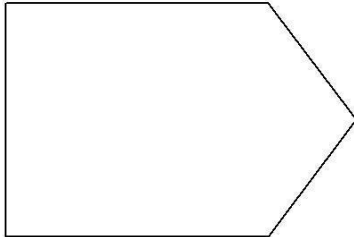
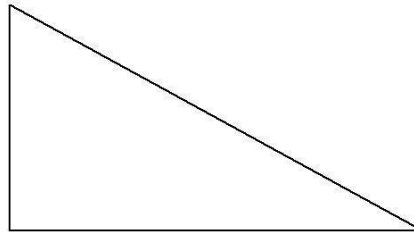

c) 72 degrees - _____

d) 165 degrees - _____

e) 90 degrees - _____

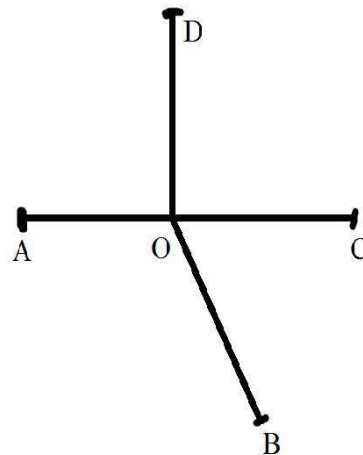
f) 60 degrees - _____

2. Count the number of angles and write them in the space given.




3. Observe the figure and answer the questions:


- i. Name the common vertex.
- ii. Name the right angle.
- iii. Name the angle less than right angle.
- iv. Name the arms of angle AOB.
- v. Name the angle more than right angle.



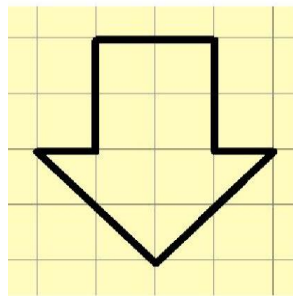
3. How many Squares?

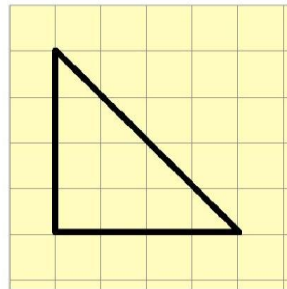
1. Find the Perimeter of the following:-



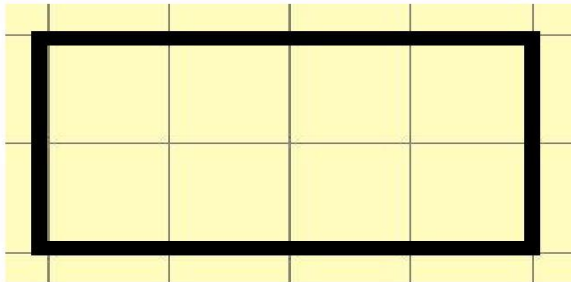


2. Find the Area of the following figures :






3. Here is a rectangle of area 8 sq.cm.




Draw 2 straight lines in this rectangle to divide it into 1 square and 2 equal triangles. Find the area of the new rectangle and the area of 1 of the triangles.

4. Rearrange the squares in the rectangle to form another rectangle whose Perimeter is 18cm.



Mixed Operation



Across

2) $3 \times 7 + 4 =$

4) $4 \times 8 + 3 =$

5) $2 \times 9 + 3 =$

8) $2 \times 3 + 6 =$

10) $9 \times 9 - 61 =$

12) $6 \times 6 - 4 =$

13) $4 \times 8 + 18 =$

16) $3 \times 9 - 3 =$

Down

1) $2 \times 9 - 3 =$

2) $3 \times 7 + 3 =$

3) $3 \times 9 - 2 =$

6) $5 \times 5 - 7 =$

7) $9 \times 8 - 51 =$

9) $3 \times 5 + 5 =$

10) $3 \times 6 + 9 =$

11) $3 \times 5 - 5 =$

12) $5 \times 7 - 5 =$

14) $3 \times 9 - 12 =$

15) $4 \times 8 + 8 =$

17) $3 \times 8 - 12 =$

4. PARTS AND WHOLES

Match the following

- $1/3, 2/5, 11/13$ mixed numeral
- $11/9, 15/13, 20/17$ proper fraction
- $7/8, 1/8, 2/8$ unit fractions
- $1/3, 1/4, 1/5$ improper fractions
- $2\frac{1}{3}, 4\frac{1}{7}, 5\frac{3}{8}$ like fractions
- $4/6, 5/6, 3/6, 2/6$ unlike fractions

Write the reciprocal (multiplicative inverse) of the following.

- a) 4 _____ e) $12/35$ _____
- b) $1/5$ _____ f) 9 _____
- c) $34/45$ _____ g) $2/4$ _____
- d) $55/76$ _____

Write as fractions :

- a) $16 \div 4 =$ _____ b) $24 \div 7 =$ _____
- c) $94 \div 31 =$ _____ d) $63 \div 5 =$ _____

Write the division fact of the following:

- a) $6/11 =$ _____
- b) $23/15 =$ _____
- c) $23/15 =$ _____
- d) $40/50 =$ _____
- e) $90/71 =$ _____

Find the missing numbers

1			2		
		3			4
	5			6	
7			8		
		9			10
	11			12	

Across

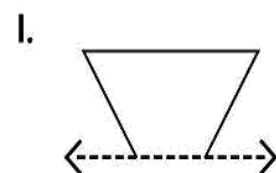
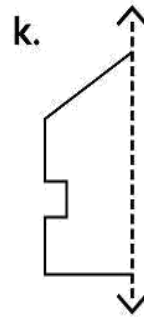
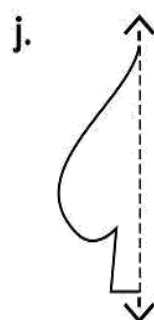
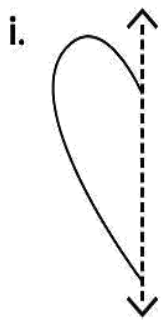
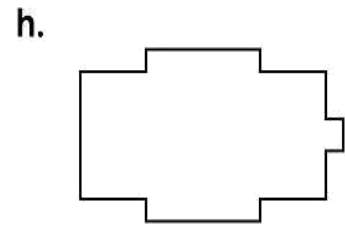
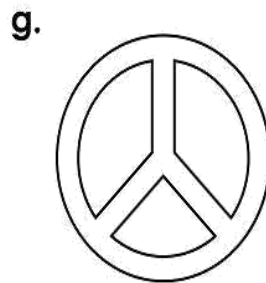

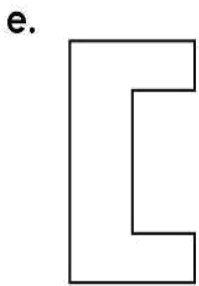
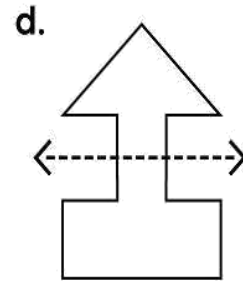
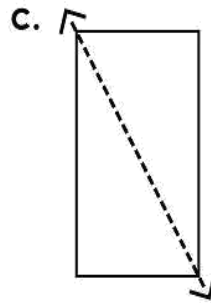
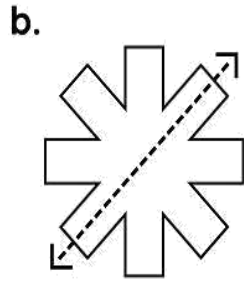
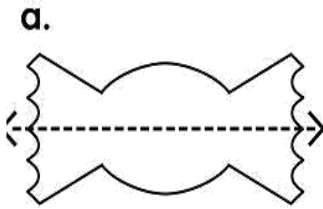
1. $12 \times \underline{\quad} = 192$
2. $19 \times \underline{\quad} = 285$
3. $17 \times \underline{\quad} = 238$
5. $18 \times \underline{\quad} = 234$
6. $11 \times \underline{\quad} = 209$
7. $11 \times \underline{\quad} = 176$
8. $12 \times \underline{\quad} = 216$
9. $18 \times \underline{\quad} = 360$
11. $19 \times \underline{\quad} = 190$
12. $13 \times \underline{\quad} = 182$

Down




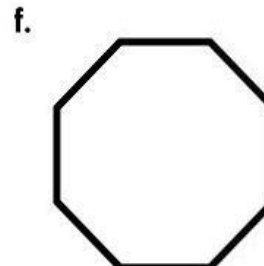
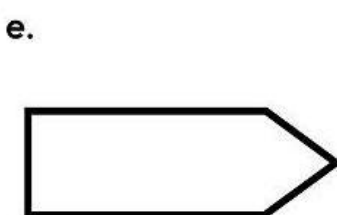
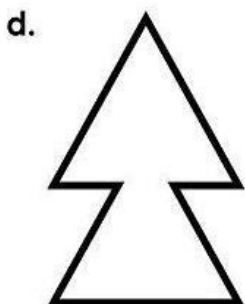
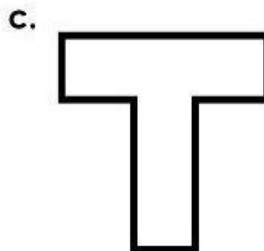
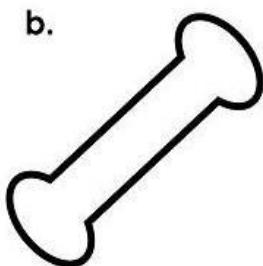

1. $13 \times \underline{\quad} = 169$
2. $15 \times \underline{\quad} = 210$
3. $20 \times \underline{\quad} = 260$
4. $12 \times \underline{\quad} = 228$
5. $14 \times \underline{\quad} = 224$
6. $14 \times \underline{\quad} = 252$
7. $12 \times \underline{\quad} = 144$
8. $21 \times \underline{\quad} = 210$
9. $12 \times \underline{\quad} = 240$
10. $20 \times \underline{\quad} = 280$

5. Does it look the same


Observe and write whether the dotted line on each shape represents a line of symmetry. (Write yes or no.)



Draw lines of symmetry on the shapes below. Some shapes may have more than one line of symmetry



Colour the pattern to make a symmetrical design.



6.Be My Multiple I will be Your Factor

Fill in blanks:

1. When two or more numbers are multiplied, then each number is a _____ of the product and the product is the _____ the numbers.
2. In the statement $7 \times 4 = 28$, 7 and 4 are _____ of the multiple _____
3. _____ is a factor of every number.
4. Every number is a multiple of _____
5. The next four numbers are 3, 6, 9, _____, _____, _____, _____
6. The multiples of 15 in between 50 and 100 are _____
7. _____ is neither prime nor composite.
8. Are all prime numbers odd? YES /NO _____
9. The factors of 12 are 1, 2, 3, 4, 6 and X. What is X? _____
10. Numbers which have more than two factors are called _____
11. Numbers which have only two factors are called _____

Fill the Chart

A. Complete the multiplication chart given below here.

	1	2	3	4	5	6	7	8	9	10	11	12
1												12
2						12						
3				12			21					
4			12							40		
5				20								
6		12										
7												
8									72			
9												
10												
11						66						
12	12											

B. Circle the multiples of 2 in **RED**.
Circle the multiples of 3 in **BLUE**.
Circle the multiples of 6 in **GREEN**.

1	2	3	4	5
6	7	8	9	10
11	12	13	14	15
16	17	18	19	20
21	22	23	24	25
26	27	28	29	30

Find out the common factors of the following numbers.

a) 16 , 48

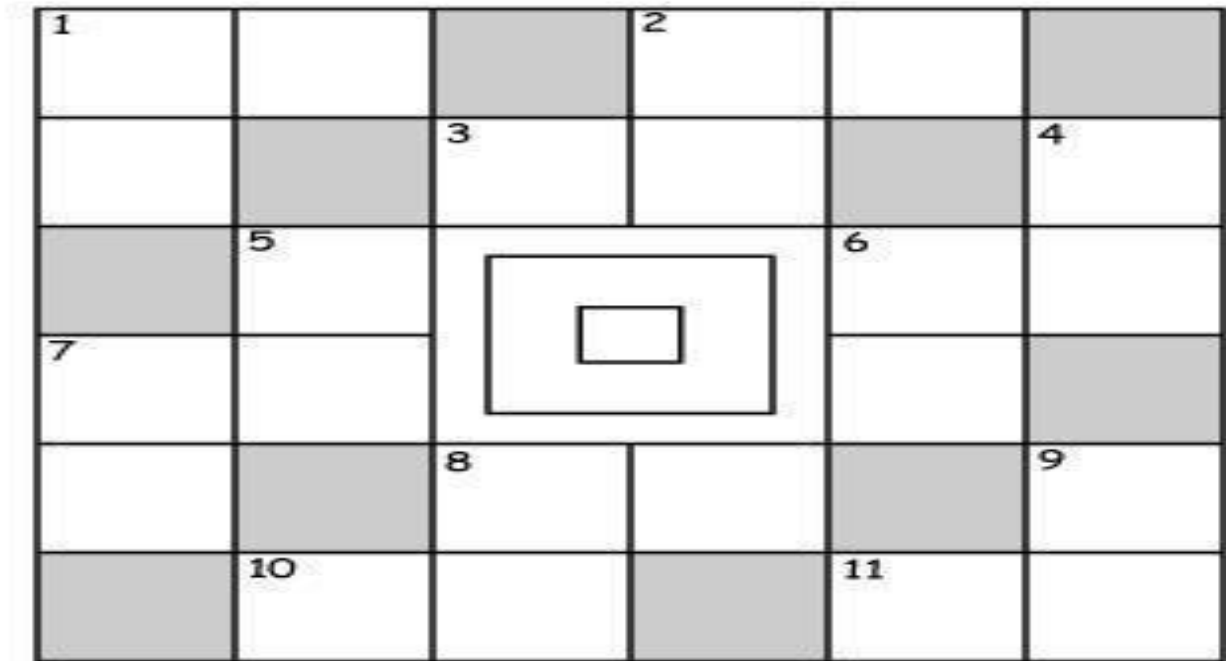
b) 10 , 15, 35

Write the common multiple of the following numbers.

a) 16 , 42 , 24

b) 60 , 36

More than / Less than



Across

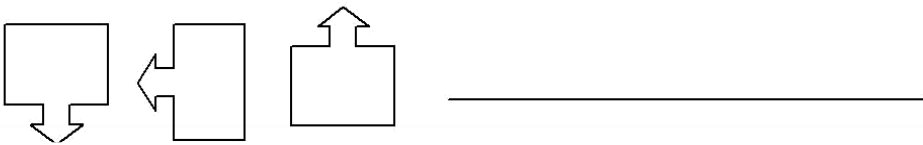
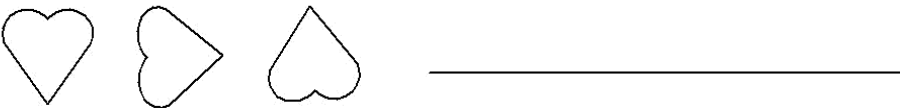
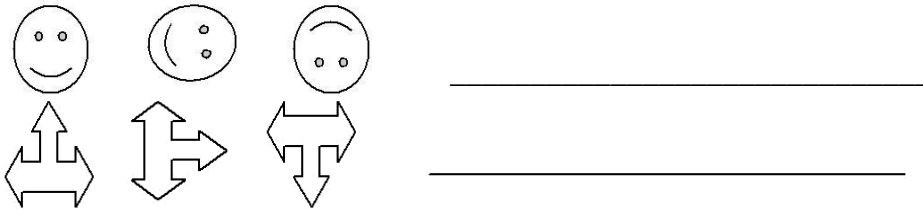
Down

















- 1. 12 more than 24
- 2. More than 64, but less than 66
- 3. 34 less than 75
- 6. 14 more than 38
- 7. 9 less than 100
- 8. 15 more than 31
- 10. 17 less than 70
- 11. More than 83, but less than 85


- 1. 15 more than 18
- 2. 39 less than 100
- 4. 28 more than 44
- 5. 9 less than 90
- 6. More than 50, but less than 52
- 7. 18 more than 74
- 8. 23 more than 20
- 9. 16 less than 90

7. Can You See The Pattern?

Complete the following patterns



				16
				14
				16
				20
17	15	17	17	




II. Guess and write

1. What is my secret number?

- * It is larger than half of 100.
- * It is more than 6 tens and less than 7 tens.
- * The tens digit is one more than one's digit.
- * Together the digits have a sum of 11.

Number Patterns



Across

- | | |
|-------------------|-------------------|
| 2) 41, 43, _____ | 15) 3, 9, _____ |
| 4) 56, 59, _____ | 16) 91, 84, _____ |
| 5) 29, 26, _____ | 17) 41, 37, _____ |
| 7) 92, 94, _____ | 18) 16, 20, _____ |
| 9) 33, 40, _____ | 19) 3, 8, _____ |
| 10) 38, 31, _____ | 21) 83, 73, _____ |
| 12) 65, 70, _____ | 24) 82, 88, _____ |
| 13) 90, 85, _____ | 26) 73, 67, _____ |

Down

- | | |
|-------------------|-------------------|
| 1) 78, 76, _____ | 14) 31, 33, _____ |
| 3) 50, 53, _____ | 15) 23, 20, _____ |
| 6) 47, 43, _____ | 17) 28, 33, _____ |
| 8) 58, 63, _____ | 18) 31, 27, _____ |
| 10) 23, 25, _____ | 20) 32, 34, _____ |
| 11) 40, 37, _____ | 22) 40, 37, _____ |
| 12) 62, 66, _____ | 23) 51, 55, _____ |
| 13) 91, 86, _____ | 25) 56, 51, _____ |

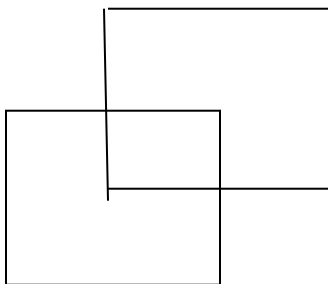
9.Boxes and Sketches

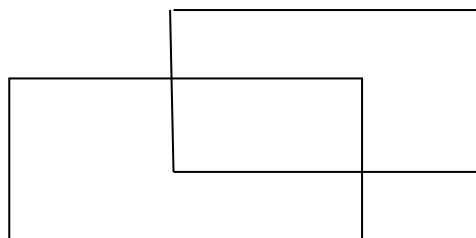
I. Fill in the blanks :

Sl. No.	Shape	No. of faces	No. of edges	No. of corners
1	Cube			
2	Cuboid			
3	Cylinder			
4	Cone			

II. Draw a floor map of your house, Make doors and windows on the deep drawing of this house

III. Join the corners of these figures and write the name of the solid





Use the numbers 1 to 9 to fill the empty cells so that the sum of each horizontal block equals the clue on its left, and the sum of each vertical block equals the clue on top. Each number can only be used once per block!

	11	3
8		
6		1

	11	13
12		
12	3	

	3	6
3		
6		4

	12	14
11	5	
15		

	15	9
11		3
13		

	9	16
15		
10		9

	12	14
13		
13		5

	9	11
10	1	
10		

	13	13
12		4
14		

10.Tenths and Hundredths

Write the number names for the following decimals:

a) 2.34 _____

b) 50.123 _____

c) 159.25 _____

d) 234.10 _____

e) 690.358 _____

Write the following as decimals

a) $\frac{6}{100}$

d) $\frac{623}{1000}$

b) $\frac{3}{1000}$

e) $\frac{217}{1000}$

c) $\frac{14}{100}$

f) $\frac{345}{100}$

Write the following decimals as fractions :

a) 0.25

b) 2.65

c) 29.30

d) 210.415

I. Write these as decimals

a) 15m 35cm = _____

b) 50m 30cm = _____

c) 80 paise = _____

d) 45 ml = _____

e) 5litre 750ml = _____

f) 12kg 500g = _____

II Solve the following

a) $5.245 + 10 + 315$

b) $32.34 + 0.17 + 7.39$

c) $348.60 - 78.05$

d) 29.3×4.2

III. Shift the decimal appropriately

a) $3.742 \times 10 =$ _____ b) $3.742 \div 10 =$ _____

c) $3.742 \times 100 =$ _____ d) $3.742 \div 100 =$ _____

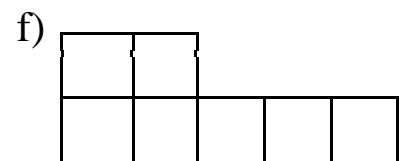
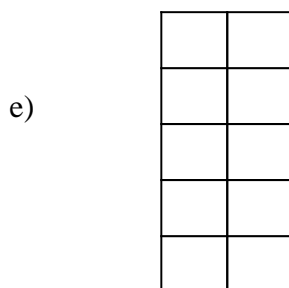

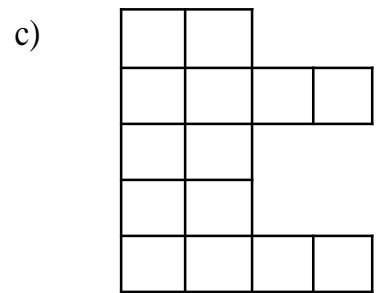
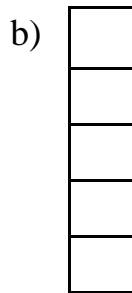

e) $3.742 \times 1000 =$ _____ f) $3.742 \div 1000 =$ _____

11. Area and Its Boundary

I Fill in the blanks

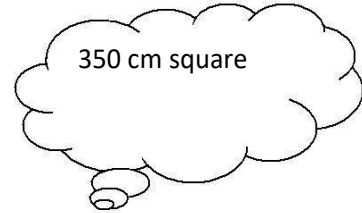
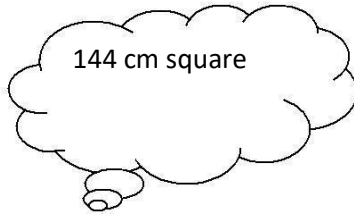
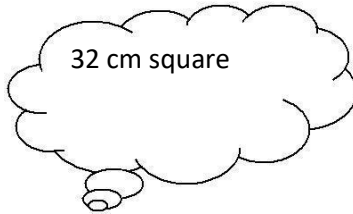
1. The region enclosed between the boundaries of a figure is called its
2. Area of a rectangle = X
3. Area of a square =X
4. The sum of the lengths of all the line segments of a simple closed figure is called its

II Measure the perimeter of these figures by counting the lines along the boundary. (Each square is 1 cm in length)

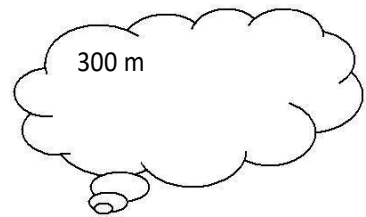
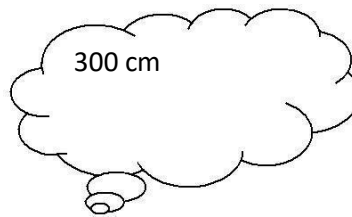
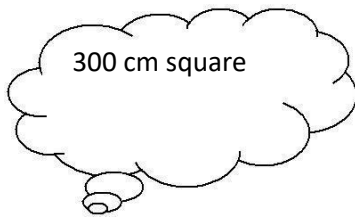


I Tick the right cloud

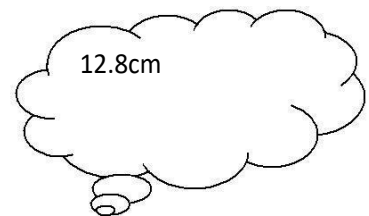
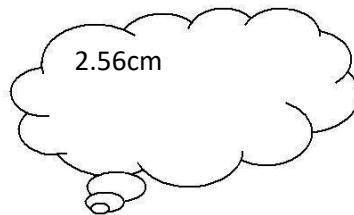
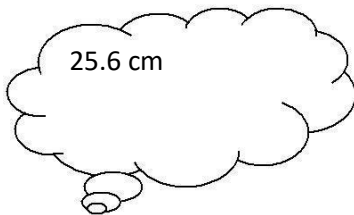
a) The area of a square of side 12 cm will be



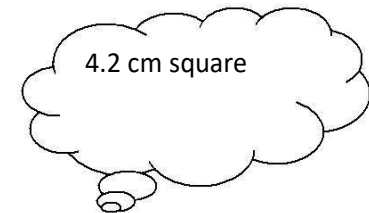
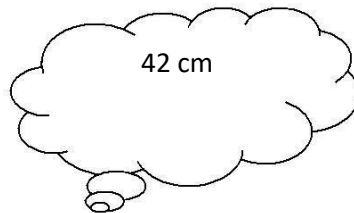
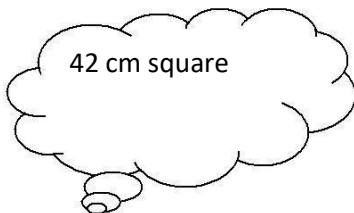
b) A rectangular plot is 20cm by 15 cm its area will be



c) The perimeter of a square whose sides are 6.4cm will be



d) The perimeter of a square whose sides are 10.5cm will be



12.Smart Charts

- I. Ajay made a record of his favourite animals he saw in the zoo.
Make a tally mark chart and answer the following questions

Animals	Tally marks	Numbers

- How many animals did Ajay see altogether?
- Which animal is least in number?
- Which animal is maximum in number?

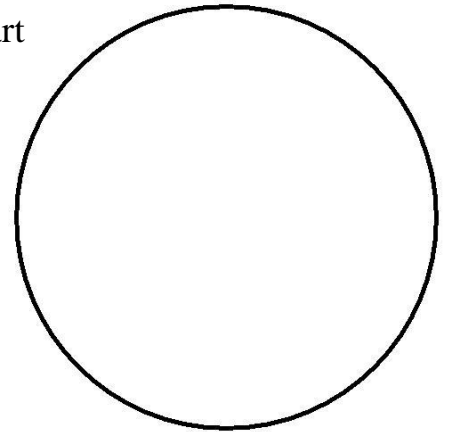
II. In a class of 100 students , the data of fruits liked by students was collected as follows. Represent this using chapatti chart / pie chart

Pine apple – 20

orange – 15

Banana – 40

Apple - 25



- Which is the most favourite fruit? _____
- Which is least favourite fruit? _____
- How many students like oranges? _____
- The difference between the number of students who like oranges and bananas is _____

SUDOKU

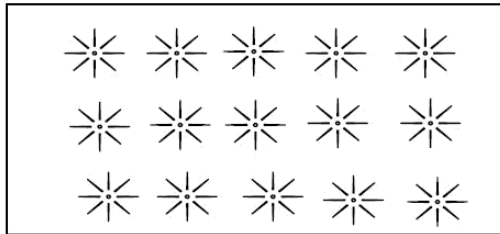
3				2	6
2			5		3
		4			
			2		
5		6			2
4	3				5

(c) Dally Suobku Ltd 2015. All rights reserved.

13.Ways to Multiply and Divide

I Observe the following and write the corresponding multiplication facts





a) $2 + 2 + 2 + 2 + 2 + 2 + 2 =$

b) $10 + 10 + 10 + 10 + 10 + 10 =$

c) $15 + 15 + 15 =$

d) $20 + 20 + 20 + 20 + 20 =$

e) $100 + 100 + 100 + 100 + 100 =$

f) $500 + 500 + 500 =$

Solve Mentally and write the answer:

a) $25 \times \underline{\hspace{2cm}} = 36 \times 25$

b) $676 \times 0 = \underline{\hspace{2cm}} \times \underline{\hspace{2cm}}$

c) $4823 \times 1 = \underline{\hspace{2cm}} \times \underline{\hspace{2cm}}$

d) $14 \times 28 \times 37 = 37 \times \underline{\hspace{2cm}} \times 14$

e) $71 \times 46 \times 19 = 46 \times 71 \times \underline{\hspace{2cm}}$

f) $7235 \times \underline{\hspace{2cm}} = 0 \times \underline{\hspace{2cm}}$

Multiply

a) 39×2

39×20

39×200

b) 97×7

97×70

97×700

Divide and find the quotient

a) $20 \div 10 =$

f) $624 \div 4 =$

b) $70 \div 10 =$

g) $999 \div 9 =$

c) $760 \div 2 =$

h) $7000 \div 7 =$

d) $540 \div 40 =$

i) $280 \div 7 =$

e) $1000 \div 4 =$

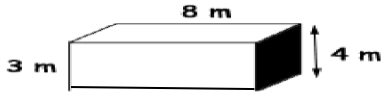
j) $539 \div 3 =$

Solve the problems:

- a) A car runs 4km in a litre of petrol. How much petrol will it require to run 80636 kms?
- b) The price of 12 packets of toffees is Rs.144. Find the cost of 24 such packets of toffees.
- c) The product of two numbers is 459. If one number is 9. Find the other.

14.How Heavy How Light?

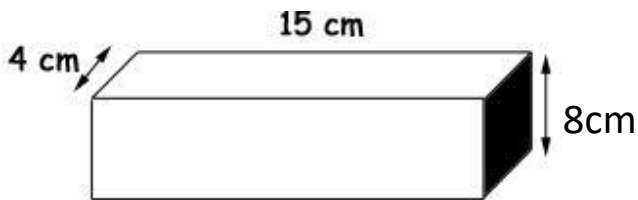
Work out the volume of each shape below .Be careful to use the correct units:



Volume = _____



Volume = _____



Volume = _____



Volume = _____

Solve the problems:

1. A storage container is 60cm long, 25cm wide and 15cm deep. What is its volume in cubic cms?

Volume = _____

2. Subhiksha is going to order some ready – mix concrete for an area 6m long and 5m wide, which needs to be laid to a depth of 10cm. How many cubic metres of concrete will she need?

Volume = _____

3. How many litres of water are needed to fill the paddling pool to a depth of 30cm?

Volume = _____

4. Sonu has a rectangular pool in her garden which is 4m by 2m. She has cleaned it out and wants to refill it with water to a depth of 25cm. How many litres of water does she need?

Volume = _____

Solve the Word Problems

1. 5 girls share 225 candies equally. How many candies did each girl get?
2. How many weeks are the same as 161 days?
3. Balu eats 2 apples a day. How many apples does he eat in 1 week?
4. A hamburger costs 3 dollars. Biggy is hungry and buys 10 of them. How much money will this cost him in Indian Rupees if 1 dollar is exchanged for Rs. 65?