

KVS,ZONAL INSTITUTE OF EDUCATION & TRAINING, CHANDIGARH



WORKSHEETS

CLASS : IV

(All Subjects)

Mentor

SHRI. MUKESH KUMAR

DY. COMMISSIONER AND DIRECTOR

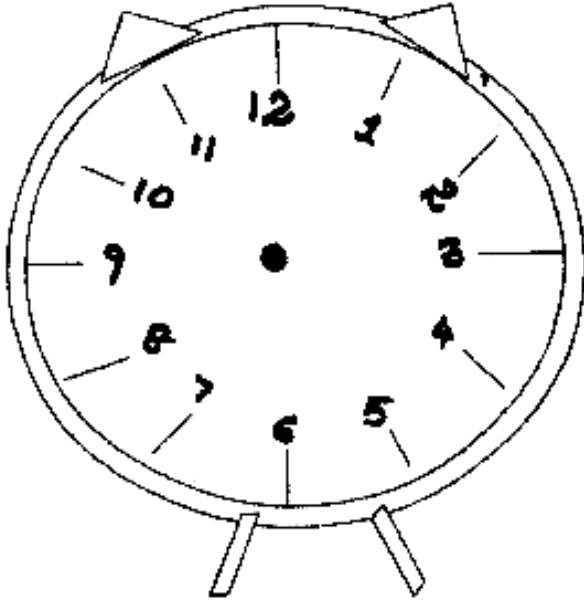
Edited & Compiled by

- 1. SH. VIPIN KUMAR, TA (PRIMARY)**
- 2. SH. RANAJIT KONDHARE, TA (PRIMARY)**

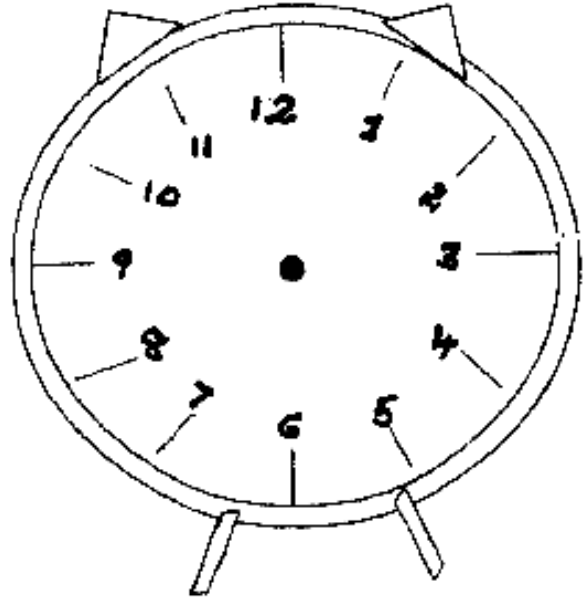
TOPIC: WAKEUP

I. Show the time on the clocks :

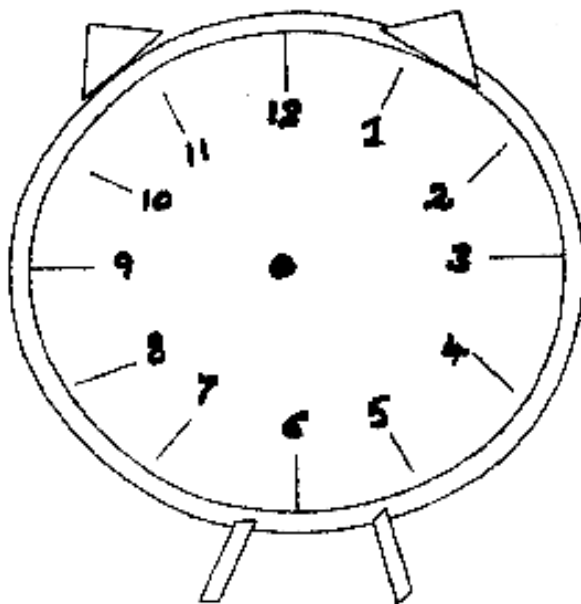
Half past nine



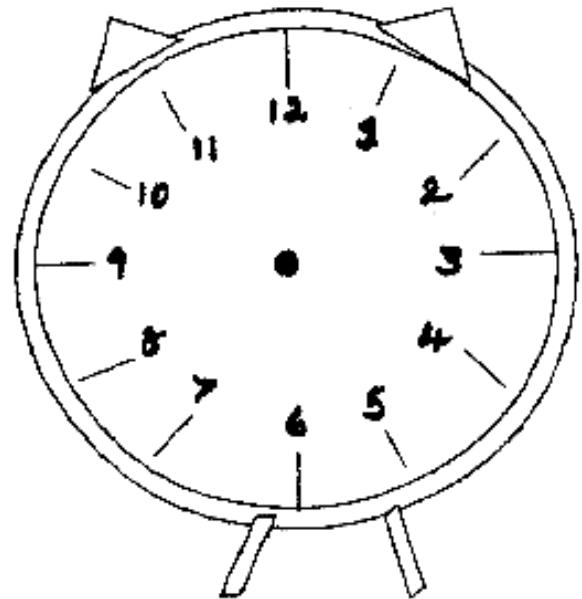
Quarter past five



8 O' clock



Half past seven



I. Some adjectives are given in the box. Use them with the same nouns with which they are used in the Unit I :

lovely warm bright buzzing
tiniest sleepy warm chirpy

1. day 5. blanket
2. bees 6. birds
3. head 7. sun
4. chicken 8. smile

II. Write two rhyming words for each of the following :

1. day
2. tree
3. bed
4. out
5. sheep
6. late

III. Encircle the correct spellings :

- | | | | |
|------------|---------|-------------|----------|
| 1. buzing | buzzing | 6. muttered | Muterred |
| 2. lovely | lively | 7. snugled | Snuggled |
| 3. tinyest | tiniest | 8. birthday | Berthday |
| 4. pillow | pillou | 9. windo | Window |
| 5. true | treu | 10. becos | Because |

TOPIC : WAKE UP

Competency: Vocabulary

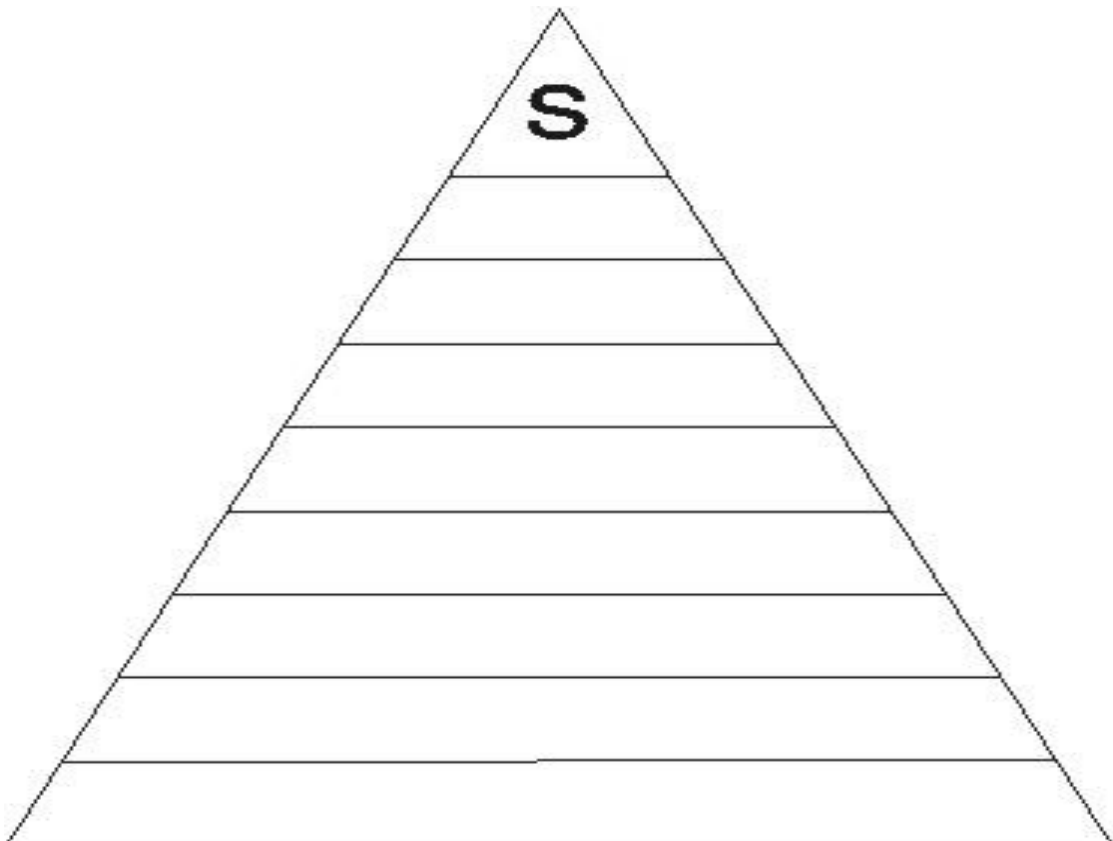
I. Some adjectives are given in the box. Use them with the suitable nouns given.

lovely warm bright buzzing
tiniest sleepy warm chirpy

- 1. day
- 2. bees
- 3. head
- 4. chicken
- 5. blanket
- 6. birds
- 7. sun
- 8. smile

II. Make a word pyramid starting with 's' :

[clue : two letters, 3 letters, 9 letters)



TOPIC : Neha's Alarm Clock

I. My Daily Routine :

1. I get up ata.m.
2. I eat my breakfast at a.m.
3. I go to school at a.m.
4. I eat lunchp.m
5. I go to sleep at p.m.

II. Tick (✓) the correct form of verb and write in the space provided

1. Neha [smile, smiles]
2. Birds [chirp, chirps]
3. The Sun [shines, shine]
4. Children [play, plays]
5. Bees [buzz, buzzing]
6. Watch [say, says]

III. Use these groups of words to make sentences of your own :

1. lie in bed
.....
2. big bright sun
.....
3. warm smile
.....

ZONAL INSTITUTE OF EDUCATION & TRAINING, CHANDIGARH

Class: IV

Sub: ENGLISH

Topic: Nose.

I. Write few sentences on any part of your body e.g., ears, eyes, head, nose etc., and give it a suitable title.

.....

.....

.....

.....

.....

.....

.....

II. Circle twelve body parts hidden in the word search :

M	F	D	T	Z	Y	K	L	R	P
L	Y	K	L	M	M	P	R	O	T
K	Z	T	X	Z	O	S	T	V	F
R	R	D	A	Y	U	W	Y	K	K
P	F	M	B	C	T	H	U	M	B
Q	F	O	R	E	H	E	A	D	S
N	I	D	U	C	H	E	E	K	R
Q	N	F	T	H	Y	L	E	G	L
R	G	S	A	E	Z	C	S	M	K
W	E	A	R	S	A	B	T	M	P
V	R	X	M	T	H	I	G	H	S
E	G	T	O	N	G	U	E	O	U

Topic: Nose

Competency: Grammar

I. Encircle the correct spellings :

funiest
funniest
funniest

breathing
brething
breatheing

twinkley
twinckley
twinkling

kneedles
needles
neadles

brite
bright
bwrite

II. Write the opposites :

1. pull x _____

7. happy x _____

2. huge x _____

8. mighty x _____

3. tall x _____

9. new x _____

4. curly x _____

10. true x _____

5. hot x _____

11. found x _____

6. hard x _____

12. Inside x _____

Topic: The Little Fir Tree

I. Look at the fir tree. Write few sentences on how the fir tree must have felt after getting back its needle like leaves and what lesson did it learn



.....

.....

.....

.....

.....

II. Write the opposites of these words:

- | | | | |
|--------------|---------|-------------|---------|
| 1. important | x | 6. polite | x |
| 2. healthy | x | 7. proper | x |
| 3. seen | x | 8. possible | x |
| 4. lucky | x | 9. perfect | x |
| 5. safe | x | 10. pure | x |

Topic: The Little Fir Tree

I. Read the following passages carefully and answer the questions that follow them.



Once a lazy young grasshopper danced and sang throughout the hot summer and the colourful spring, without doing any work. Meanwhile, in an anthill nearby, a swarm of hardworking ants stored food for winter. In winter, the grasshopper ate nothing. Weak and hungry, he went to the ants to beg for some food. He said, "Honorable ladies, I am hungry and weak. Kindly give me some food. I will surely repay it to you this summer." The ants said, "Dear sir, we are your friends, but we are sorry. What did you do all summer?" "I sang all day happily," said the grasshopper. "Now, dance all night happily," the ants said angrily and closed the door. No work, no food.



Q 1. What did the young grasshopper do throughout summer and spring?

Ans. _____

Q 2. Where did the ants live?

Ans. _____

Q 3. In winter why did he go to the ants?

Ans. _____

Q 4. Write the opposites of the given words: E.g., : day × night

a] enemies × f _____ b] strong × w _____

Q 5. Find the words that mean the same from the passage.

a] A hot season : s _____

b] to give something back : r _____

Q 6. Give the past tense for the following :

a] eat - _____ b] sing - _____

Q 7. Find the words to describe the following :

a] _____ ants b] _____ spring

Q 8. Write words ending with **-ly**

a] _____ b] _____

Q 9. Write the plurals of :

a] _____ - ants b] _____ - ladies

Q 10. Give a suitable title for the above passage :

II. Add 'ly' to the following words. Be careful about the spellings :

sudden _____

happy _____

busy _____

bright _____

high _____

loud _____

heavy _____

loving _____

bitter _____

hurried _____

ZONAL INSTITUTE OF EDUCATION & TRAINING, CHANDIGARH

Class: IV

Sub: ENGLISH

Topic: Nasruddin's aim

M A Z E

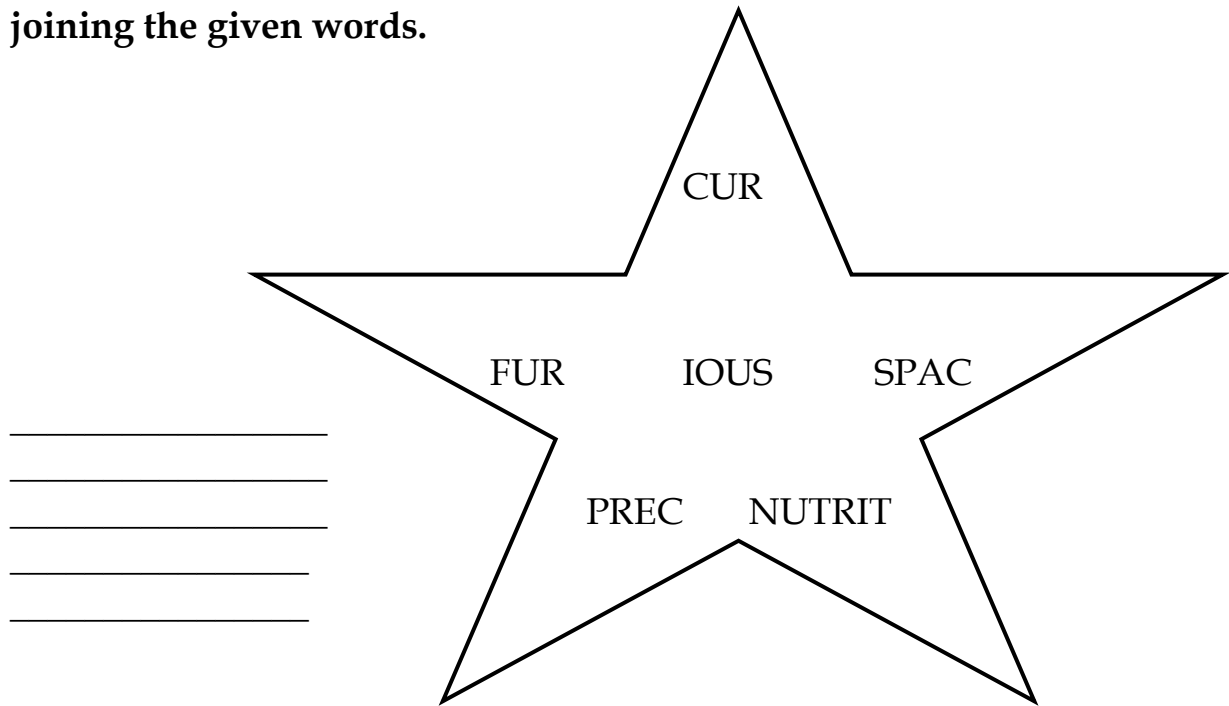
I. Find the hidden words from the lesson "Nasruddin's Aim".

A	B	S	H	O	O	T	P	R	G	L	A
R	D	K	B	O	W	R	T	V	U	A	M
C	E	I	P	X	A	I	M	U	A	X	A
H	F	L	C	D	K	U	K	S	R	P	Z
E	G	L	H	D	S	M	R	G	D	C	E
R	H	X	A	G	A	P	E	F	O	L	M
M	C	H	A	T	J	H	I	F	A	F	E
L	C	E	R	T	A	I	N	L	Y	X	N
S	T	R	I	N	G	T	A	R	G	E	T
Q	P	B	O	A	S	T	L	A	U	G	H
R	Y	N	W	M	K	P	Y	T	O	X	Y

II. Rearrange the following words in alphabetical order.

curious, wood, behind, found, reason, sink, clouds, swim, hard,
answer,
flower, die, eat, ground, island.

III. This is a star. We have to make new words ending with - ious by joining the given words.




IV. Rearrange these letters to form some words used in the lesson.
[Use the clues given in the brackets :

1. a t t h c n g i
 [talking normally]
2. a a e e m m z n t
 [great surprise]
3. a r r e y c h
 [shooting with bow & arrow]
4. f e n d d e n g i
 [protecting from attack]
5. a r g e t t
 [the goal intended to be hit]
6. u m p h r I t n a t y l [happily& proudly]

Topic: 6 Nasruddin,s aim

I. Write a sentence on each picture. Use *-ing* form of the verb in every sentence :




II. Complete the crossword with the synonyms of the given clues :

Across (→)

1. looked hard for a long time
4. silently
5. aim
6. fortunately
7. victoriously

Down (↓)

2. surprise greatly
3. village
8. grassland
9. talking freely



Topic : Why ?

I. Frame questions that begin with the word 'Why'. One has been done for you.

1. Why did he come late ?

He came late because he missed his bus.

2. ?

She was angry because her vase was broken.

3. ?

Meeta cried because she had lost her purse.

4. ?

Anjali laughed because she heard a joke.

5. ?

Garima shouted because the servant misbehaved with her.

6. ?

I jumped because I saw a cockroach.

II. Put 'apostrophe' to make the short forms of the following. One has been done for you as an example :

did not	didn't
was not	_____
has not	_____
will not	_____
let us	_____
that is	_____

cannot	_____
are not	_____
have not	_____
is not	_____
it is	_____

Topic : Why ?

I. Put these words in alphabetical order and write their meanings from the dictionary :

*curious, lead, sink, answer, reason
rolled, tears, cried*

1.
2.
3.
4.
5.
6.
7.
8.

II. Write the rhyming words :

boy		why	
sink		blow	
sky		hills	
hard		try	
yet		die	



Topic : Alice in Wonderland

I. Rearrange the words to make questions :

1. talk rabbit a how can

2. going he is where

3. read he can time the

4. hurry is in a why he

II. Pick out the describing words from the lesson :

pink eyes

white rabbit

big watch

blue coat

talking rabbit

glass table

bright flowers

Topic: Don't be Afraid of the Dark

I. Fill in the blanks with the clues given in the bracket :

1. Water melons are _____ than apples. [correct form of 'big']
2. Sridhar is the _____ boy in the class. [correct form of 'tall']
3. Bangalore is _____ than Chennai. [correct form of 'sweet']
4. Mount Everest is the _____ mountain peak in the world.
[correct form of 'high']
5. Love for one's parents is the _____ of all gifts.
[correct form of 'great']
6. _____ tell lies. [never/always]
7. Obedient children are _____ loved by everyone.
[always/sometimes]
8. I visit my grandparents _____ we get holidays.
[whenever/wherever]
9. Do not throw waste paper _____ you want.
[whoever/wherever]
10. _____ came to the ashram received fruits.
[whoever/whenever]

II. Write the short form of :

- | | |
|---------------------|---------------------|
| 1. i am - _____ | 6. she is - _____ |
| 2. we are - _____ | 7. they are - _____ |
| 3. it is - _____ | 8. he will - _____ |
| 4. will not - _____ | 9. we have - _____ |
| 5. can not - _____ | 10. was not - _____ |

Topic: Don't be Afraid of the Dark

I. Rewrite the sentences with the plural form of the words underlined.

1. The man painted the walls.

2. The baby's foot is very soft.

3. The story is about animals.

4. The puppet is beautiful.

5. The child is drawing pictures.

6. This shoe is polished.

7. I cleaned the shelf in my room.

8. The leaf has fallen from the tree.

9. The branch of this tree is very strong.

10. The match was cancelled due to rain.

II. Add the suffix 'ness', 'ity' or 'ly' and make new words :

1. happy - _____

7. sure - _____

2. polite - _____

8. mad - _____

3. solid - _____

9. correct - _____

4. curious - _____

10. heavy - _____

5. lazy - _____

11. bright - _____

6. blind - _____

12. complete - _____

Topic: Helen Keller

Competency: Creative Writing

I a] Write five to six sentences about 'A Rainy Day'. Use the clues given below.

Weather, cloudy, use umbrellas, raincoats, warm clothes, room-heaters, eat hot and spicy, children, paper boats.



b] Write five to six sentences about 'Cricket' using the clues:

Out door, bat, ball, wickets, bowlers, batsmen, umpire, wicket-keeper,

MY FAVOURITE PLAYER.



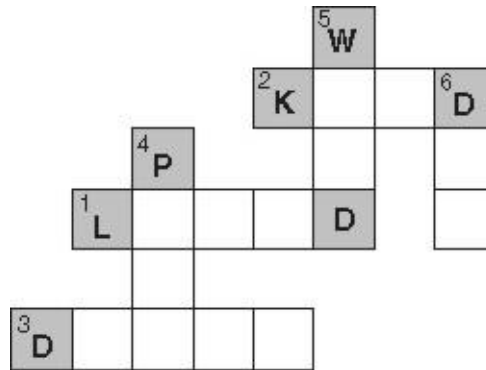

Topic :The Donkey

I. Write (a) or (an) to complete each sentence.

1. We saw _____ elephant at the zoo.
2. Sheela brought _____ apple to her teacher.
3. Our family stayed in _____ hotel on our vacation.
4. Yesterday I saw _____ ant hill.
5. Texas is _____ large state.
6. Please look that word up in _____ Spanish dictionary.
7. John will put on _____ old shirt before he begins to paint.
8. Jill will pull the toddler in _____ wagon.
9. I use _____ umbrella when it rains.
10. Mother placed the flowers in _____ vase.
11. They need _____ oven for their new house.
12. We landed on _____ island.
13. Dad will put _____ engine in the old car.
14. Sam will use _____ axe to chop firewood.
15. Martin has _____ blue and white tie.
16. Juile and Justin talked to _____ teacher about their project.
17. She went to get _____ open bottle of sunscreen.
18. Neal wrote _____ article for the school paper.

Topic :The Donkey

I. Fill in the crossword with the opposites of the given clues :



Across (→)



1. hated
2. cruel
3. clean

Down (↓)

4. rich
5. domestic
6. wet


II. Read the following sentences and complete the blanks using the following words :

1. The weather _____ beautiful today.
2. All the children _____ in the playground.
3. Boys! You _____ always late for class.
4. _____ you in the basketball team, too ?
5. Nobody in my class _____ interested in football.
6. _____ this computer more expensive than that one ?
7. Sally _____ my best friend.
8. Mum and dad _____ downstairs watching television.
9. Poll and Henry _____ in the computer room.
10. The Eiffel tower _____ the tallest monument in Paris.



Topic : I had a Little Pony

I. Write the names of animals under their pictures :



.....

.....

.....



.....

.....

.....

II. Match these animals with their living places :

Animals	Living Places
1. pig	a. stable
2. horse	b. nest
3. dog	c. burrow
4. bird	d. hole
5. rat	e. sty
6. rabbit	f. kennel

Topic :The Milkman's Cow

I. Fill in the blanks using the words given in the help box :

jingling, gleaming, muscles, refused, grocer


1. The milkman's cow _____ to move.
2. Buttons and buckles of a policeman were _____ bright.
3. A _____ had a bag of potatoes and peas.
4. The _____ of a wrestler were gleaming in the sun.
5. An ice-cream man with his _____ cart.

II. Match the word to their synonyms :

1. refused to smile widely
2. begged to pull hard
3. clattered to move or dance round or round
4. grinned to say no
5. pail to ask for money or food
6. gleaming knocking together to make a loud noise
7. tugged bucket
8. twirling shining

Topic :The Milkman's Cow

I. A milkman visits your house everyday and brings you milk.
Write a few lines about him.



II. Fill in the blanks using the words given in the help box :

jingling, gleaming, muscles, refused, grocer

1. The milkman's cow _____ to move.
2. Buttons and buckles of a policeman were _____ bright.
3. A _____ had a bag of potatoes and peas.
4. The _____ of a wrestler were gleaming in the sun.
5. An ice-cream man with his _____ cart.

ZONAL INSTITUTE OF EDUCATION & TRAINING, CHANDIGARH

Class: IV

Sub: ENGLISH

Topic :Hiawatha

I. Fill in the blanks using a, an, the :

This is _____ airport. Planes land and take off from here. He is _____ pilot. Look at that lady in _____ blue saree. She is _____ hair hostess.

II. Write a sentence about each of the following :

1. Hiawatha - _____
2. birds - _____
3. beavers - _____
4. reindeer - _____
5. rabbit - _____

III. Choose words from the list and complete the group.

[ice-cream, umpire, medicine, honey, traffic light]

1. sunny day, cotton clothes, umbrella _____
2. road, traffic police, zebra crossing _____
3. cricket, batsman, bowler _____
4. hospital, patient, nurse, doctor _____
5. flowers, honey bees, bee-hives _____

IV. Name other languages you can speak.

V. Write names of 5 things you carry when you are going for a

picnic :

_____ / _____ / _____

_____ / _____

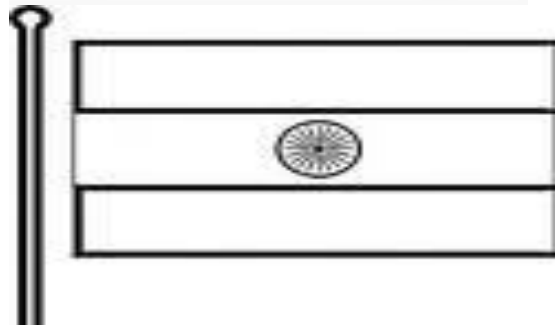
Topic :Hiawatha

I. Choose the correct word from the box and fill in the blanks :

1. Do you _____ a secret ? [no, know]
2. I can _____ the bird's song. [hear, here]
3. The king sits on the _____ [thrown, throne]
4. The squirrel has a long _____ [tail, tale]
5. This sum is _____ [right, write]
6. I have to leave at _____ [too, two]
7. He is our school _____ [principal, principle]

II. Match the movements with that of things::

- | | |
|-----------|----------|
| wind | slithers |
| snake | blows |
| duck | flows |
| river | waddles |
| butterfly | flutters |
| flag | flies |
| aeroplane | flutters |



III. Make words from the jumbled set of words :

1. setercs - _____ (something hidden from others)
2. mitid - _____ (shy)
3. lodseg - _____(beavers live here)
4. laeenrd - _____ (educated)
5. wгимaw - _____(a house of Red Indians)

ZONAL INSTITUTE OF EDUCATION & TRAINING, CHANDIGARH

Class: IV

Sub: ENGLISH

Topic :The Scholar's Mother Tongue

I. Complete the puzzle with the help of the clues given below :

1. opposite of shut

2. opposite of confident

3. heavy rain and strong wind

4. speak in a low voice, which is difficult to hear

5. opposite of fake

6. streak of light in a cloudy sky

II. Circle the word that is opposite of the word given on the left.

1. outside - close, open, inside, beside
2. together - in a group, separate, fine, deep
3. shadow - light, outline, reflection, drawn
4. noise - voice, silence, din, storm

Topic :The Scholar's Mother Tongue

I. Fill in the missing letters :

1. asl ___ ep 2. flu ___ nt
3. ni ___ ht 4. irrita ___ ed 5. di ___ ficult

II. Match the words in column 'A' with words in column 'B' :

'A'	'B'
1. king	children
2. teacher	patients
3. doctor	courtiers
4. bus driver	clients
5. lawyer	passengers
6. mother	students

III. Write the following words in alphabetical order :

[traffic, hard, pump, start, large, finish, vehicle, electric, diesel, gaseous , save, benefit, breathe, melody, thread, direction, movement, forehead, immediate, clean, staff, gastric , team, strength, excellent, difficult, swim, medal, genealogist , captain, dream, courage, different, soothing, barring, official, government, firewood, zip, umbrella, reached, recycle, watchman, anger, harmful, lying, natural, various, Xerox, yahoo]

Topic : A Watering Rhyme

Find the answer for the following riddles:

I. Find who I am and write.

1. I fix the plant firmly to the soil and absorb water.

2. I am green in colour. I prepare food.

3. I grow above the soil. Many branches are there on me.

4. I am the attractive part of the plant.

II. Underline the silent letters in these words :

know	walk	talk	Knife
knitting	knowledge	write	Knee
condemn	hour	honour	Watch
sign	depot	answer	Listen
honest	wrap	wrong	

III. Punctuate and Rewrite these sentences :

1. alice saw a white rabbit in the garden.

2. rahim ravi and raju are going to see the circus.

3. how are you mohan

Topic : The Giving Tree

Find the answer for the following riddles:

I. Who am I ?

1. I carry a baby plant inside me

2. I fix the plant firmly to the soil

3. I am the food factory of the plant

4. I bear branches

5. I have seeds inside me

II. Write '-age' words that have the following meanings :

1. whatever you carry while travelling l _____
2. waste material thrown away g _____
3. a very long journey by sea v _____
4. a reflection in the mirror i _____
5. written information you often leave for someone m _____
6. a small house in the countryside c _____
7. a thing that helps you to be better a _____

III. Make adverbs from the following words :

- hasty _____
- happy _____
- cool _____
- proud _____
- naughty _____
- light _____

Topic :BOOKS

I. March the columns to complete the sentences correctly :

- | | |
|----------------------------------|------------------------|
| 1. Rahul is very proud | a. like a mule |
| 2. He is as gentle | b. as a lamb |
| 3. He is obstinate | c. as firm as a rock |
| 4. You can't convince him; he is | d. as greedy as a wolf |
| 5. He wants more money; he is | e. like a peacock |

II. Add 'es' to the following words. Be careful about the change in spellings :

1. knife _____
2. baby _____
3. wife _____
4. hurry _____
5. city _____

IV. Give one word for the following :

1. A place where aeroplanes are kept _____
2. A place where coins are made _____
3. A place where Hindus go to worship _____
4. A place where you buy stamps, envelopes, etc. _____
5. A place in your house where your vehicles are kept _____

Topic : Going to buy a book

I. Fill in the blanks with suitable prepositions :

[of, for, in, on, by, up, down, to, with, at]

1. She is afraid _____ her mother.
2. I went _____ the stairs.
3. I get _____ early in the morning.
4. She will go _____ us.
5. Manish lives _____ Delhi.
6. The book is _____ the shelf.
7. They asked _____ money.
8. She was scolded _____ her teacher.
9. Sunita is related _____ me.

II. Complete these sentences :

1. May I _____
2. Will you please _____
3. Always _____
4. Sorry _____ come with you.
5. Excuse me I _____ hurry.

Topic :Naughty Boy

I. Classify these things accordingly :

mosquito sheep mango tree crow spade
axe camel house fly coconut tree sparrow

tools	insects	animals	tress	Birds

IV. Match the bubbles to get the correct rhyming words :



V. Underline & highlight the action words with in the following sentences :

1. Ravi watched a cartoon on television.
2. The captain blew the whistle.
3. The horse jumped over the fence.
4. The angry man shouted at the boys.
5. The crowd clapped for the players.

III. Pick out the words having silent letters and write them in the space given:

know--- honest---knelt---walk---knife---listen---doubt---height---hasten

.....

.....

.....

IV. Form as many words as you can using the letters of the words given here:

1. threaten						
2. mastermind						
3. arrangement						
4. testament						

V. Colour this picture and write three sentences about it:-

.....

.....

.....

.....

.....

.....



CLASS: IV

TOPIC: GOING TO SCHOOL

DATE:

Guess the names of places with the help of the clues given below: CLUES PLACES

(A) Rains heavily

.....

(B) Camel carts are used

.....

(E) Our feet sink into it

.....

(C) Paths are rocky and uneven

.....

(D) Small boats are used

.....



Given below are the types of bridges. Rearrange the letters to write the correct words. Write two lines about each:

(a) EENCTM: bridge

.....
.....

(b) EPRO :bridge

.....
.....

(c) OBOBMA:bridge

.....
.....



Identify the pictures given below:



ZONAL INSTITUTE OF EDUCATION & TRAINING, CHANDIGARH

Class: IV

Sub: EVS

CLASS: IV

TOPIC: GOING TO SCHOOL

DATE:

2

Enlist various problems faced by students in rural areas while going to school.

Ans.....

.....

.....

.....



Fill in the blanks:

1. Ahelps a trolley to move across the rope.
2. Deserts are covered with
3. One may slip and fall onsnow.
4. does not pass through very thick forests.
5. Some bridges may also have



Name any four animals used as means of transport.

1.
2.
3.
4.



Differentiate between cement bridge and bamboo bridge




CLASS: IV

TOPIC: EAR TO EAR

DATE:



Animals Crossword Puzzle



ACROSS

1. Big animal that has one horn
3. This animal has a very long neck
6. Man's best friend
8. Lives in the cold and waddles
9. Slow moving and has a shell
12. Striped animal that looks like a horse
13. Can swim under water, walk on land and has a big bite

DOWN

2. this animal has a long trunk
4. this animal likes to eat carrots
5. this animal loves bananas
7. some say this animal has nine lives
10. has big ears and likes to hop
11. king of jungle

- Classify the animals according to types of ears present : internal or external
Fox, Elephant, Sparrow, Pigeon, Peacock, Cat, Duck, Lizard, Cow, Mouse, Camel, Pig, Frog, Buffalo, Hen

CLASS: IV

TOPIC: EAR TO EAR

DATE:

Name any two animals which:

- I. Have ears that can be seen _____
- II. Have ears that cannot be seen _____
- III. Have hair on skin _____
- IV. Do not have hair on skin _____
- V. Give birth to young ones _____
- VI. Lay eggs _____



Draw your favourite pet and write five sentences on it.



Match the animals with the pictures of their skin:




CLASS: IV

TOPIC: A DAY WITH NANDU

DATE:

I. Colour the picture given below and write few sentences on it using the key words given:



.....
.....
.....
.....
.....
.....



II. What is the importance of living in a herd?

Ans:.....
.....
.....

III. Name any two national parks of India conserving animals. Also write the name of state where they are located.

Ans: 1. _____
2. _____

III. Observe the picture carefully and answer the questions given below:



1. The animal which is riding.
.....
2. The animal which gives the ride.
.....
3. Why is one animal sitting on the other animal?
.....
.....

IV. How do the animals like snakes, bears, monkeys and horses are ill-treated by human beings.

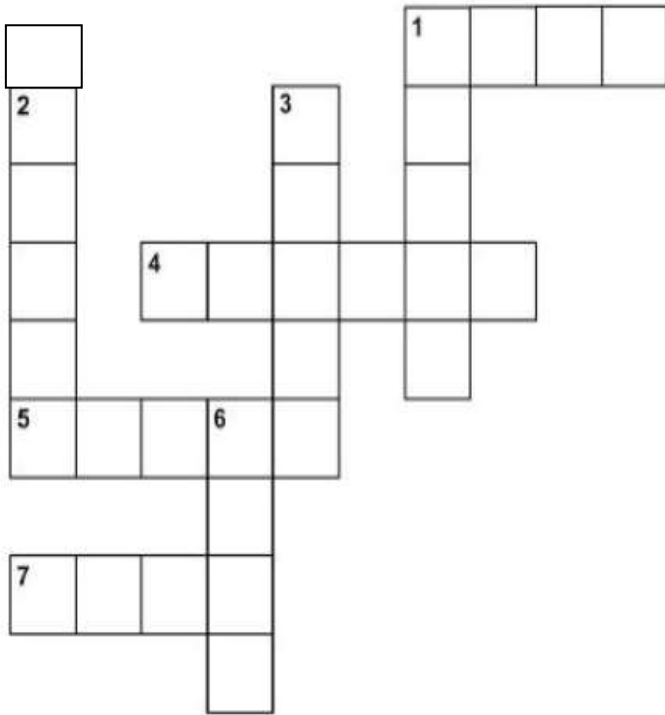
Ans:.....
.....
.....

CLASS:IV

TOPIC: A DAY WITH NANDU


DATE:

Guess the favourite food of each animal or bird and complete the given crossword puzzle.




Clues:

Across :



Down :



Match the animal groups to their herd names:

Identify the animals on the basis of their sounds:

- (A)
- Camels
 - Bees
 - Pigeons
 - Bats
 - Ducks
 - Cattle
 - Fish
 - Dogs

- (B)
- Flight
 - Team
 - Flock
 - Shoal
 - Pack
 - Swarm
 - Caravan
 - Colony

Sounds

- Buzz
- Chirp
- Squeak
- Bleat
- Hoot
- Chatter
- Bray
- Quack

Animals

CLASS: IV

TOPIC: THE STORY OF AMRITA

DATE:

1. Draw your favorite tree and answer the following questions:

Name:

Where have you seen it?

How does it look?

Does it have flowers or fruits?

What does its leaf look like?

Why do you like this tree?


2. Write any two slogans on importance of plants:

❖

❖

3. Make a collage of following pictures of Rajasthan:

Traditional dress, musical instruments, folk dance, Rajasthan food, plants and animals of desert, houses in desert, means of transport



CLASS:IV

TOPIC: ANITA AND HONEYBEES


DATE:

Insects



Across

1. A flying animal that eats insects.
3. A white insect that is the ants' enemy.
5. A cup ___ tea.
8. The top of a jar.
10. How many legs do insects have?
11. Yes ___ no.
12. A red insect with black spots.
14. Turn the light ____.
15. A long flying insect.



Down

1. An insect that makes honey.
2. An insect that lives in a colony.
4. An insect that drinks blood.
6. An insect that makes dogs itchy.
7. An insect that is bright at night.
9. Not night.
13. Open the _____.



ZONAL INSTITUTE OF EDUCATION & TRAINING, CHANDIGARH

Class: IV

Sub: EVS

CLASS: IV

TOPIC: ANITA AND HONEYBEES

DATE:

1. Write the functions of the bees in the beehive:

(a) Queen bee:

.....

(b) Male bee:

.....

(c) Worker bee:

.....

2. Draw picture of honey bee and write few sentences about it.



.....

.....

.....

.....

.....

3. Find out how much money do you spend in one year for various school related things:

Things	Money spent
1. Fee	
2. Transport	
3. Stationery	
4. Uniforms	
5. School bag	
6. Lunch box	
TOTAL	

CLASS: IV

TOPIC: OMANA'S JOURNEY

DATE:

1. What do you understand by following terms:

(a)Reservation Chart:

(b)Platform:

(c)Luggage:

(d)Berth:

(e)Ticket collector:

2. What is the importance of Railways?


Ans:

.....

.....

.....

Observe the picture carefully and write few lines about these:



(a)



Barrel Cactus



Saguaro Cactus



Saguaro Cactus



Pillar Cactus



Barrel Cactus



Jade Cactus

(b)

(a).....


.....

(b).....

.....

CLASS: IV TOPIC: OMANA'S JOURNEY DATE:

Complete the crossword puzzle with the help of given clues:



Clues Across

- 4. Fixes the electrical wires, lights and fans
- 8. Protects our country from enemies
- 9. Paints the walls and ceiling
- 10. Takes care of patients admitted in hospital

Clues Down

- 1. Teaches
- 2. Fits the water tank, pipes and taps
- 3. Makes the plan of a house
- 5. Mends our shoes
- 6. Treats us when we are sick
- 7. Brings our letters to our home

ZONAL INSTITUTE OF EDUCATION & TRAINING, CHANDIGARH

Class: IV

Sub: EVS

CLASS: IV

TOPIC: FROM THE WINDOW DATE:

1. Write the names of four different states of India and find out about the following:

S.NO.	NAME OF STATE	LANGUAGE	CLOTH	FOOD

2. Draw the pictures of a tunnel and a bridge. Also enlist the various differences between them.

Tunnel

Bridge

<p>.....</p> <p>.....</p> <p>.....</p> <p>.....</p> <p>.....</p> <p>.....</p> <p>.....</p> <p>.....</p>	<p>.....</p> <p>.....</p> <p>.....</p> <p>.....</p> <p>.....</p> <p>.....</p> <p>.....</p> <p>.....</p>
---	---

3. Draw any four traffic signs:

ZONAL INSTITUTE OF EDUCATION & TRAINING, CHANDIGARH

Class: IV

Sub: EVS

13

CLASS: IV TOPIC: REACHING GRANDMOTHER'S HOUSE DATE:

1. Collect old tickets and paste them in the space given below:

(a) Railway ticket

(b) Bus ticket

(c) Cinema ticket

(d) Platform ticket

2. Look at the picture of given railway ticket. Find the following information on the ticket and circle them with different colours:

कोच	सीट/बर्थ	लिंग	आयु	यात्रा अधिकार पत्र	रिवाजत	आ. शु.	प. शु.	सु. अ.	वाउचर रु.	कु. नकर रु.
COACH	SEAT/BERTH	SEX	AGE	T. AUTHORITY	CONC.	R.FEE	S.CH.	SF.CH.	VOUCH. Rs.	T. CABH Rs.
S5	3	UB	M 37							
S5	2	MB	F 30							

PNR NO. 444-2239880 TRAIN NO. 6732 DATE 22-11-2005 K.M. 482 ADULT 2 CHILD 0 /85380594

शेणी/CLASS BANGALORE CY JN MADURAI JN

शय्या बेंगलूरु सिटी जं मद्रुरै जं.

JOURNEY CUM RESERVATION TICKET

सक/से आरक्षित RESV. UP TO 9RS-NDLS

40 Re. FOUR TWO FOUR ONLY 424

1-TICKET/ NO CASH REFUNDS

TUTICORIN EXP BOARDING BANGALORE CY JN 22-11-2005 SCHEDULED DEP 21:15
990 18-11-2005 09:30 RCT1 214 VIA DPJ -ED -KRR

The train number:

Date of start of journey:

Berth number:

Fare:

a) What other information can you find from the ticket:

CLASS: IV

TOPIC: CHANGING FAMILIES

DATE:

1. Draw a tree of your family: -

2. Find out all about the youngest child in your home or in the home of a relative.
Then write: -

- When was the baby born
- Is the baby a boy and a girl?
- How are you related to him or her?
- What is the colour of his or her eyes?
- Does the baby have any teeth?
- What different sounds does the baby make?

3. According to marriage law what is the marriageable age for:

For girls:

For boys:

4. Make a list of festivals that you celebrate:

In school	At home

CLASS: IV

TOPIC: HU TU TU TU

DATE:

1. Observe the pictures and name the famous sports personalities and also the sport they are associated with.



2. FIND THE NAMES OF TEN GAMES IN THIS GRID

FIND THE NAMES OF TEN GAMES IN THIS GRID.

V	O	L	L	E	Y	B	A	L	L
B	A	D	M	I	N	T	O	N	U
C	H	E	S	S	E	R	S	C	D
A	H	O	C	K	E	Y	B	P	O
R	L	U	C	A	R	R	O	M	G
D	O	I	A	D	P	L	Q	W	V
S	R	T	K	A	B	A	D	D	I
C	N	F	O	O	T	B	A	L	L

ZONAL INSTITUTE OF EDUCATION & TRAINING, CHANDIGARH

Class: IV

Sub: EVS

CLASS: IV

TOPIC: HU TU TU TU

DATE:

Name any 5 women sports persons. Also mention the names of their respective sports.

Women sports persons	Sports
(a)
(b)
(c)
(d)
(e)

3. Identify the games/sports given in pictures below and give the asked Information:



NAME : _____

NO. OF PLAYERS : _____

RULE 1 : _____

RULE 2 : _____

CLASS: IV


2. HU TU TU TU

DATE:

World Cup 2014 Qualifiers



All 32 countries to search for in the puzzle below!



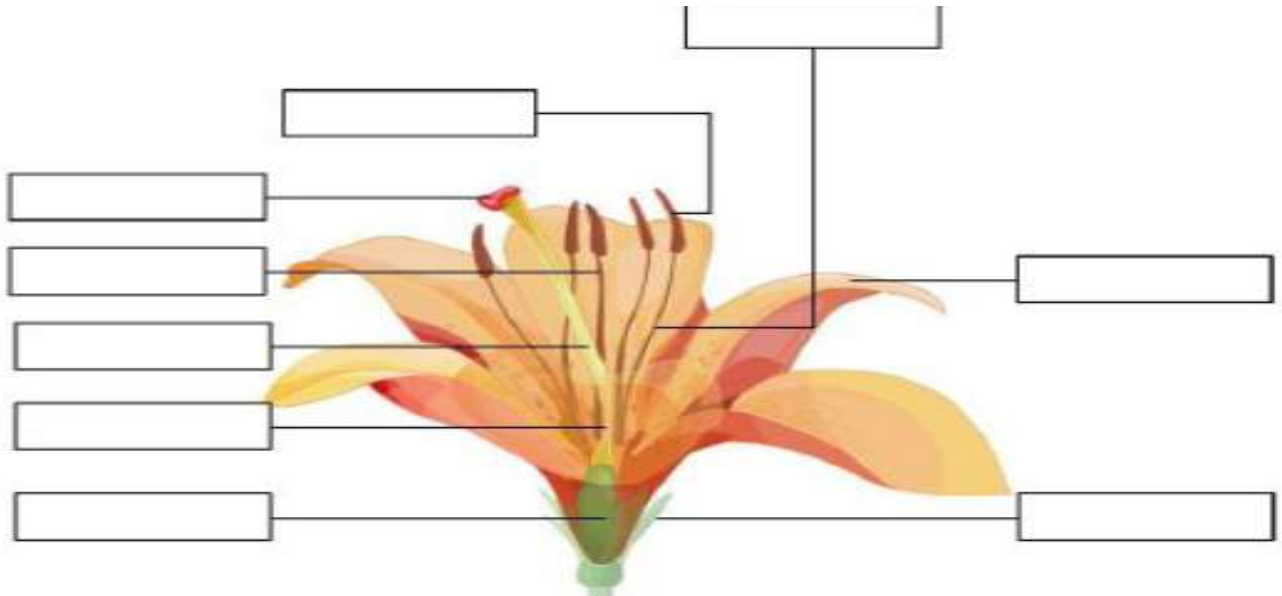
- | | | | | | |
|---------------|-----------|-------------|-------------|---------|-------------|
| Algeria | Argentina | Australia | Belgium | Bosnia | Brazil |
| Cameroon | Chile | Colombia | Costa Rica | Croatia | Ecuador |
| England | France | Germany | Ghana | Greece | Honduras |
| Iran | Italy | Ivory Coast | Japan | Mexico | Netherlands |
| Nigeria | Portugal | Russia | South Korea | Spain | Switzerland |
| United States | Uruguay | | | | |

CLASS: IV

TOPIC: THE VALLEY OF FLOWERS

DATE:

Observe the visual of a flower. Label its parts by using the given keywords.



Keywords:

Sepal

Petal

Stamen

Carpel

Filament

Stigma

Style

Ovary

Anther

Make your own floral rangoli design:

Define and give example for the following:

Creepers:

Bushes:

Trees:

CLASS: IV

TOPIC: THE VALLEY OF FLOWERS

DATE:

1. Identify the flowers given below and write one use of each:



(a)

(a).....



(b)

(b).....



(c)

(c).....



(d)

(d).....

2. Look at the picture and answer the questions that follow:

(a) What is the girl in the picture doing? Is she doing the right thing?

.....

(b) What would you do if you see someone plucking flowers?

.....

(c) Write any two slogans to stop plucking of flowers.

1.

2.



CLASS: IV

TOPIC: THE VALLEY OF FLOWERS

DATE:

Autumn Crossword Puzzle

Using the hints, fill in the squares with these words:

LEAF AUTUMN HARVEST CORN



1						
						0
2						
3	U					
	V					
4				F		

ACROSS

- 3. Another name for fall
- 4. What falls from a tree in autumn

DOWN

- 1. Vegetable that grows on stalks
- 2. Collecting food that's been grown

Unscramble these letters to make a word. Hint: It's a sweet crunchy fruit.

L E P A P

CLASS: IV

TOPIC: RIVER TALE

DATE:

UNSCRAMBLE THE RIVERS NAME:

	THAMPBRABUAR	<input type="text"/>	<input type="text"/>	<input type="text"/>	<input type="text"/>	<input type="text"/>	<input type="text"/>	<input type="text"/>	<input type="text"/>	<input type="text"/>
	NSEAGG	<input type="text"/>	<input type="text"/>	<input type="text"/>	<input type="text"/>	<input type="text"/>				
	ANGHEM	<input type="text"/>	<input type="text"/>	<input type="text"/>	<input type="text"/>	<input type="text"/>				
<i>Samiir</i>	AIDAHAMN	<input type="text"/>	<input type="text"/>	<input type="text"/>	<input type="text"/>	<input type="text"/>	<input type="text"/>	<input type="text"/>	<i>Yumana</i>	
<i>Indus</i>	DRIVAAGO	<input type="text"/>	<input type="text"/>	<input type="text"/>	<input type="text"/>	<input type="text"/>	<input type="text"/>	<input type="text"/>	<i>Ghaggar</i>	
<i>Mahanadi</i>	RAKHSIN	<input type="text"/>	<input type="text"/>	<input type="text"/>	<input type="text"/>	<input type="text"/>	<input type="text"/>	<input type="text"/>	<i>Jhelum</i>	
<i>Narmada</i>	KRIVEA	<input type="text"/>	<input type="text"/>	<input type="text"/>	<input type="text"/>	<input type="text"/>	<input type="text"/>	<input type="text"/>	<i>Luni</i>	
<i>Brahmaputra</i>	NISDU	<input type="text"/>	<input type="text"/>	<input type="text"/>	<input type="text"/>	<input type="text"/>	<input type="text"/>	<input type="text"/>	<i>Sabarmati</i>	
<i>Pennar</i>	DRAMAAN	<input type="text"/>	<input type="text"/>	<input type="text"/>	<input type="text"/>	<input type="text"/>	<input type="text"/>	<input type="text"/>	<i>Meghna</i>	
<i>Krishna</i>	PITA	<input type="text"/>	<input type="text"/>	<input type="text"/>	<input type="text"/>	<input type="text"/>			<i>Godavari</i>	
<i>Ganges</i>	HAIM	<input type="text"/>	<input type="text"/>	<input type="text"/>	<input type="text"/>	<input type="text"/>			<i>Kaveri</i>	
<i>Mahi</i>	TRAIMBAAS	<input type="text"/>	<input type="text"/>	<input type="text"/>	<input type="text"/>	<input type="text"/>	<input type="text"/>	<input type="text"/>	<i>Tapi</i>	
<i>Musi</i>	RAGHAGG	<input type="text"/>	<input type="text"/>	<input type="text"/>	<input type="text"/>	<input type="text"/>	<input type="text"/>	<input type="text"/>	<i>Ravi</i>	
	UISM	<input type="text"/>	<input type="text"/>	<input type="text"/>	<input type="text"/>	<input type="text"/>				
	IMARS	<input type="text"/>	<input type="text"/>	<input type="text"/>	<input type="text"/>	<input type="text"/>	<input type="text"/>	<input type="text"/>		
	NILU	<input type="text"/>	<input type="text"/>	<input type="text"/>	<input type="text"/>	<input type="text"/>	<input type="text"/>	<input type="text"/>		
	NARNEP	<input type="text"/>	<input type="text"/>	<input type="text"/>	<input type="text"/>	<input type="text"/>	<input type="text"/>	<input type="text"/>		
	MULEHJ	<input type="text"/>	<input type="text"/>	<input type="text"/>	<input type="text"/>	<input type="text"/>	<input type="text"/>	<input type="text"/>		
	AIRV	<input type="text"/>	<input type="text"/>	<input type="text"/>	<input type="text"/>	<input type="text"/>	<input type="text"/>	<input type="text"/>		
	ANYUMA	<input type="text"/>	<input type="text"/>	<input type="text"/>	<input type="text"/>	<input type="text"/>	<input type="text"/>	<input type="text"/>		

CLASS IV

TOPIC: BASVA'S FARM

DATE:

1. What are weeds?

Ans:.....
.....

2. Enlist various steps of farming.

Ans:.....
.....
.....

3. Name and draw any two implements used in farming. Also write for what work they are used?



Name:

Work:

4. Name the state you belong to. Also write the staple crop of your state.

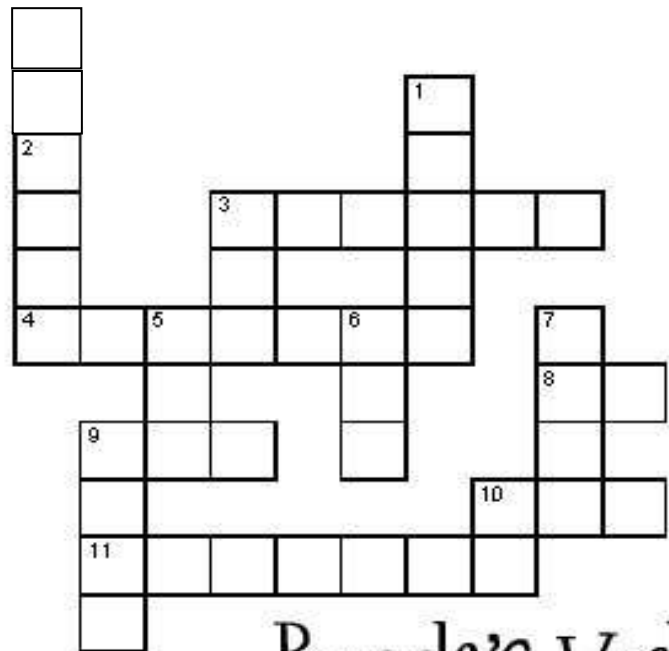
Ans:
.....
.....

CLASS: IV

TOPIC: BASVA'S FARM

DATE:

Farm




Boggle's World

Across

3. What vegetable do rabbits like?
4. What green vegetable is in salads?
8. Farmers get up __ five o'clock.
9. What animal guards the farmer's house?
10. What is two minus one?
11. What animal gives us eggs?

Down

1. What animal do we ride?
2. When do we harvest?
3. What animal catches mice?
5. What is two times one?
6. What animal gives us milk?
7. Where do we keep the animals?
9. What animal lives in the pond?
10. The pencil is __ the book.




CLASS: IV TOPIC: BUSY MONTH

DATE:

Colour and search the birds name in the given puzzle:

Word Search Puzzle **Birds-2**



CLASS: IV

TOPIC: TOO MUCH WATER TOO LITTLE WATER

DATE:

1. Give examples for each of the following:

Three pollutants of water

Three sources of water

Three water animals



2. Name and draw three ways of cleaning water at home:

3. Write two slogans to save water:

4. Name and draw two manmade and two natural sources of water.

Manmade

Natural

5. How does the river water get polluted?

Ans:.....

.....


CLASS: IV

TOPIC: ABDUL IN THE GARDEN

DATE:

Colour the plants shown here. In the box provided under each plant, write to which group it belongs. Select the name of the group from the list given at the bottom.


Coriander



Grape vine



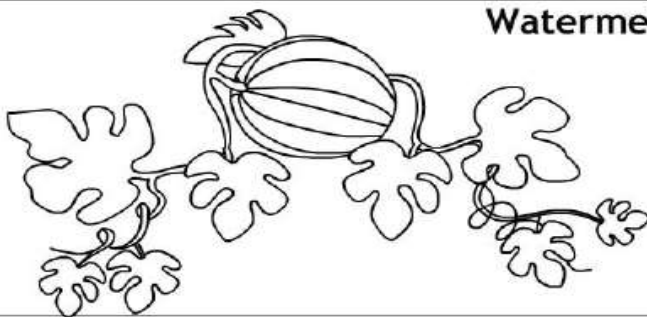
Mango



Rose



Watermelon



Herb

Shrub

Creeper

Climber

Tree

CLASS: IV

TOPIC: FOOD AND FUN

DATE:

1. Write four occasions when you get a chance to eat together.

2. Draw a picture where many people are eating together.



3. Draw any two utensils used for cooking food for a large number of people.

4. Write C for the utensils used for cooking food, S used for serving food.



()



()



()



()

CLASS: IV

TOPIC: THE WORLD IN MY HOME

DATE:

Indian Cities - Word search

R	D	O	P	Z	P	H	B	R	D	E	L	H	I	P
H	Q	S	U	R	A	T	N	J	R	V	O	A	G	I
Y	K	P	N	V	T	H	G	O	I	A	V	H	Q	M
D	B	L	E	S	N	A	D	J	C	D	J	M	D	P
E	X	U	W	B	A	N	G	A	L	O	R	E	F	R
R	O	C	L	R	I	E	U	I	A	D	I	D	Z	I
A	Y	K	L	H	M	L	M	P	B	A	E	A	J	C
B	Q	N	A	G	P	U	R	U	N	R	M	B	A	H
A	C	O	E	A	Y	H	M	R	A	A	P	A	H	I
D	S	W	X	F	K	W	G	B	K	K	T	D	L	N
Q	V	I	S	A	K	H	A	P	A	T	N	A	M	C
T	I	E	N	C	H	E	N	N	A	I	X	C	E	H
N	T	F	U	O	G	D	P	V	W	M	F	C	P	W
B	H	O	P	A	L	U	Y	R	P	M	J	D	Z	A
S	U	B	S	K	R	I	K	O	L	K	A	T	A	D

Find these cities in the word search.

Mumbai Surat Indore

Delhi Lucknow Thane

Bangalore Jaipur Bhopal

Hyderabad Pune Visakhapatnam

Ahmedabad Kanpur Patna

Chennai Nagpur Vadodara

~~Kolkata~~ Pimpri-Chinchwad



Which Indian city is this landmark in?

CLASS: IV

TOPIC: POCHAMPALLI

DATE:



Clothes Word Search



Boots jacket shorts Hat shoes

Coat pajamas socks

Dress pants sweater

Gloves shirt


CLASS: IV TOPIC: HOME AND ABROAD DATE:

Match the following countries with their currencies:

- _____ 1. Australia
- _____ 2. England
- _____ 3. France
- _____ 4. Germany
- _____ 5. Holland
- _____ 6. Italy
- _____ 7. Japan
- _____ 8. Mexico
- _____ 9. United States
- _____ 10. China
- _____ 11. South Korea
- _____ 12. Russia
- _____ 13. Denmark
- _____ 14. Iran
- _____ 15. Iraq



- a. Won
- b. Peso
- c. Dinar
- d. Mark
- e. Dollar
- f. Pound
- g. Krone
- h. Guilder
- i. Schilling
- j. Yuan
- k. Franc
- l. Rial
- m. Yen
- n. Lira
- o. Ruble



Down



CLASS: IV TOPIC: SPICY RIDDLES DATE:

1. Which spice brings water in your eyes and nose?

2. Name the spice used for healing wounds.

3. Garam masala is made by grinding many spices together. Name at least four of them.

4. Fill in the blanks:

a. _____ is used to make the food look yellow.

b. _____ is small and round like a pearl.

c. _____ keeps the stomach healthy.

d. _____ looks like a nail.

5. Identify the pictures of the spices given below. Write their names.









CLASS: IV TOPIC: DEFENCE OFFICER WAHIDA

DATE:

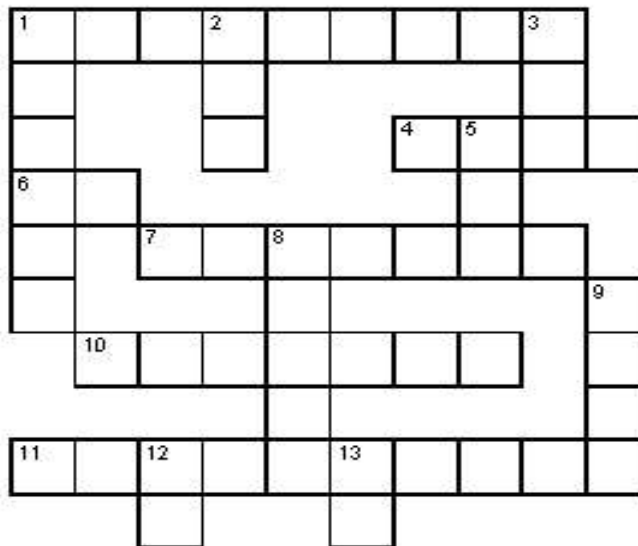
Jobs



Boggle's World

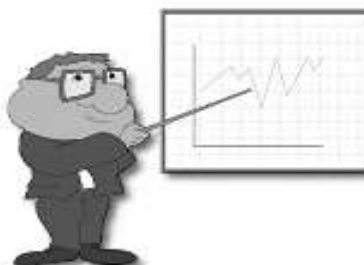
Across

1. A person who leads a country.
4. A person who works at a restaurant.
6. My book is my bag.
7. A person who teaches.
10. A person who fixes teeth.
11. A person who uses a computer.




Down

1. People who catch robbers.
2. What's three times two?
3. What's two times one?
5. What's one times one?
8. A person who is in movies?
9. What's five minus one?
12. My book is my desk?
13. I study school.





The Five Senses Crossword



Across


- 4. You need these to see.
- 6. No light.
- 7. I _____ a flower.
- 10. That _____ like a siren.
- 11. You use these to touch things.
- 13. The organ you use to taste.
- 14. How many eyes do you have?
- 16. Loud sounds.

Down

- 1. That cloud _____ like a fish.
- 2. Another word for touch.
- 3. Not able to see.
- 5. What you hear with.
- 6. Not able to hear.
- 8. I _____ to music.
- 9. Not noisy.
- 12. The organ you use to smell.
- 15. I _____ TV.

I. मन के भोले भाले बादल अ तारीख -----

कविता पूरा करो




कुछ ----- से तोंद फुलाए



कुछ हाथी से ----- उठाए

कुछ ----- से कूबड़ वाले

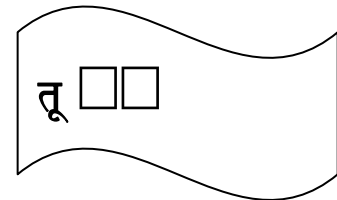
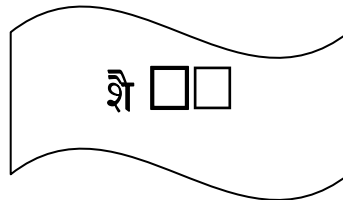
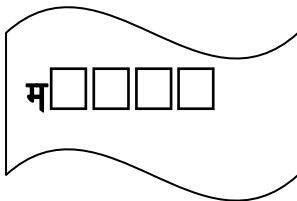
कुछ ----- से पंख लगाए



1 नीचे दिए गए जगहों में रंग बिरंगे कागज़ से बादल बनाकर चिपकाओ।



2 बादल के लिए कौन कौन से शब्दों का इस्तेमाल किया गया है



शिक्षा एवं प्रशिक्षण आंचलिक संस्थान , चंडीगढ़
कक्षा 4 हिन्दी


1 आ अक्षरजाल

तारीख-----

1 नीचे दिए गए शब्दों को अक्षरजाल में खोजो।

झ	ब्व	र	पं	ख
म	ढो	तों	द	आ
त	बा	ल	जो	स
वा	द	थी	क	मा
ले	ल	हा	र	न

क




जोकर ढाथी मतवाले पंख ब्वर

तोंद आसमान ढीलक बिदल देस

ख जानवरों के नाम को खोजो।

घो	डा	सि	या	र
बा	घ	कु	र	ता
हि	बं	भा	ऊ	ट
र	द	लू	गा	य
ण	र	शे	र	नी



घोडा भालू बंदर गाय ऊट सियार

शेरनी हिरण कुत्ता बाघ

2 .जैसा सवाल वैसा जवाब अ

तारीख -----

I.नीचे लिखे शब्दों की जगह और कौन सा शब्द इस्तेमाल हो सकता है खाली जगह में लिखो ।

बुद्धिमान -----

मूर्ख -----

अभिमान -----

विश्वास -----

संसार -----

कोशिश -----

II. नीचे दिए गए प्रश्नों के उत्तर लिखो ।

1 ख्वाजा साहब बीरबल से कितने प्रश्न पूछे

2 बीरबल किसके राज दरबार में मंत्री थे

मुहावरों को वाक्यों में इस्तेमाल करो ।

1 नार्क भौंह सिकोड़ना

2 कलई खुलना

शिक्षा एवं प्रशिक्षण आंचलिक संस्थान , चंडीगढ़
कक्षा 4 हिन्दी

2 आ अक्षरजाल

तारीख-----

1 नीचे दिए गए शब्दों को अक्षरजाल में खोजो।

दु	ना	अ	आ	पु
ण	सू	न	न	पू
पु	ता	का	सु	जा
रा	दु	जू	ता	छ
ना	जु	पू	छ	ना

दुकान

पुराना

सुनना

पूजा

जूता

पूछना

ख

दु	ब	ला	ब	दु
कु	हु	र	हु	बु
र	कु	छ	त	ला
ता	हु	र	म	ना
दु	ब	तु	ब	दु

कुछ. बहुत तुम

कुरता बुलाना दुबला

3 अकिरमिच की गेंद

तारीख-----

I. अनुच्छेद पढ़कर प्रश्नों के उत्तर दो

गर्मी की छुट्टियाँ दोपहर के समय दिनेश घर में बैठा कोई कहानी पढ़ रहा था। तभी पेड़ के पत्तों को हिलाती हुई कोई वस्तु धम से घर के पीछेवाले बगीचे में गिरी। दिनेश आवाज़ से पहचान गया कि वह वस्तु क्या हो सकती है। वह एक दम से उठकर बरामदे की चिक सरका कर बगीचे की ओर भागा। "अरेअरे बेटा कहाँ रहा है बाहर लू चल रही है।" दिनेश की माँ मशीन चलाते चलाते एकदम ज़ोर से बोलीं।



प्र1 दिनेश घर में क्या कर रहा है

प्र2 अर्थ लिखो वृक्ष _____

प्र3 विलोम शब्द आगे _____

प्र4 वचन बदलो कहानी _____

प्र5 पर्यायवाची शब्द लिखो पेड़ _____

II. सही शब्द चुनकर वाक्य पूरे करो

क घर के----- बहुत भीड़ जमा है। बाहर कबहार

ख रवि खेलों के साथ साथ पढ़ाई में भी बहुत----- है। तेज़ क तेज

ग आप----- न करें काम हो जाएगा। धिताकचिंता

घ चोरों ने सारा----- इधर उधर कर दिया। समानकसामान

ड भोंदू की आवाज़ से----- इधर उधर भागने लगी। गएकगाय

आकरिमिच की गेंद

तारीख-----

I. शब्द पहली को दिए गए संकेत की मदद से पूरा करो।

1			6	7
2				
3				
4				8
5				

संकेत

बायें से दायें

- 1 इस शब्द का अर्थ है "बाग"
- 2 इस शब्द का उल्टे शब्द "प्रयत्न"
- 3 "सूर्य" शब्द का पर्यायवाची शब्द
- 4 नीचे का विलोम शब्द
- 5 इस पाठ में आने वाला खेल

ऊपर से नीचे

- 1 बडों के सामने सिर झुकाना
- 2 इस शब्द का अर्थ है "ध्वनी"
- 3 बल्ले का जाडी -----है

II. गेंद और बल्ले का चित्र बनाओ उससे संबंधित दो खेलों के नाम लिख।

1 -----

2 -----

4 आ पापा जब बच्चे थे

तारीख -----

1 निर्देशों को ध्यान से सुनकर नीचे बने कोष्ठक में हर खाने को पूरा कीजिए।

1	2	3
4	5	6



* पहले खाने में अपना नाम लिखिए।

* छठे खाने में एक आइस का नाम लिखिए।



* दूसरे खाने में लिखिए पापा कौन सा जानवर बनाना चाहते थे।

* पा खाने में लिखिए आप किसमें माहिर हैं।

* तीसरे खाने में हवाई जहाज़ का चित्र बनाइए।



* चौथे खाने में लिखिए पापा सबसे पहले क्या बनाना चाहते थे।

ये निर्देश धीरे धीरे दिए जाएंगे हर निर्देश के बाद कार्य करने का थोड़ा समय दिया जाएगा।

4 आ पापा जब बच्चे थे

तारीख -----

I. अनुच्छेद पढ़कर प्रश्नों के उत्तर दो।



पापा जब छोटे थे तभी उनसे अक्सर पूछा जाता था 'बड़े होकर तुम क्या बनना चाहते हो'
पापा के पास जवाब हमेशा तैयार होता। मगर उनका जवाब हर बार अलग अलग होता
था। शुरू शुरू में पापा चौकीदार बनना चाहते थे। उन्हें यह सोचना बहुत अच्छा लगता था कि
जब सारा शहर सोता है तब चौकीदार जागता है।

1 पापा अक्सर क्या सोचता था

2 शुरू में पापा क्या बनना चाहता था

3 उन्हें क्या सोचना अच्छा लगता था

II. किसी दो मददगारों के चित्र बनाकर रंग भरो।



5 आ दोस्त की पोशाक

तारीख -----

I. कहानी के बारे में कोई पाँच प्रश्न बनाकर नीचे दी गई जगह में लिखो।

और उनके उत्तर लिखो।

1 _____

2 _____

3 _____

4 _____

5 _____



II. उपर्युक्त सभी किस मौसम के पोशाक और खाना हैं?

5 आँसू की पोशाक

तारीख -----

1 लिंग पहचानो

क लडका पुल्लिंग है तो लडकी ----- है।

ख बिल्ली स्त्रिलिंग है तो पुल्लिंग----- है।

2 उचित वचन से वाक्य बनाओ।

क दो साल का पेड़ पर चढते देखकर मैदान के सारे -----
चिल्लाने लगे। बच्चे क्र बच्चा

ख हमारे एक हाथ में पाँच ----- है मगर इशारा दिखाने के लिए एक
का उपयोग होता है।

उखली क्र उखलिया

3 संज्ञा के नीचे रेखा खींचो।

क शेर जंगल में रहता है।

4 विशेषण के नीचे रेखा खींचो।

क क्रयारियों में रंग बिरंगे फूल खिले हैं।
ख लाल मोटार सड़क पर है।

5 नुक्ते वाले शब्द के नीचे रेखा खींचो।

क बडे उत्साह से बच्चे बाज़ार गए।

6 सफेद शब्द का विलोम शब्द पर रेखा खींचो।।

क मेरी गाय काले रंग की है।

6.नाव बनाओ नाव बनाओ

तारीख -----

शिक्षा एवं प्रशिक्षण आंचलिक संस्थान , चंडीगढ़
कक्षा 4 हिन्दी

1 बरसात के मौसम पर पहले भी कई कविता या लोकगीत सुने होंगे। उसे नीचे दी गई जगह में लिखो।

2 पानी सचमुच खूब पड़ेगा।

सचमुच का इस्तेमाल करते हुए तुम भी दो वाक्य बनाओ।

1-----
2-----

3 रंग बिरंगे कागज़ से नाव का चित्र बनाओ और नीचे दीए गए जगह में चिपकाओ।

7 अक्षरों का दान का हिसाब

तारीख _____

1. नीचे दिए गए शब्दों का प्रयोग करते हुए दो वाक्य बनाओ।

शिक्षा एवं प्रशिक्षण आंचलिक संस्थान , चंडीगढ़
कक्षा 4 हिन्दी

जल

1 -----

2 -----

मन

1 -----

2 -----

मगर

1 -----

2 -----

II. नीचे चार दिशाओं के नाम लिखे हैं। तुम्हारे घर और स्कूल के आसपास इन दिशाओं में क्या क्या हैं? तालिका भरो।

दिशा	घर के पास	स्कूल के पास
पूर्व		
पश्चिम		
उत्तर		
दक्षिण		

शिक्षा एवं प्रशिक्षण आंचलिक संस्थान , चंडीगढ़
कक्षा 4 हिन्दी

7 आ दान का हिसाब

तारीख-----

सही कथन पर ठीक और गलत कथन पर काटे का चिन्ह लगाइए।

1 अकाल के समय राजा सभी को दान देना चाहता था।

2 राजसभा में एक से एक नामी लोग आते रहते थे।

3 दान के समय उनकी मुट्ठी बंद हो जाती थी।

4 राजकोष खाली हो गया।

5 राज बहुत कंजूस था।

देश और उनकी मुद्राओं को लिखो।

देश	मुद्रा	देश	मुद्रा
भारत			
अमेरिका			
इंग्लैंड			
फ्रान्स			

नीचे लिखि गिनतियों को हिन्दी में लिखो।

क 65

ख 100

ग 78

घ 1000

ड 89

8. पहेलियाँ

तारीख-----

क 1. लंबी पतली छरहरी
हूँ सुगंध की खान
शुरू 'अगर' से होती हूँ
भाद में 'बत्ती' जान।

2. तीर्थराज में बड़ा महान
नगर पुलों का मुझको जान
द्वार हरि का मैं कहलाता
नाम मेरा क्या तुम्हें है आता

3. जनता का सेवक कहलाता
सुख दुःख का संदेश मैं लाता
गली मोहल्ले रोज़ मैं जाता
प्यार सभी का हूँ मैं पाता।

4. भूमि की मैं उपज़ बढ़ाऊँ
बिना आँखि के ही चल पाऊँ
गरमी में न आऊँ ज़र
भूमि तो है मेरा घर।

5. लंबा तन और बदन है गोल
मीठे रहते मेरे बोल
तन पर मेरे होते छेद
भाषा का मैं करूँ भेद।

ख राज किसी को भी दान क्यों नहीं देना चाहता था

ग राजसभा में सज्जन और विद्वान लोग क्यों नहीं जाते थे

8 आ कौन

तारीख -----

आकलाप 1: कविता सुनकर प्रश्नों के उत्तर दीजिए।

वह देखो आता चूहा

लंबी पूछिहिलाता चूहा

आखि को चमकाता चूहा

मक्खन रोटी खाता चूहा

मूछि में मुस्कुराता चूहा

बिल्ली से डर जाता चूहा।



1 यह कविता किसके बारे में है

2 चूहे की आखि कैसी है

3 चूहा मूछि में क्या कर रहा है

आकलाप 2: चूहा के बारे में एक कविता लिखो और सभी के साथ गाना गाओ।

8. कौन

तारीख -----

I. कविता “कौन” के आधार पर पंक्तियाँ पूरा करोः

दोना खाली -----

कौन ले गया -----

दो ----- तस्वीर हो गई

किसने ----- बहाई

II. नीचे दिए गए शब्दों को तुकवाले शब्दों से मिलान करोः

1 मिठाई कोने

2 पन्ने जाता

3 सोने बहाई

4 धाता छन्ने


III. ऐसे चार जीवों के नाम बताओ जो चीजें कुतरकर खाते हैंः

1 ----- 3 -----


2 ----- 4 -----

IV. नीचे दिए गए शब्दों के बारे में चित्र चिपकाओ ।


1 तस्वीर



2 अनाज़



3 रस्सी



8. कौन

तारीख -----

अ. कुतर कर खाने वाले पाँच जानवरों के नाम लिखो।

1 ----- 2 ----- 3 -----

ब. बिना बुलाए घर में रहने वाले तीन जीवों के नाम लिखो

1 ----- 2 ----- 3 -----



स. बहुविकल्पीय प्रश्न

प्रश्न1 पैरो में क्या पहना जाता है

(अ) कुर्ता (ब) जूता (स) टोपी

प्रश्न2 बटन कौन कुतर जाता है

(अ) घोड़ा (ब) बिल्ली (स) चूहा

प्रश्न3 कलम से लिखने में सहायक होता है

(अ) स्याही (ब) तसवीर (स) मिठाई

प्रश्न4 मिठाई कौन उठा ले गया

अ. चूहा ब. बिल्ली स. भालू

प्रश्न5 चूहा रात भर क्या करता है अ. झड़बड़ ब. गड़बड़ स. बड़बड़

9 अ स्वतंत्रता की ओर

तारीख -----

I. कोई पाँच स्वतंत्रता सेनानियों के नाम लिखो।

1 -----

2 -----


3 -----

4 -----

5 -----



II. गांधीजी के चित्र बनाओ।



III. नीचे लिखी चीजों की विशेषता बताने वाले शब्द सोचकर लिखो।

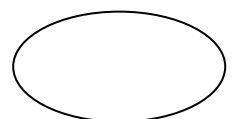
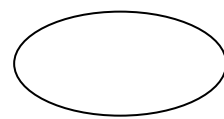
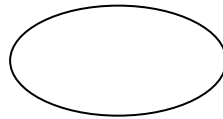
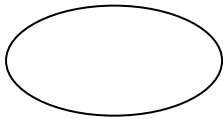
ऊँचा सफेद काला मीठा बड़ा लाल तिरंग नीला

हलवा

कुरता

पेड़

मिर्च

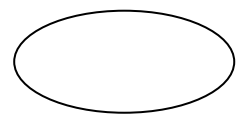
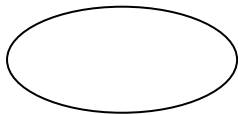


गाय

झंड़ा

भाई

बादल



9 आ स्वतंत्रता की ओर

तारीख -----

I. सही उत्तर ढूँढो

स्वतंत्रता का अर्थ

आज़ादी गुलामी

आश्रम यात्रा

ख यह भोजन का स्वाद बढ़ाता है।

साबुन नमक

मोंबती कागज़

ग चूल्हे में कौन सा ईंधन का इस्तेमाल करते हैं।

मिट्टी का तेल लकड़ी

गैस पेट्रोल

घ गांधीजी का मार्ग

खाना और जीना करो या मरो

जागो और बढो सत्य और अहिंसा

ङ दांडी तक गांधीजी कैसे गए

मोटार गाडी बैल गाडी

रेल गाडी पैदल

9. स्वतंत्रता की ओर तारीख-----

I. नेताओं का नाम पहचानो

क. ज. ल. ने -----

स्वतंत्र भारत के पहले प्रधान मंत्री।

ख. म. त्वा. धी. -----

देश पिता के नाम से प्रसिद्ध हैं।

ग. डा. धा. ण. -----

इनका जन्म तमिलनाडु के तिरुत्तणि में 4 सितंबर को हुआ जिसे हम अध्यापक दिवस मनाते हैं।

घ. ल. हा. स्त्री. -----

आप का नारा था जय जवान-जय किसान आप भारत के दूसरे प्रधान मंत्री थे।

ड. डा. म. व. अं. ल्क. -----

उर्ध्व नीच भेद भाव का खण्डन करते थे। भारतीय कानून को बनाने में इनका प्रमुख भाग था।

II. नीचे दिए गए चित्रों में गांधीजी क्या कर रहे हैं



9. स्वतंत्रता की ओर

तारीख-----

1. नीचे दिए गए शब्दों के विलोम शब्द चुनकर लिखो।

कठोर श्रृणा पराजय मृत्यु अहित अज्ञान असत्य हिंसा

कज्ञान अज्ञान खविजय-----

गसत्य----- घहित-----

डअहिम्सा----- चजीवन-----




छप्रेम----- जमृदु-----

2. दूध देने वाले पशुओं के नाम लिखो एवं चित्र चिपकाओ।

क-----

ख-----

ग-----



10 अथप रोटी थप दाल


तारीख -----

1 कक्षा में आटे से रोटी बनाकर विधि लिखो।

2 नीचे दिए गए चीजों के स्वाद लिखो।

जलेबी	→	
करेला	→	
मिर्च	→	
इमली	→	
नमक	→	
नींबू	→	

3 तुम्हारे मन पसंद खाने के बारे में लिखो और उसका चित्र बनाओ और रंग भरो।



10 आ थप्प रोटी थप्प दाल

तारीख -----

क रोटी का खेल खेलने के लिए घर से चीजें कौन लाया था।

मुन्नी नीना

तरला सरला

ख इससे हम मक्खन बनाते है।

गेहूँ अंडा

दूध मछली

ग पकाई चीजें बच्चों ने इसमें रखी।

चरखा छीकें

मटका गिलास

घ रोटी और दाल खाने की चीजें है तो पानी और साबुन

सवारी करने का सफाई करने का

खाने पकने का पढने का

ज इसने रोटी छीके से चुरा ली।

कुत्ता मुर्गी


बकरी बिल्ली

10 थप्प रोटी थप्प दाल

तारीख -----

क रोटिया गरम गरम और नरम नरम थीं ।

तुम कौन कौन सी चीजें गरम गरम खाते हो और कौन सी ठंडी नीचे दी गई सूची में से
छांटकर लिखो ।



दूध लस्सी हलवा पराटा आईस म

शरबत जूस रसमलाई समोसा चाय

गरम गरम -----

ठंडा = -----

ख आप अपने मा रसोईघर में क्या काम करते हैं उनके बारे में लिखो ।

11 अ पढ़क्कू की सूझ

तारीख -----

I. इन्हें क्या कहेंगे।

1. बहुत अधिक पढने वाला- -----
2. बहुत अधिक लडने वाला- -----
3. बहुत अधिक खाने वाला- -----
4. बहुत बातें करने वाला- -----
5. बहुत अधिक खर्च करने वाला- -----

III. पढ़क्कू की सूझ कविता को कहानी के रूप में लिखिए।

IV. मेहनत और कोशिश से जुड़े दो मुहावरे लिखो और वाक्य में प्रयोग करो।

1-----

2-----

11 आ पढ़क्कू की सूझ

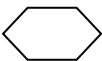


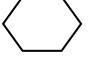

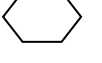



तारीख -----

1 क नीचे दिए गए शब्दों के अर्थ अक्षरजाल में खोजो।

ढब भेद गजब मतिख कुल

त	र्क	शा	स्त्र	म्र
रा	ज	त	क	ब
जू	स	री	मा	धो
रा	ज़	का	ल	खा
धो	क	म	ल	ड़

2 इनमें से कौन सा तेल खाने के काम नहीं आता सही उत्तर पर का निशान लगाइए।

- | | | | |
|-----------------|---|------------------|--|
| क नारियल का तेल |  | च वमेली का तेल |  |
| ख सरसों का तेल |  | छ मिट्टी का तेल |  |
| ग तिल का तेल |  | ज वनस्पति का तेल |  |
| घ जैतून का तेल |  | झ आघि का तेल |  |
| ड मूफली तेल |  | ज अरण्डी का तेल |  |

12 अ सुनीता की पहिया कुर्सी

तारीख-----

I. छुट्टी मागने के लिए अपने प्रधान अध्यापक को एक प्रार्थना-पत्र लिखो।

II. सुनीता की पहिया कुर्सी के बारे में तीन वाक्य लिखो।



क-----

ख-----

ग-----

12 आ सुनीता की पहिया कुर्सी

तारीख -----

I. नीचे दिए गए शब्दों का दो भिन्न अर्थों में प्रयोग करते हुए वाक्य बनाइए।

क अंक -----

अंक -----

ख पर -----

पर -----

ग आम -----

आम -----

घ और -----

और -----

ड साल -----

साल -----

II. नीचे दिए गए जवाबों के प्रश्न आपके विचारों से बनाइए।

क सुनीता चलनें फिरने के लिए पहिया कुर्सी की मदद लेती है।

ख आठ बजे तक सुनीता नर्हा धोकर तैयार हो गई।

ग अमित ने सुनीता की मदद की।

12 सुनीता की पहिया कुर्सी

तारीख -----

I वाक्य पूरा करो।

- 1 सुनीता पहली बार ----- जाने वाली थी।
- 2 सुनीता ने अपने सभी काम ----- से निपटा लिए।
- 3 सुनीता अपनी ----- पर बैठकर बाज़ार की ओर चल दी।
- 4 रास्ते में कई लोग सुनीता को देखकर ----- रहे थे।
- 5 सुनीता को दुकानदार का ----- बिल्कुल अच्छा नहीं लगा।

II रेखांकित संज्ञा शब्दों के लिए सर्वनाम लिखो और वाक्य भी बनाओ।

1 चंदु ने नंदु से कहा चंदु जिंदु के लिए पानी लाओ।

2 रवि रवि कि माँ के साथ बाज़ार गया।

3 चम्पक बच्चों की पत्रिका है चम्पक में बच्चों के लिए कहानियाँ हैं।

13 अ. हुदहुद

तारीख -----

I. रेखांकित शब्दों को उनके विलोम शब्दों में बदलकर लिखो :

1 हुदहुद एक पक्षी है।

2 उसके पंख होते हैं।

3 दुम का हिस्सा सफेद होता है।

4 वह अपने घोंसले को नहीं रखता।

5 इसकी बोली में नहीं है।

II. खाली स्थान भरो

1 हुदहुद एक _____ और _____ पक्षी है।

2 इसके सिर पर एक _____ होती है।

3 इसकी चोंच _____ और _____ होती है।

4 हुदहुद को अंग्रेजी में _____ कहते हैं।

5 मादा हुदहुद _____ से _____ अंडे देती है।


III. तुम्हारे आसपास में दिखाई देने वाले चार पक्षियों के नाम लिखो एवं उसके चित्र बनाओ।

1 -----

2 -----

3 -----

4 -----



13 आ हुदहुद

तारीख -----

I. नीचे दिए गए शब्दों को अक्षरजाल में पक्षियों के नाम खोजो।

मो	र	गौ	रै	या	हु	1 -----
बु	तो	ता	मु	गी	ड	2 -----
ल	ब	ची	छा	को	हु	3 -----
बु	त्त	ल	मी	य	द	4 -----
ल	ख	कौ	आ	ल	ग	5 -----
क	बू	त	र	क	र	6 -----
						7 -----
						8 -----

II. बताओ कि ऐसे रंग किन किन चीजों के होते हैं।

9 -----

गहरा	
फीका	
भड़कीला	
सुनहरा	
नीला	

10 -----

14 अ मुफ्त ही मुफ्त

तारीख -----

I. नीचे दिए गए चित्र को देखकर बताओ इससे क्या क्या लाभ होते हैं।



II. कहानी को पढ़कर तुम भीखूभाई के बारे में काफी कुछ जान गए होंगे। भीखूभाई के बारे में कुछ बातें बताओ।

क उन्हें खाने पीने का शौक था।

ख -----

ग -----

घ -----

ड -----



इसका नाम क्या है -----

14 आ मुफ्त ही मुफ्त

तारीख -----

I. वृक्षों के भागों के नाम लिखो।

क

ख

ग

घ



II. दिए गए अनुच्छेद से संज्ञा एवं विशेषण शब्द छाँटकर लिखो।

एक दिन कंजूस भीखूभाई को ताज़ा नारियल खाने का मन हुआ। उसने अपनी पत्नी लाभूबेन से पूछा। उसकी पत्नी ने उसे बाज़ार जाने के लिए कहा। बाज़ार जाते-जाते वह थक गया। वह बूढ़े बरगद के नीचे हरी घास पर बैठ गया और सफ़ेद रूमाल से अपना चेहरा पोंछा। बाज़ार बहुत बड़ा था।

विशेषण

संज्ञा

.....

.....

.....

.....

.....

.....

प्र: भीखूभाई को नारियल मुफ्त से क्यों मिला

14 मुफ्त ही मुफ्त

तारीख -----

कियाकलाप 1

I. निम्न सब्जियों का अपनी भाषा में लिखो।

- 1 आलू
- 2 बंदगोभी
- 3 टमाटर
- 4 प्याज़
- 5 करेला

सब्जियों का चित्र बनाओ


II. सवारी वाले जंतुओं का नाम एवं चित्र एकत्र करो एवं चिपकाओ।

1 -----

2 -----

3 -----

III. रंगीन कागज़ से एक वृक्ष बनाओ एवं इसके उपयोग के बारे में लिखो।



Building with Bricks

1. Fill in the blanks.

- a. A brick has _____ edges.
- b. A square has _____ sides.
- c. A rectangle has _____ sides.
- d. A soap has _____ faces.
- e. A cuboidal box has _____ corners.
- f. The number of faces in a brick is equal to _____.
- g. A dice has _____ faces.
- h. A brick is a _____ dimensional object.
- i. A triangle has _____ sides.
- j. A triangle has _____ corners.

II. Calculate mentally and write the answer.

- 1. If a brick cost Re 1, then 500 bricks will cost _____.
- 2. If the cost of a brick is Rs 2, then cost of 1000 bricks is Rs _____
- 3. If the cost of 1 brick is Rs 5, then cost of 2000 bricks is Rs _____
- 4. If the cost of 1 brick is Rs 3, then cost of 4000 bricks is Rs _____
- 5. If the cost of 1000 bricks is Rs 3000 then the cost of 1 brick is Rs _____
- 6. If the cost of 2000 bricks is Rs 8000, then the cost of 1 brick is Rs _____
- 7. If the cost of 200 bricks is Rs 600, then the cost of 1 brick is Rs _____

2. COMPLETE THE TABLE

Sl. No	Number of bricks	Cost of bricks	Number of bricks	Cost of bricks
1	1,000	Rs.6,000	500	Rs. _____
2	2,000	Rs.18,000	1,000	Rs. _____
3	6,000	Rs.24,000	3,000	Rs. _____

Make an arch using bricks.

Draw two wall patterns using bricks.

Make any two floor patterns using colour paper and stick it below.

ZONAL INSTITUTE OF EDUCATION & TRAINING, CHANDIGARH

Class: IV

Sub: MATHS

Long and Short

1. Which is a better unit to measure these? (cm, m or km)

- a. Length of a pin _____ b. Height of a house _____
c. Distance the scooter travels _____ d. Length of a park _____
e. Length of a pen _____ f. Height of your pet _____
g. Length of a 500 rupees note _____ h. Length of your car _____
i. Distance from Bangalore to Rajasthan _____
j. Thickness of your lunch box _____ k. Height of Qutub Minar _____
l. Distance from school to your house _____

2. Construct line segments of the following length

- a. 4cm
b. 2cm

3. Find the measures

- a. 20cm less than 8m 40cm _____
b. 80cm more than 4m 10cm _____
e. 7km more than 8km 300m _____
f. 600m less than 7km 950m _____
g. 9km 200m more than 5km 500m _____

Complete the table and answer the questions below

Sl.No	Name of the plant	Last month's height	This month's height	Cms-grown
1	TULSI	5cm	8cm	
2	MANGO	10cm	13cm	
3	BAMBOO	20cm	38cm	
4	ROSE	32cm	32cm	

- a. The plant which has grown maximum is _____
b. The plant which has grown minimum is _____,
c. The plant which has not grown _____
d. The plant which has grown by 18cm is _____
e. This month _____ plant is taller than _____,

A Trip to Bhopal

1. Make any six, five- digit numerals using the given digits of numbers.

Note: digits can be repeated only once.

6,8,5,4

a. _____ b. _____ c. _____

d. _____ e. _____ f. _____

II. Use the digits to make greatest and the smallest number

Note: digits should not be repeated

DIGITS	GREATEST NUMBER	SMALLEST NUMBER
5,9,0,6,7		
8,3,7,2		
0,9,1		
7,5,1,2,3		

Fill in the blanks

1. Smallest and the greatest 2-digit number _____, _____

2. Smallest and the greatest 5-digit number _____, _____

3. Smallest and the greatest 3-digit number _____, _____

4. Smallest and the greatest 4-digit number _____, _____

FILL IN THE BLANKS :

a. _____ + 64979 = 64979

b. 4256 + _____ = 4256

c. 7864 X _____ = 0

d. 6753 - _____ = 0

e. $7 \div 7 =$ _____

f. $0 + 9537 =$ _____

g. $865 \times 1 =$ _____

h. $2365 + 5879 =$ _____ + 2365

i. $6549 \div$ _____ = 6549

j. $0 \div 5649 =$ _____

Find the product without multiplying

a. $6250 \times 100 =$ _____



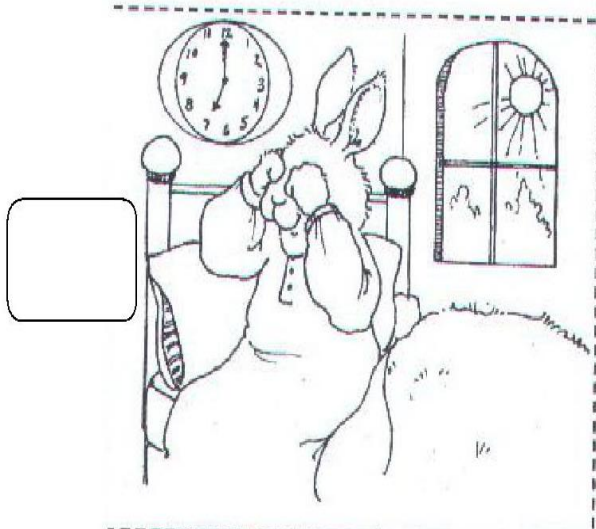



b. $958 \times 1000 =$ _____

c. $645978 \times 10 =$ _____

d. $78 \times 1000 =$ _____

Sequence the story according to logic and time using alphabets or numbers

ALICE IN THE WONDERLAND

ZONAL INSTITUTE OF EDUCATION & TRAINING, CHANDIGARH

Class: IV

Sub: MATHS

Tick Tick Tick

1. Write the following in short form

- a) 3rd July 1975 _____ b) 25th November 2003 _____
c) 1st January 2007 _____ d) 13th march 2001 _____
e) Your date of birth _____ f) Independence day _____
g) Gandhi jayanthi _____ (write for current year)
h) New year _____ (write for current year)
i) Republic day _____ (write for current year)
j) Christmas _____ (write for current year)

2. Express the following in am or pm

- a. 12 noon _____ b. 12 midnight _____
c. 4:45 in the evening _____ d. 8'o clock in the morning _____

Calculate the number of days

- a. Between September 12 and September 23 _____
b. Between January 29 and February 5 _____
c. Between March 21 and April 1 _____
d. Between April 3 and April 10 _____
e. Between December 16 and December 28 _____

Change the following to 24 hour clock

- a. 2:30 afternoon= _____ b. 5:15 morning= _____
c. 6:45 evening= _____ d. 8:20 night= _____
e. 11:10 night= _____ f. 40 night= _____
g. 6:45 morning= _____ h. 12:00 midnight= _____

Rearrange these events in order and draw the time line and answer below

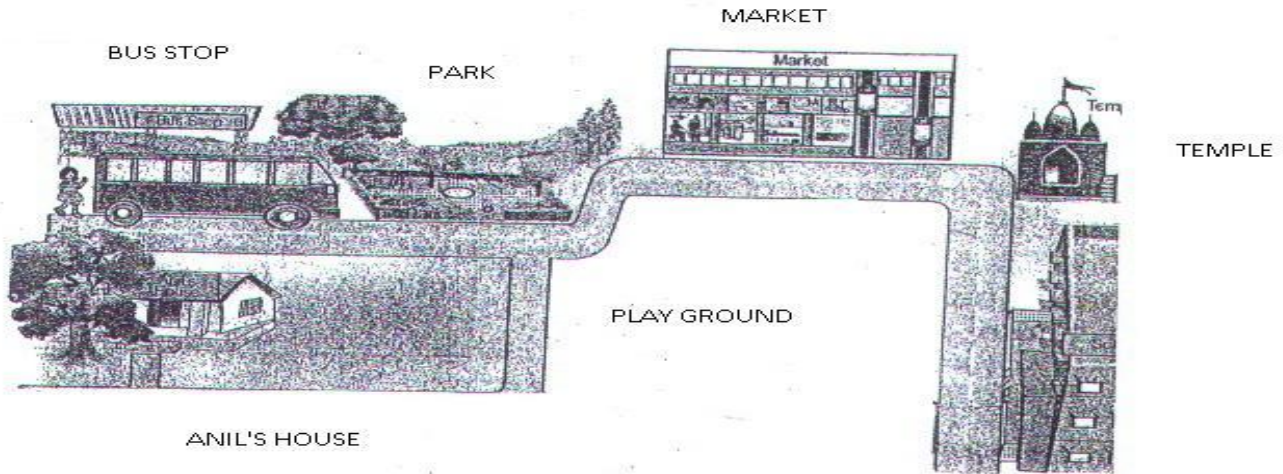
- 5.3.02 Stood up 7.6.02 Walked 16.7.01 First tooth
12.7.01 Born 15.2.02 Crawled 20.11.01 Sat up

How old was Seema?

- a) When she walked? _____ b) when she sat up? _____
c) When she crawled? _____

The Way the World Looks

Study the map carefully and answer the following questions





Tick () the correct answer:

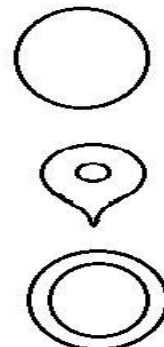
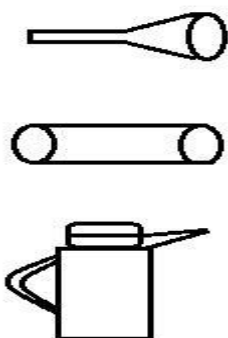
1. What is closer to the temple? a) School b) Anil's house
2. What is closer to Anil's house? a) Bus stop b) Market
3. Which is closer to the park? a) Bus stop b) park

Draw the following

- a) Side view of a bus
- b) Top view of the teacher's table
- c) Front view of a car



Draw lines to match the side view with the top view of the same object



The Junk Seller

1. Find the value of the following notes:

- a. 5 notes of Rs 100 = _____ b. 12 notes of Rs 5 = _____
 c. 10 notes of Rs 10 = _____ d. 15 notes of Rs 50 = _____
 e. 6 notes of Rs 1000 = _____ f. 8 notes of Rs 20 = _____
 g. 14 notes of Rs 2 = _____

2. How many?

- a. 50 rupees notes are needed to make Rs 200 _____,
 b. 20 rupees and 10 rupees notes are needed to make Rs 270 _____ ,
 c. 1000 rupees notes are needed to make Rs 7000 _____ ,

3) If a person earns Rs 73 a day, find how much he earns in:

- a. 7 days = _____ b. 6 weeks = _____
 c. 89 days = _____ d. 17 weeks = _____

1. Calculate the interest paid:

SL.NO	AMOUNT	AMOUNT WITH INTEREST	INTEREST
1	Rs 600	Rs 680	
2	Rs 5000	Rs 5500	
3	Rs 956	Rs 1500	
4	Rs 678	Rs 1000	
5	Rs 723	Rs 850	

2. Complete the Table:

SL. NO	ITEM	BOUGHT FOR	SOLD FOR	PROFIT OR LOSS	BY HOW MUCH?
1	1 Kg Peas	Rs 32	Rs 40		
2	2 Kg Apples	Rs 108	Rs 119		
3	10 Pencils	Rs 36	Rs 43		
4	30 Note books	Rs 125	Rs 188		
5	1 Radio	Rs 300	Rs 125		
6	1 TV	Rs 10,000	Rs 9999		
7	Table	Rs 325	Rs 650		

Carts and Wheels

Fill in the blanks (Hint: Circumference, diameter, radius, circle)

- a. A _____ is a simple closed curve.
- b. _____ is the line that runs between the circle and its centre.
- c. _____ divides the circle into two equal halves.
- d. _____ is the distance around the circle; it is the length of the circle.

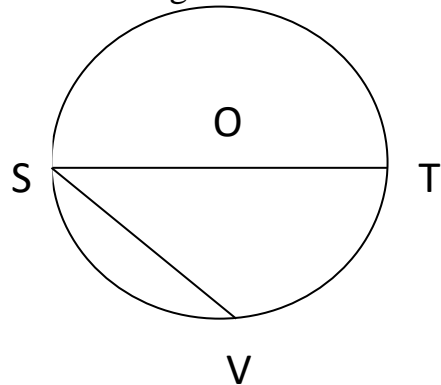
Name the parts of the circle given below:

O _____

SV _____

OS _____

OT _____



Fill in the column:

RADIUS	DIAMETER
4 cm	
	12 cm
6cm	
	8 cm
10 cm	
	2 cm
7 cm	

[Hint: Diameter = 2 X Radius Radius = diameter / 2]

Using compass, draw circles of the given radius.

a) 3 cm

b) 4 cm

ACTIVITIES

I. Observe the surroundings and list any three articles which can be used to draw a circle.

II. Use a compass to make 2 designs in 2 separate circles.

III. Draw a circle with a radius 6 cm. With the same centre draw another circle of radius 4 cm. Within this circle, draw a third circle of radius 2 cm within this circle.

Halves and Quarters

Fill in the numerals in the boxes:

e.g In $\frac{4}{6}$ is the numerator and is the denominator

a) In $\frac{3}{8}$ is the numerator and is the denominator

b) In $\frac{6}{9}$ is the numerator and is the denominator

c) In $\frac{7}{8}$ is the numerator and is the denominator

d) In $\frac{8}{9}$ is the numerator and is the denominator

e) In $\frac{3}{5}$ is the numerator and is the denominator

f) In $\frac{2}{6}$ is the numerator and is the denominator

2. Write the fractional numbers ,whose Numerator and Denominators are:

N= 4 ; D = 6 =

N=7 ; D = 5 =

N= 6 , D= 8 =

N= 8 ; D= 9 =

Fill in the blanks:

(a) $\frac{1}{2}$ of a litre = _____ ml

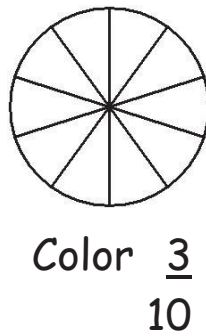
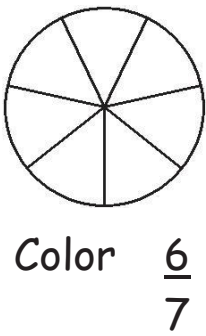
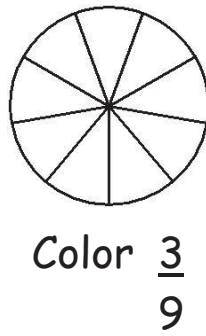
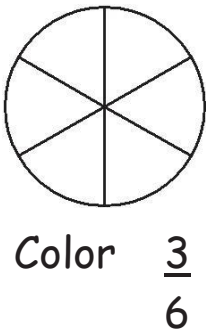
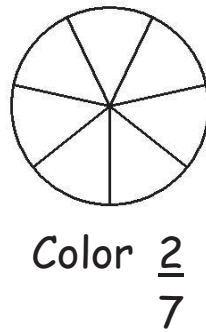
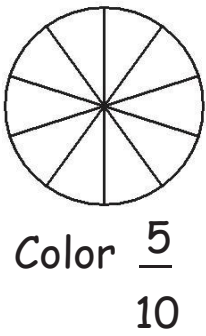
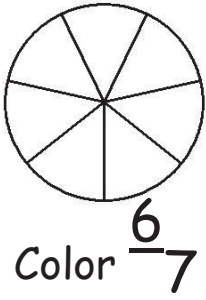
(b) $\frac{3}{4}$ of kilo gram = _____ gm

(c) $\frac{1}{4}$ of a litre= _____ ml

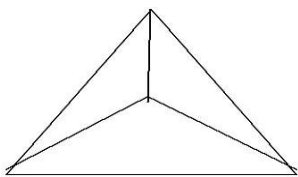
(d) $\frac{3}{4}$ of litre = _____ ml

Show the following fraction in one whole and in collection:

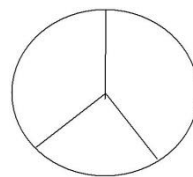
Fraction	whole	Collection
$\frac{1}{4}$		
$\frac{2}{4}$		
$\frac{3}{4}$		
$\frac{3}{5}$		
$\frac{2}{8}$		



Shade the given figures according to the fractions:



$1 / 3$



$2 / 3$

Patterns and Designs

Observe the number pattern and extend:

- a) 7353, 7358, 7363, _____, _____, _____
- b) 3726, 3763, 3746, _____, _____, _____
- c) 6250, 6300, 6350, _____, _____, _____
- d) 4510, 4514, 4518, _____, _____, _____
- e) 2345, 2346, 2347, _____, _____, _____
- f) 9323, 9322, 9321, _____, _____, _____
- g) 5214, 5224, 5234, _____, _____, _____
- h) 1946, 1951, 1956, _____, _____, _____

Observe the pattern and extend:

AB CD EF GH

AB BC CD DE

Tables and Shares

Calculate

$2 \times 3 \times 2 =$

$2 \times 4 \times 2 =$

$2 \times 2 \times 3 =$

$2 \times 3 \times 4 =$

$3 \times 3 \times 2 =$

$5 \times 3 \times 2 =$

$2 \times 2 \times 6 =$

$2 \times 3 \times 4 =$

$2 \times 6 \times 3 =$

$4 \times 3 \times 3 =$

$2 \times 9 \times 0 =$

$3 \times 3 \times 3 =$

$1 \times 2 \times 3 =$

$4 \times 3 \times 4 =$

$2 \times 3 \times 5 =$

$1 \times 3 \times 9 =$

$5 \times 4 \times 4 =$

$2 \times 3 \times 6 =$

$2 \times 9 \times 3 =$

$2 \times 5 \times 5 =$

$2 \times 3 \times 8 =$

$2 \times 1 \times 7 =$

$4 \times 3 \times 7 =$

$2 \times 3 \times 6 =$

$9 \times 3 \times 0 =$

$4 \times 3 \times 3 =$



Arrange in three different ways in rows and columns:

a) 15 boys			
b) 28 balls			

Write these in repeated addition form

a) $10 \times 1 =$

b) $3 \times 2 =$

c) $6 \times 5 =$

d) $2 \times 3 =$

Find the product of

a) $12 \times 0 =$

b) $18 \times 50 =$

c) $17 \times 1 =$

d) $90 \times 10 =$

Divide

a) $28 \div 4 =$

b) $14 \div 2 =$

c) $36 \div 9 =$

d) $25 \div 5 =$

e) $100 \div 10 =$

f) $27 \div 3 =$

g) $44 \div 4 =$

h) $54 \div 6 =$

i) $64 \div 8 =$

Anu wants change for Rs.100

How many notes will she get if she wants change?

a) All 50 rupee notes? _____

b) All 10 rupee notes ? _____

c) All 20 rupee notes? _____

d) All 5 rupee notes ? _____

Divide and find the quotient:

a) $65 \div 5 =$

b) $108 \div 9 =$

c) $428 \div 2 =$

How Heavy? How Light?

Name 5 things that we usually buy

in grams	in kilograms
1)	
2)	
3)	
4)	
5)	

Fill in the Blanks

a. One kilogram = _____ grams. b. Half a kilogram = _____ grams.

c. The heavier one among 100g and 10 kg is _____

d. 1 kg = 5 x _____ grams. e. 5 kg = _____ grams.

f. 2 kg = _____ grams. g. 3 kg = _____ grams.

h. 7 kg = _____ grams. i. 9 kg = _____ grams.

Fill in kilograms or grams:

a) My friend weighs 25 _____ b) A sack of wheat weighs 50 _____

c) A packet of potato chips weighs 50 _____ d) A sack of rice weighs 30 _____

e) A tube of fevistick weighs 100 _____

You are given the following weights. Using these weights you have to weigh out different amount of certain items. Which weights will you use?

Amount to be Weighed	1 kg	500g	200g	100g	50g
1 kg 750 g					
2 kg					
900g					
3 kg 300 g					
150g					
1 kg 50 g					


Fields and Fences

Find the perimeter of the following, squares, whose sides measuring


a) 5 cm



b. 7 cm



c) 10 m



Find the perimeter of rectangle whose length and breadth are given.

(i) Length = 7 cm

breadth = 5 cm



(ii) Length = 12 cm

breadth = 8 cm



(iii) Length = 15 cm

breadth = 10 cm



2. Answer the following:

1. Find the boundary around a square field of 13m and 65 cm.

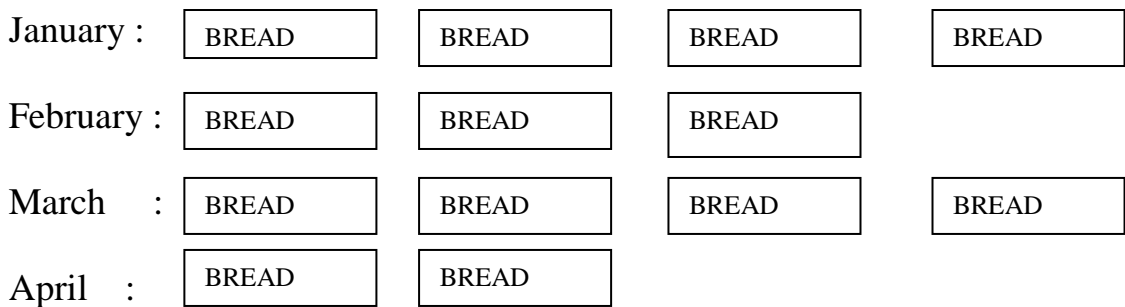
2. Find the distance around a rectangular table of length 50 cm and width of 20m.

Smart Charts

Number of balls sold by a shop on 6 days of a week. : Monday 17, Tuesday 12, Wednesday 20, Thursday 15, Friday 5 and Saturday 11.

- 1) How many balls were sold on all the 6 days? _____
- 2) On which day the balls were sold more? _____
- 3) On which day less number of balls were sold? _____
- 4) How many balls were sold on Saturday than Friday ? _____
- 5) Number of balls sold on Thursday is thrice the number sold on Friday True/False _____

The Number of loaves of bread baked in a bakery in four different Months of a year are given below. Each picture represents 100 loaves.



Answer the following questions:

- 1) Name the months in which the number of loaves baked was the same?
- 2) How many loaves were baked in January?
- 3) In which month the number of loaves baked was minimum?
- 4) What is the number of loaves baked in all the four months?
- 5) How many loaves were baked in March ?